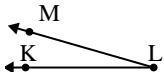




Solve each problem.

Answers

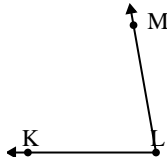
1)



Which choice best represents $\angle KLM$?

- A. 16°
- B. 83°
- C. 104°
- D. 131°

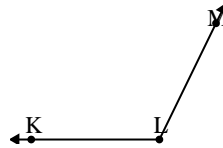
2)



Which choice best represents $\angle KLM$?

- A. 80°
- B. 15°
- C. 134°
- D. 102°

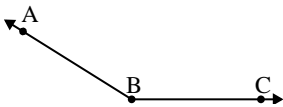
3)



Which choice best represents $\angle KLM$?

- A. 93°
- B. 38°
- C. 116°
- D. 11°

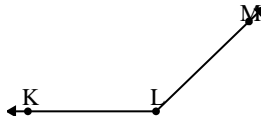
4)



Which choice best represents $\angle ABC$?

- A. 121°
- B. 100°
- C. 54°
- D. 148°

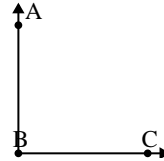
5)



Which choice best represents $\angle KLM$?

- A. 161°
- B. 12°
- C. 136°
- D. 95°

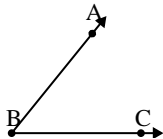
6)



Which choice best represents $\angle ABC$?

- A. 33°
- B. 60°
- C. 132°
- D. 90°

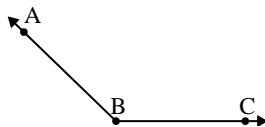
7)



Which choice best represents $\angle ABC$?

- A. 98°
- B. 10°
- C. 51°
- D. 136°

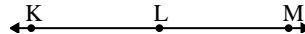
8)



Which choice best represents $\angle ABC$?

- A. 75°
- B. 136°
- C. 13°
- D. 49°

9)



Which choice best represents $\angle KLM$?

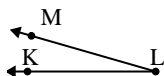
- A. 7°
- B. 157°
- C. 104°
- D. 180°

1. _____
2. _____
3. _____
4. _____
5. _____
6. _____
7. _____
8. _____
9. _____



Solve each problem.

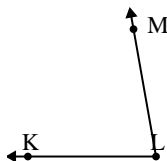
1)



Which choice best represents $\angle KLM$?

- A. 16°
- B. 83°
- C. 104°
- D. 131°

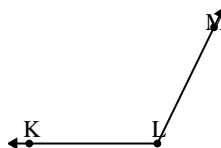
2)



Which choice best represents $\angle KLM$?

- A. 80°
- B. 15°
- C. 134°
- D. 102°

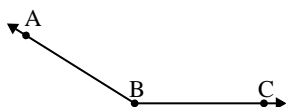
3)



Which choice best represents $\angle KLM$?

- A. 93°
- B. 38°
- C. 116°
- D. 11°

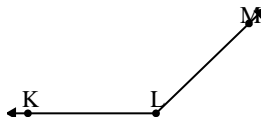
4)



Which choice best represents $\angle ABC$?

- A. 121°
- B. 100°
- C. 54°
- D. 148°

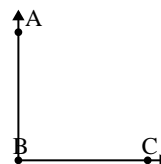
5)



Which choice best represents $\angle KLM$?

- A. 161°
- B. 12°
- C. 136°
- D. 95°

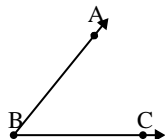
6)



Which choice best represents $\angle ABC$?

- A. 33°
- B. 60°
- C. 132°
- D. 90°

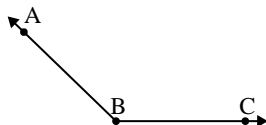
7)



Which choice best represents $\angle ABC$?

- A. 98°
- B. 10°
- C. 51°
- D. 136°

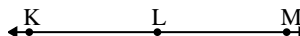
8)



Which choice best represents $\angle ABC$?

- A. 75°
- B. 136°
- C. 13°
- D. 49°

9)



Which choice best represents $\angle KLM$?

- A. 7°
- B. 157°
- C. 104°
- D. 180°

Answers

1. **A**

2. **A**

3. **C**

4. **D**

5. **C**

6. **D**

7. **C**

8. **B**

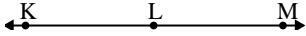
9. **D**



Solve each problem.

Answers

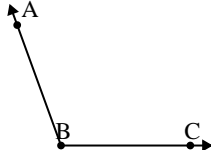
1)



Which choice best represents $\angle KLM$?

- A. 180°
- B. 115°
- C. 1°
- D. 24°

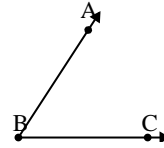
2)



Which choice best represents $\angle ABC$?

- A. 7°
- B. 164°
- C. 110°
- D. 60°

3)



Which choice best represents $\angle ABC$?

- A. 162°
- B. 99°
- C. 57°
- D. 3°

1. _____

2. _____

3. _____

4. _____

5. _____

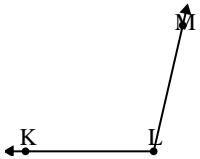
6. _____

7. _____

8. _____

9. _____

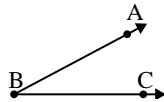
4)



Which choice best represents $\angle KLM$?

- A. 103°
- B. 42°
- C. 82°
- D. 13°

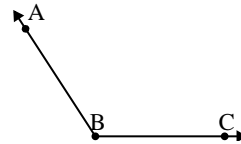
5)



Which choice best represents $\angle ABC$?

- A. 102°
- B. 147°
- C. 28°
- D. 80°

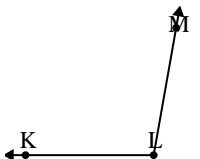
6)



Which choice best represents $\angle ABC$?

- A. 123°
- B. 91°
- C. 151°
- D. 19°

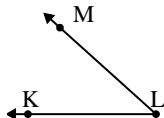
7)



Which choice best represents $\angle KLM$?

- A. 75°
- B. 134°
- C. 100°
- D. 15°

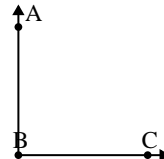
8)



Which choice best represents $\angle KLM$?

- A. 21°
- B. 42°
- C. 149°
- D. 68°

9)



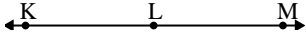
Which choice best represents $\angle ABC$?

- A. 29°
- B. 90°
- C. 163°
- D. 133°



Solve each problem.

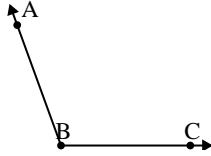
1)



Which choice best represents $\angle KLM$?

- A. 180°
- B. 115°
- C. 1°
- D. 24°

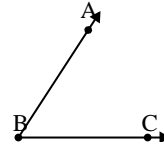
2)



Which choice best represents $\angle ABC$?

- A. 7°
- B. 164°
- C. 110°
- D. 60°

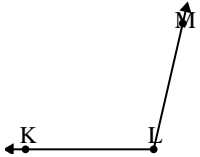
3)



Which choice best represents $\angle ABC$?

- A. 162°
- B. 99°
- C. 57°
- D. 3°

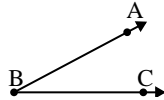
4)



Which choice best represents $\angle KLM$?

- A. 103°
- B. 42°
- C. 82°
- D. 13°

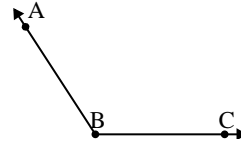
5)



Which choice best represents $\angle ABC$?

- A. 102°
- B. 147°
- C. 28°
- D. 80°

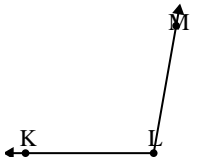
6)



Which choice best represents $\angle ABC$?

- A. 123°
- B. 91°
- C. 151°
- D. 19°

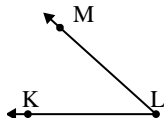
7)



Which choice best represents $\angle KLM$?

- A. 75°
- B. 134°
- C. 100°
- D. 15°

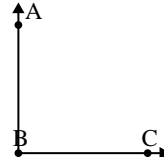
8)



Which choice best represents $\angle KLM$?

- A. 21°
- B. 42°
- C. 149°
- D. 68°

9)



Which choice best represents $\angle ABC$?

- A. 29°
- B. 90°
- C. 163°
- D. 133°

Answers

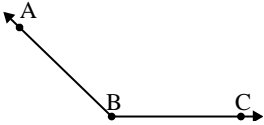
- 1. **A**
- 2. **C**
- 3. **C**
- 4. **A**
- 5. **C**
- 6. **A**
- 7. **C**
- 8. **B**
- 9. **B**



Solve each problem.

Answers

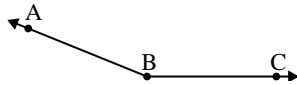
1)



Which choice best represents $\angle ABC$?

- A. 32°
- B. 112°
- C. 174°
- D. 136°

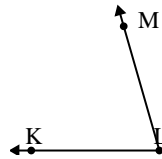
2)



Which choice best represents $\angle ABC$?

- A. 49°
- B. 131°
- C. 4°
- D. 158°

3)



Which choice best represents $\angle KLM$?

- A. 74°
- B. 43°
- C. 103°
- D. 3°

1. _____

2. _____

3. _____

4. _____

5. _____

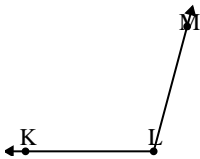
6. _____

7. _____

8. _____

9. _____

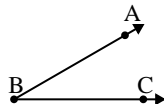
4)



Which choice best represents $\angle KLM$?

- A. 105°
- B. 138°
- C. 67°
- D. 42°

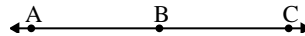
5)



Which choice best represents $\angle ABC$?

- A. 78°
- B. 145°
- C. 30°
- D. 1°

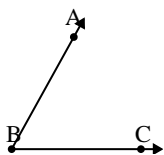
6)



Which choice best represents $\angle ABC$?

- A. 143°
- B. 86°
- C. 14°
- D. 180°

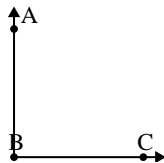
7)



Which choice best represents $\angle ABC$?

- A. 159°
- B. 12°
- C. 97°
- D. 61°

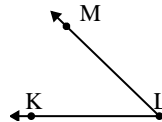
8)



Which choice best represents $\angle ABC$?

- A. 143°
- B. 90°
- C. 165°
- D. 2°

9)

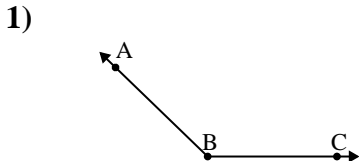


Which choice best represents $\angle KLM$?

- A. 114°
- B. 23°
- C. 44°
- D. 74°

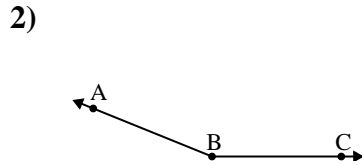


Solve each problem.



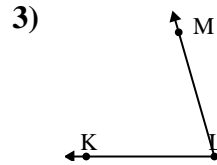
Which choice best represents $\angle ABC$?

- A. 32°
- B. 112°
- C. 174°
- D. 136°



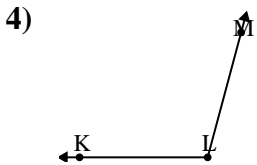
Which choice best represents $\angle ABC$?

- A. 49°
- B. 131°
- C. 4°
- D. 158°



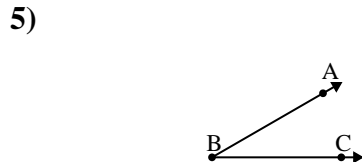
Which choice best represents $\angle KLM$?

- A. 74°
- B. 43°
- C. 103°
- D. 3°



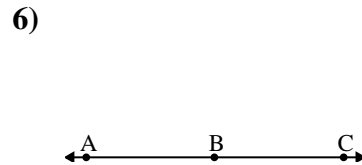
Which choice best represents $\angle KLM$?

- A. 105°
- B. 138°
- C. 67°
- D. 42°



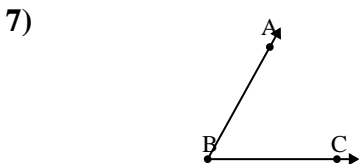
Which choice best represents $\angle ABC$?

- A. 78°
- B. 145°
- C. 30°
- D. 1°



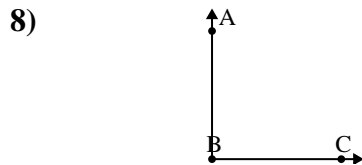
Which choice best represents $\angle ABC$?

- A. 143°
- B. 86°
- C. 14°
- D. 180°



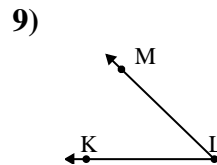
Which choice best represents $\angle ABC$?

- A. 159°
- B. 12°
- C. 97°
- D. 61°



Which choice best represents $\angle ABC$?

- A. 143°
- B. 90°
- C. 165°
- D. 2°



Which choice best represents $\angle KLM$?

- A. 114°
- B. 23°
- C. 44°
- D. 74°

Answers

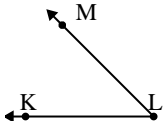
- 1. **D**
- 2. **D**
- 3. **A**
- 4. **A**
- 5. **C**
- 6. **D**
- 7. **D**
- 8. **B**
- 9. **C**



Solve each problem.

Answers

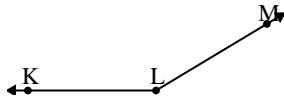
1)



Which choice best represents $\angle KLM$?

- A. 16°
- B. 138°
- C. 78°
- D. 45°

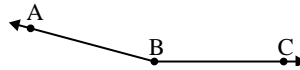
2)



Which choice best represents $\angle KLM$?

- A. 149°
- B. 127°
- C. 95°
- D. 1°

3)

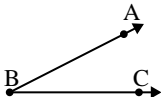


Which choice best represents $\angle ABC$?

- A. 8°
- B. 38°
- C. 165°
- D. 124°

1. _____
2. _____
3. _____
4. _____
5. _____
6. _____
7. _____
8. _____
9. _____

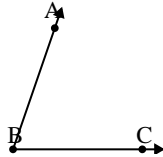
4)



Which choice best represents $\angle ABC$?

- A. 80°
- B. 50°
- C. 27°
- D. 136°

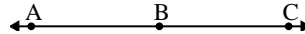
5)



Which choice best represents $\angle ABC$?

- A. 71°
- B. 95°
- C. 9°
- D. 33°

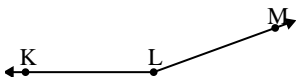
6)



Which choice best represents $\angle ABC$?

- A. 88°
- B. 180°
- C. 133°
- D. 18°

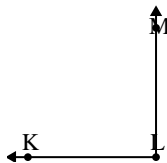
7)



Which choice best represents $\angle KLM$?

- A. 131°
- B. 28°
- C. 72°
- D. 160°

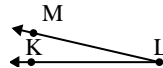
8)



Which choice best represents $\angle KLM$?

- A. 162°
- B. 141°
- C. 56°
- D. 90°

9)



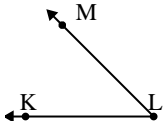
Which choice best represents $\angle KLM$?

- A. 44°
- B. 170°
- C. 147°
- D. 13°



Solve each problem.

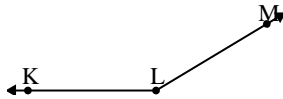
1)



Which choice best represents $\angle KLM$?

- A. 16°
- B. 138°
- C. 78°
- D. 45°

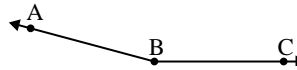
2)



Which choice best represents $\angle KLM$?

- A. 149°
- B. 127°
- C. 95°
- D. 1°

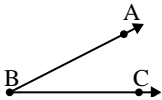
3)



Which choice best represents $\angle ABC$?

- A. 8°
- B. 38°
- C. 165°
- D. 124°

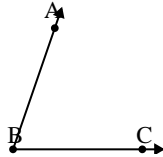
4)



Which choice best represents $\angle ABC$?

- A. 80°
- B. 50°
- C. 27°
- D. 136°

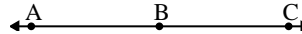
5)



Which choice best represents $\angle ABC$?

- A. 71°
- B. 95°
- C. 9°
- D. 33°

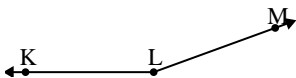
6)



Which choice best represents $\angle ABC$?

- A. 88°
- B. 180°
- C. 133°
- D. 18°

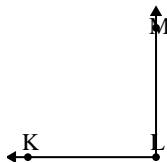
7)



Which choice best represents $\angle KLM$?

- A. 131°
- B. 28°
- C. 72°
- D. 160°

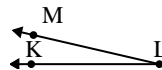
8)



Which choice best represents $\angle KLM$?

- A. 162°
- B. 141°
- C. 56°
- D. 90°

9)



Which choice best represents $\angle KLM$?

- A. 44°
- B. 170°
- C. 147°
- D. 13°

Answers

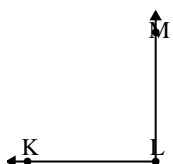
- 1. **D**
- 2. **A**
- 3. **C**
- 4. **C**
- 5. **A**
- 6. **B**
- 7. **D**
- 8. **D**
- 9. **D**



Solve each problem.

Answers

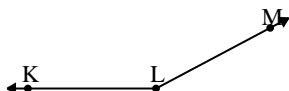
1)



Which choice best represents $\angle KLM$?

- A. 13°
- B. 147°
- C. 90°
- D. 42°

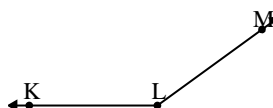
2)



Which choice best represents $\angle KLM$?

- A. 129°
- B. 11°
- C. 178°
- D. 152°

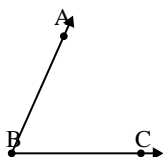
3)



Which choice best represents $\angle KLM$?

- A. 49°
- B. 91°
- C. 1°
- D. 144°

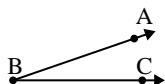
4)



Which choice best represents $\angle ABC$?

- A. 30°
- B. 66°
- C. 97°
- D. 127°

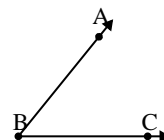
5)



Which choice best represents $\angle ABC$?

- A. 79°
- B. 117°
- C. 19°
- D. 53°

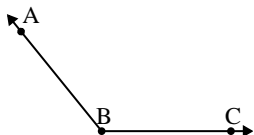
6)



Which choice best represents $\angle ABC$?

- A. 9°
- B. 160°
- C. 51°
- D. 133°

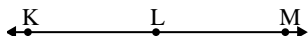
7)



Which choice best represents $\angle ABC$?

- A. 178°
- B. 154°
- C. 129°
- D. 5°

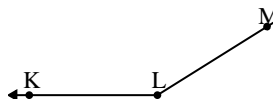
8)



Which choice best represents $\angle KLM$?

- A. 6°
- B. 180°
- C. 59°
- D. 123°

9)



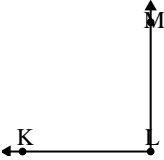
Which choice best represents $\angle KLM$?

- A. 124°
- B. 64°
- C. 148°
- D. 28°

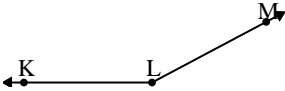
1. _____
2. _____
3. _____
4. _____
5. _____
6. _____
7. _____
8. _____
9. _____



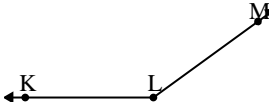
Solve each problem.

1)  Which choice best represents $\angle KLM$?

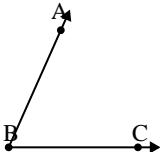
A. 13°
 B. 147°
 C. 90°
 D. 42°

2)  Which choice best represents $\angle KLM$?

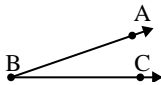
A. 129°
 B. 11°
 C. 178°
 D. 152°

3)  Which choice best represents $\angle KLM$?

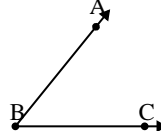
A. 49°
 B. 91°
 C. 1°
 D. 144°

4)  Which choice best represents $\angle ABC$?

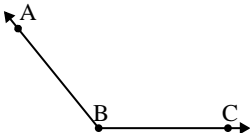
A. 30°
 B. 66°
 C. 97°
 D. 127°

5)  Which choice best represents $\angle ABC$?

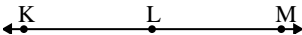
A. 79°
 B. 117°
 C. 19°
 D. 53°

6)  Which choice best represents $\angle ABC$?

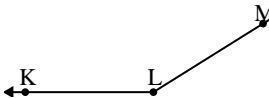
A. 9°
 B. 160°
 C. 51°
 D. 133°

7)  Which choice best represents $\angle ABC$?

A. 178°
 B. 154°
 C. 129°
 D. 5°

8)  Which choice best represents $\angle KLM$?

A. 6°
 B. 180°
 C. 59°
 D. 123°

9)  Which choice best represents $\angle KLM$?

A. 124°
 B. 64°
 C. 148°
 D. 28°

Answers

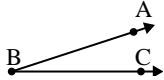
1. **C**
2. **D**
3. **D**
4. **B**
5. **C**
6. **C**
7. **C**
8. **B**
9. **C**



Solve each problem.

Answers

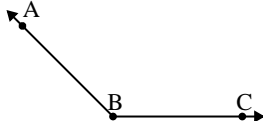
1)



Which choice best represents $\angle ABC$?

- A. 91°
- B. 18°
- C. 173°
- D. 133°

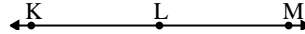
2)



Which choice best represents $\angle ABC$?

- A. 157°
- B. 37°
- C. 135°
- D. 7°

3)



Which choice best represents $\angle KLM$?

- A. 57°
- B. 180°
- C. 12°
- D. 158°

1. _____

2. _____

3. _____

4. _____

5. _____

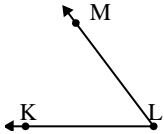
6. _____

7. _____

8. _____

9. _____

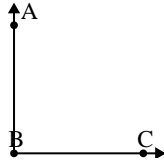
4)



Which choice best represents $\angle KLM$?

- A. 147°
- B. 13°
- C. 53°
- D. 170°

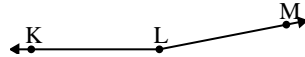
5)



Which choice best represents $\angle ABC$?

- A. 90°
- B. 114°
- C. 50°
- D. 4°

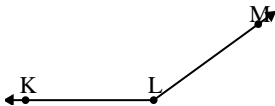
6)



Which choice best represents $\angle KLM$?

- A. 107°
- B. 169°
- C. 11°
- D. 39°

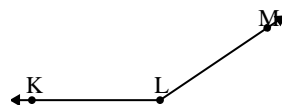
7)



Which choice best represents $\angle KLM$?

- A. 144°
- B. 38°
- C. 104°
- D. 2°

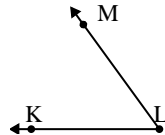
8)



Which choice best represents $\angle KLM$?

- A. 86°
- B. 40°
- C. 146°
- D. 173°

9)



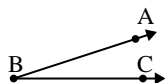
Which choice best represents $\angle KLM$?

- A. 54°
- B. 89°
- C. 28°
- D. 151°



Solve each problem.

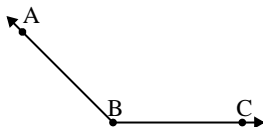
1)



Which choice best represents $\angle ABC$?

- A. 91°
- B. 18°
- C. 173°
- D. 133°

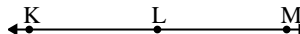
2)



Which choice best represents $\angle ABC$?

- A. 157°
- B. 37°
- C. 135°
- D. 7°

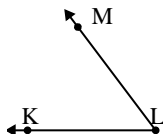
3)



Which choice best represents $\angle KLM$?

- A. 57°
- B. 180°
- C. 12°
- D. 158°

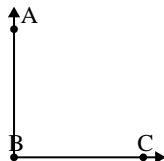
4)



Which choice best represents $\angle KLM$?

- A. 147°
- B. 13°
- C. 53°
- D. 170°

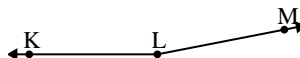
5)



Which choice best represents $\angle ABC$?

- A. 90°
- B. 114°
- C. 50°
- D. 4°

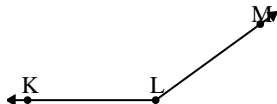
6)



Which choice best represents $\angle KLM$?

- A. 107°
- B. 169°
- C. 11°
- D. 39°

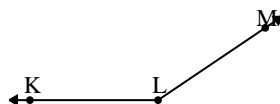
7)



Which choice best represents $\angle KLM$?

- A. 144°
- B. 38°
- C. 104°
- D. 2°

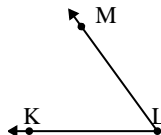
8)



Which choice best represents $\angle KLM$?

- A. 86°
- B. 40°
- C. 146°
- D. 173°

9)



Which choice best represents $\angle KLM$?

- A. 54°
- B. 89°
- C. 28°
- D. 151°

Answers

1. **B**

2. **C**

3. **B**

4. **C**

5. **A**

6. **B**

7. **A**

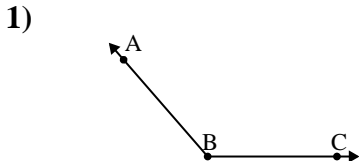
8. **C**

9. **A**



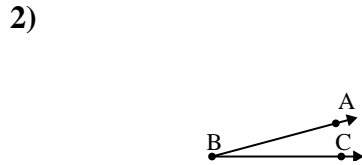
Solve each problem.

Answers



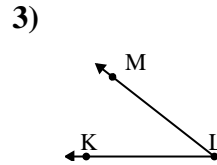
Which choice best represents $\angle ABC$?

- A. 107°
- B. 131°
- C. 26°
- D. 57°



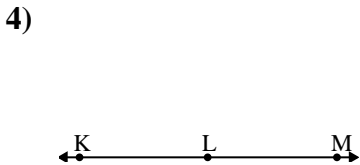
Which choice best represents $\angle ABC$?

- A. 154°
- B. 15°
- C. 49°
- D. 76°



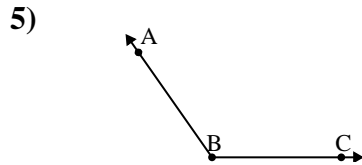
Which choice best represents $\angle KLM$?

- A. 38°
- B. 81°
- C. 175°
- D. 107°



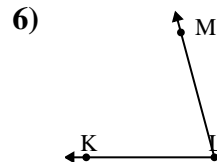
Which choice best represents $\angle KLM$?

- A. 156°
- B. 71°
- C. 180°
- D. 25°



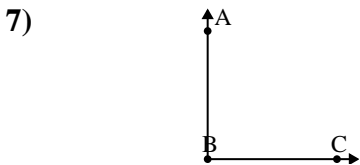
Which choice best represents $\angle ABC$?

- A. 58°
- B. 33°
- C. 4°
- D. 125°



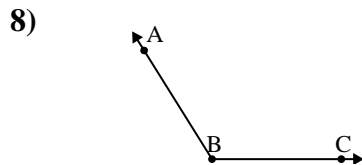
Which choice best represents $\angle KLM$?

- A. 29°
- B. 172°
- C. 7°
- D. 75°



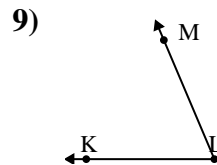
Which choice best represents $\angle ABC$?

- A. 69°
- B. 127°
- C. 3°
- D. 90°



Which choice best represents $\angle ABC$?

- A. 122°
- B. 84°
- C. 37°
- D. 158°



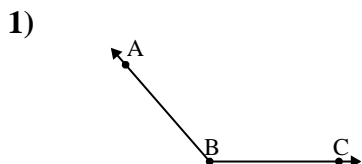
Which choice best represents $\angle KLM$?

- A. 122°
- B. 165°
- C. 67°
- D. 143°

- 1. _____
- 2. _____
- 3. _____
- 4. _____
- 5. _____
- 6. _____
- 7. _____
- 8. _____
- 9. _____

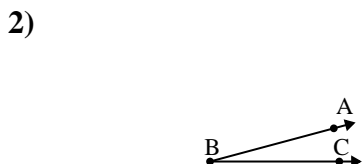


Solve each problem.



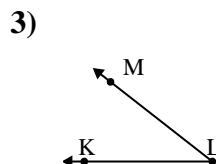
Which choice best represents $\angle ABC$?

- A. 107°
- B. 131°
- C. 26°
- D. 57°



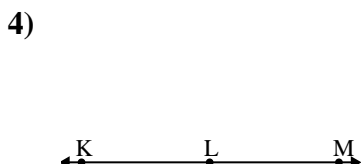
Which choice best represents $\angle ABC$?

- A. 154°
- B. 15°
- C. 49°
- D. 76°



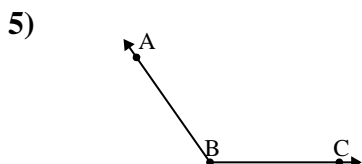
Which choice best represents $\angle KLM$?

- A. 38°
- B. 81°
- C. 175°
- D. 107°



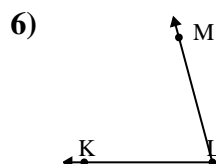
Which choice best represents $\angle KLM$?

- A. 156°
- B. 71°
- C. 180°
- D. 25°



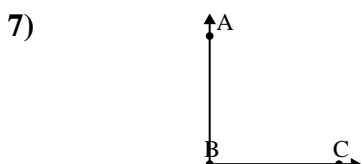
Which choice best represents $\angle ABC$?

- A. 58°
- B. 33°
- C. 4°
- D. 125°



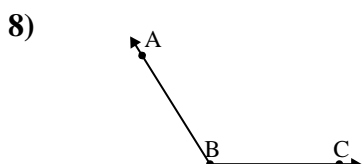
Which choice best represents $\angle KLM$?

- A. 29°
- B. 172°
- C. 7°
- D. 75°



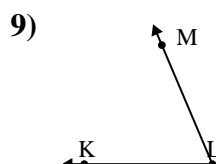
Which choice best represents $\angle ABC$?

- A. 69°
- B. 127°
- C. 3°
- D. 90°



Which choice best represents $\angle ABC$?

- A. 122°
- B. 84°
- C. 37°
- D. 158°



Which choice best represents $\angle KLM$?

- A. 122°
- B. 165°
- C. 67°
- D. 143°

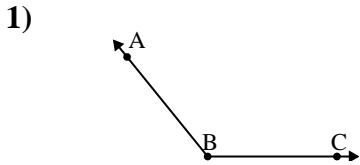
Answers

- 1. **B**
- 2. **B**
- 3. **A**
- 4. **C**
- 5. **D**
- 6. **D**
- 7. **D**
- 8. **A**
- 9. **C**



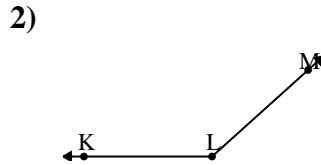
Solve each problem.

Answers



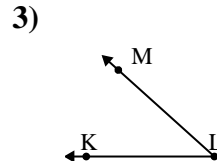
Which choice best represents $\angle ABC$?

- A. 129°
- B. 48°
- C. 153°
- D. 175°



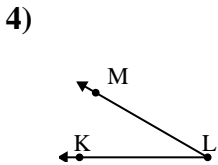
Which choice best represents $\angle KLM$?

- A. 176°
- B. 66°
- C. 40°
- D. 138°



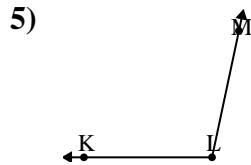
Which choice best represents $\angle KLM$?

- A. 148°
- B. 126°
- C. 42°
- D. 94°



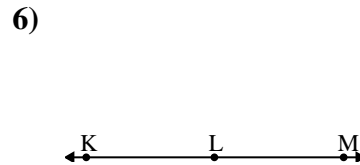
Which choice best represents $\angle KLM$?

- A. 30°
- B. 7°
- C. 156°
- D. 66°



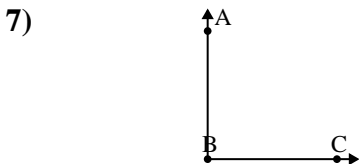
Which choice best represents $\angle KLM$?

- A. 129°
- B. 102°
- C. 13°
- D. 56°



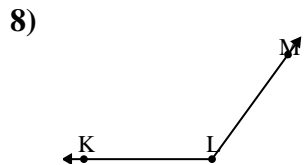
Which choice best represents $\angle KLM$?

- A. 28°
- B. 146°
- C. 2°
- D. 180°



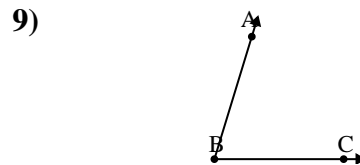
Which choice best represents $\angle ABC$?

- A. 35°
- B. 90°
- C. 172°
- D. 62°



Which choice best represents $\angle KLM$?

- A. 67°
- B. 153°
- C. 18°
- D. 126°



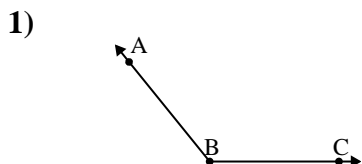
Which choice best represents $\angle ABC$?

- A. 123°
- B. 42°
- C. 157°
- D. 73°

- 1. _____
- 2. _____
- 3. _____
- 4. _____
- 5. _____
- 6. _____
- 7. _____
- 8. _____
- 9. _____

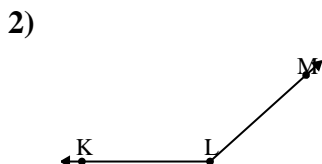


Solve each problem.



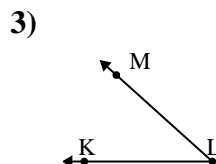
Which choice best represents $\angle ABC$?

- A. 129°
- B. 48°
- C. 153°
- D. 175°



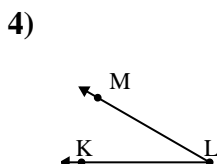
Which choice best represents $\angle KLM$?

- A. 176°
- B. 66°
- C. 40°
- D. 138°



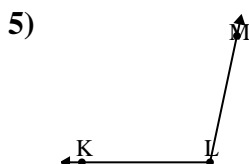
Which choice best represents $\angle KLM$?

- A. 148°
- B. 126°
- C. 42°
- D. 94°



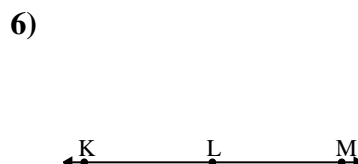
Which choice best represents $\angle KLM$?

- A. 30°
- B. 7°
- C. 156°
- D. 66°



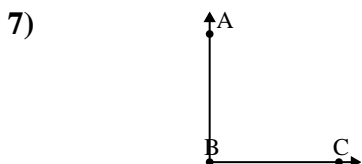
Which choice best represents $\angle KLM$?

- A. 129°
- B. 102°
- C. 13°
- D. 56°



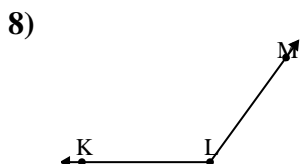
Which choice best represents $\angle KLM$?

- A. 28°
- B. 146°
- C. 2°
- D. 180°



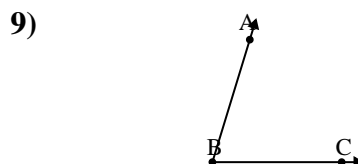
Which choice best represents $\angle ABC$?

- A. 35°
- B. 90°
- C. 172°
- D. 62°



Which choice best represents $\angle KLM$?

- A. 67°
- B. 153°
- C. 18°
- D. 126°



Which choice best represents $\angle ABC$?

- A. 123°
- B. 42°
- C. 157°
- D. 73°

Answers

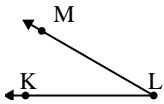
- 1. **A**
- 2. **D**
- 3. **C**
- 4. **A**
- 5. **B**
- 6. **D**
- 7. **B**
- 8. **D**
- 9. **D**



Solve each problem.

Answers

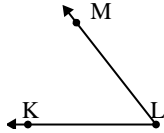
1)



Which choice best represents $\angle KLM$?

- A. 176°
- B. 143°
- C. 101°
- D. 30°

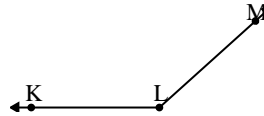
2)



Which choice best represents $\angle KLM$?

- A. 118°
- B. 52°
- C. 86°
- D. 9°

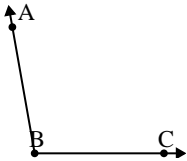
3)



Which choice best represents $\angle KLM$?

- A. 5°
- B. 116°
- C. 138°
- D. 79°

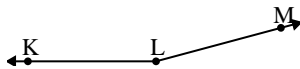
4)



Which choice best represents $\angle ABC$?

- A. 19°
- B. 150°
- C. 124°
- D. 100°

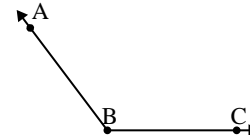
5)



Which choice best represents $\angle KLM$?

- A. 114°
- B. 165°
- C. 0°
- D. 66°

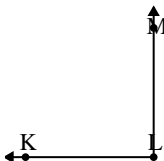
6)



Which choice best represents $\angle ABC$?

- A. 16°
- B. 127°
- C. 92°
- D. 151°

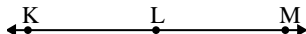
7)



Which choice best represents $\angle KLM$?

- A. 31°
- B. 122°
- C. 90°
- D. 6°

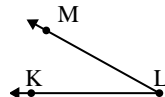
8)



Which choice best represents $\angle KLM$?

- A. 180°
- B. 105°
- C. 58°
- D. 130°

9)



Which choice best represents $\angle KLM$?

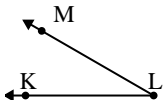
- A. 116°
- B. 178°
- C. 140°
- D. 29°

1. _____
2. _____
3. _____
4. _____
5. _____
6. _____
7. _____
8. _____
9. _____



Solve each problem.

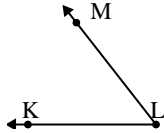
1)



Which choice best represents $\angle KLM$?

- A. 176°
- B. 143°
- C. 101°
- D. 30°

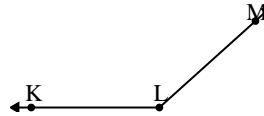
2)



Which choice best represents $\angle KLM$?

- A. 118°
- B. 52°
- C. 86°
- D. 9°

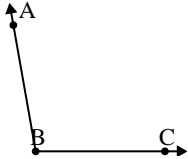
3)



Which choice best represents $\angle KLM$?

- A. 5°
- B. 116°
- C. 138°
- D. 79°

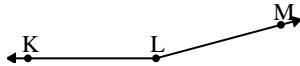
4)



Which choice best represents $\angle ABC$?

- A. 19°
- B. 150°
- C. 124°
- D. 100°

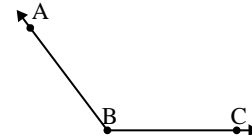
5)



Which choice best represents $\angle KLM$?

- A. 114°
- B. 165°
- C. 0°
- D. 66°

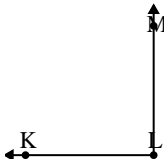
6)



Which choice best represents $\angle ABC$?

- A. 16°
- B. 127°
- C. 92°
- D. 151°

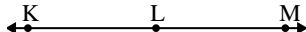
7)



Which choice best represents $\angle KLM$?

- A. 31°
- B. 122°
- C. 90°
- D. 6°

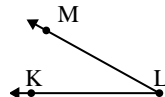
8)



Which choice best represents $\angle KLM$?

- A. 180°
- B. 105°
- C. 58°
- D. 130°

9)



Which choice best represents $\angle KLM$?

- A. 116°
- B. 178°
- C. 140°
- D. 29°

Answers

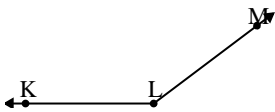
- 1. **D**
- 2. **B**
- 3. **C**
- 4. **D**
- 5. **B**
- 6. **B**
- 7. **C**
- 8. **A**
- 9. **D**



Solve each problem.

Answers

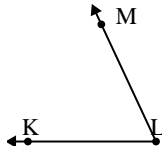
1)



Which choice best represents $\angle KLM$?

- A. 0°
- B. 35°
- C. 115°
- D. 143°

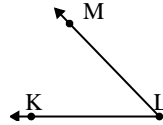
2)



Which choice best represents $\angle KLM$?

- A. 134°
- B. 65°
- C. 18°
- D. 44°

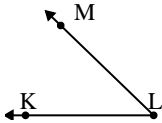
3)



Which choice best represents $\angle KLM$?

- A. 153°
- B. 7°
- C. 46°
- D. 78°

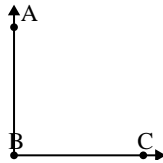
4)



Which choice best represents $\angle KLM$?

- A. 84°
- B. 174°
- C. 44°
- D. 136°

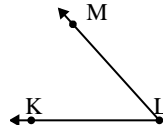
5)



Which choice best represents $\angle ABC$?

- A. 167°
- B. 146°
- C. 90°
- D. 23°

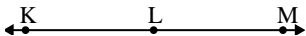
6)



Which choice best represents $\angle KLM$?

- A. 99°
- B. 125°
- C. 48°
- D. 69°

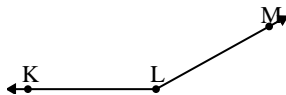
7)



Which choice best represents $\angle KLM$?

- A. 122°
- B. 180°
- C. 65°
- D. 153°

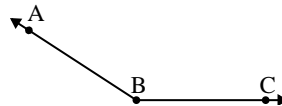
8)



Which choice best represents $\angle KLM$?

- A. 151°
- B. 92°
- C. 115°
- D. 27°

9)



Which choice best represents $\angle ABC$?

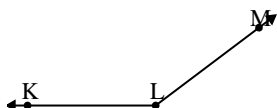
- A. 124°
- B. 89°
- C. 147°
- D. 31°

1. _____
2. _____
3. _____
4. _____
5. _____
6. _____
7. _____
8. _____
9. _____



Solve each problem.

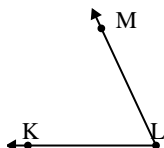
1)



Which choice best represents $\angle KLM$?

- A. 0°
- B. 35°
- C. 115°
- D. 143°

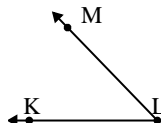
2)



Which choice best represents $\angle KLM$?

- A. 134°
- B. 65°
- C. 18°
- D. 44°

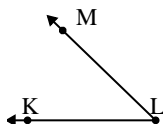
3)



Which choice best represents $\angle KLM$?

- A. 153°
- B. 7°
- C. 46°
- D. 78°

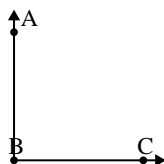
4)



Which choice best represents $\angle KLM$?

- A. 84°
- B. 174°
- C. 44°
- D. 136°

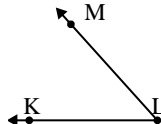
5)



Which choice best represents $\angle ABC$?

- A. 167°
- B. 146°
- C. 90°
- D. 23°

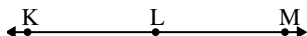
6)



Which choice best represents $\angle KLM$?

- A. 99°
- B. 125°
- C. 48°
- D. 69°

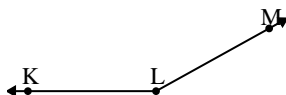
7)



Which choice best represents $\angle KLM$?

- A. 122°
- B. 180°
- C. 65°
- D. 153°

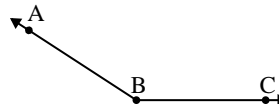
8)



Which choice best represents $\angle KLM$?

- A. 151°
- B. 92°
- C. 115°
- D. 27°

9)



Which choice best represents $\angle ABC$?

- A. 124°
- B. 89°
- C. 147°
- D. 31°

Answers

- 1. **D**
- 2. **B**
- 3. **C**
- 4. **C**
- 5. **C**
- 6. **C**
- 7. **B**
- 8. **A**
- 9. **C**