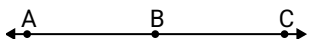




Solve each problem.

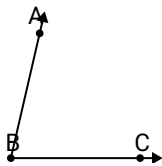
**Answers**

1)

Which choice best represents  $\angle ABC$ ?

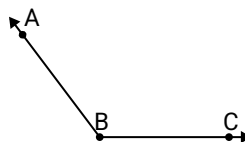
- A.  $180^\circ$
- B.  $159^\circ$
- C.  $17^\circ$
- D.  $118^\circ$

2)

Which choice best represents  $\angle ABC$ ?

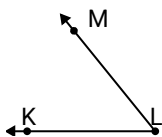
- A.  $77^\circ$
- B.  $28^\circ$
- C.  $164^\circ$
- D.  $2^\circ$

3)

Which choice best represents  $\angle ABC$ ?

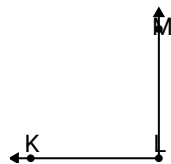
- A.  $14^\circ$
- B.  $164^\circ$
- C.  $127^\circ$
- D.  $106^\circ$

4)

Which choice best represents  $\angle KLM$ ?

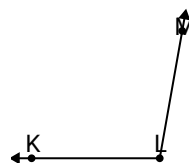
- A.  $151^\circ$
- B.  $1^\circ$
- C.  $90^\circ$
- D.  $51^\circ$

5)

Which choice best represents  $\angle KLM$ ?

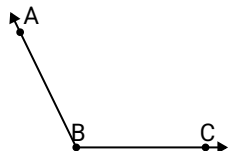
- A.  $90^\circ$
- B.  $31^\circ$
- C.  $176^\circ$
- D.  $57^\circ$

6)

Which choice best represents  $\angle KLM$ ?

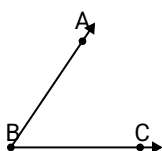
- A.  $100^\circ$
- B.  $22^\circ$
- C.  $1^\circ$
- D.  $175^\circ$

7)

Which choice best represents  $\angle ABC$ ?

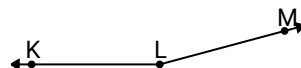
- A.  $54^\circ$
- B.  $171^\circ$
- C.  $116^\circ$
- D.  $31^\circ$

8)

Which choice best represents  $\angle ABC$ ?

- A.  $24^\circ$
- B.  $56^\circ$
- C.  $148^\circ$
- D.  $115^\circ$

9)

Which choice best represents  $\angle KLM$ ?

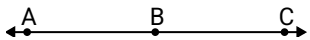
- A.  $57^\circ$
- B.  $165^\circ$
- C.  $29^\circ$
- D.  $119^\circ$

- 1. \_\_\_\_\_
- 2. \_\_\_\_\_
- 3. \_\_\_\_\_
- 4. \_\_\_\_\_
- 5. \_\_\_\_\_
- 6. \_\_\_\_\_
- 7. \_\_\_\_\_
- 8. \_\_\_\_\_
- 9. \_\_\_\_\_



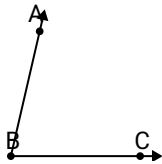
Solve each problem.

1)

Which choice best represents  $\angle ABC$ ?

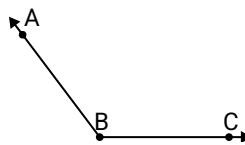
- A.  $180^\circ$
- B.  $159^\circ$
- C.  $17^\circ$
- D.  $118^\circ$

2)

Which choice best represents  $\angle ABC$ ?

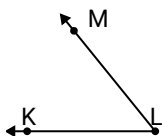
- A.  $77^\circ$
- B.  $28^\circ$
- C.  $164^\circ$
- D.  $2^\circ$

3)

Which choice best represents  $\angle ABC$ ?

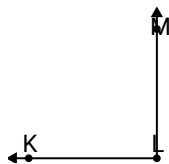
- A.  $14^\circ$
- B.  $164^\circ$
- C.  $127^\circ$
- D.  $106^\circ$

4)

Which choice best represents  $\angle KLM$ ?

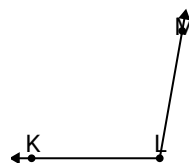
- A.  $151^\circ$
- B.  $1^\circ$
- C.  $90^\circ$
- D.  $51^\circ$

5)

Which choice best represents  $\angle KLM$ ?

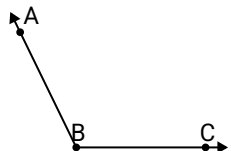
- A.  $90^\circ$
- B.  $31^\circ$
- C.  $176^\circ$
- D.  $57^\circ$

6)

Which choice best represents  $\angle KLM$ ?

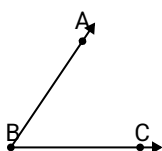
- A.  $100^\circ$
- B.  $22^\circ$
- C.  $1^\circ$
- D.  $175^\circ$

7)

Which choice best represents  $\angle ABC$ ?

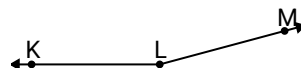
- A.  $54^\circ$
- B.  $171^\circ$
- C.  $116^\circ$
- D.  $31^\circ$

8)

Which choice best represents  $\angle ABC$ ?

- A.  $24^\circ$
- B.  $56^\circ$
- C.  $148^\circ$
- D.  $115^\circ$

9)

Which choice best represents  $\angle KLM$ ?

- A.  $57^\circ$
- B.  $165^\circ$
- C.  $29^\circ$
- D.  $119^\circ$

**Answers**

- 1. **A**
- 2. **A**
- 3. **C**
- 4. **D**
- 5. **A**
- 6. **A**
- 7. **C**
- 8. **B**
- 9. **B**