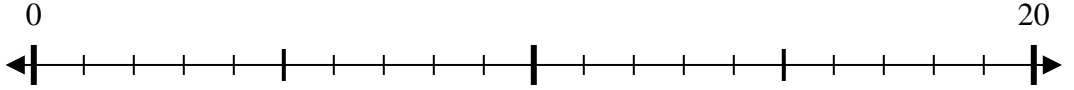
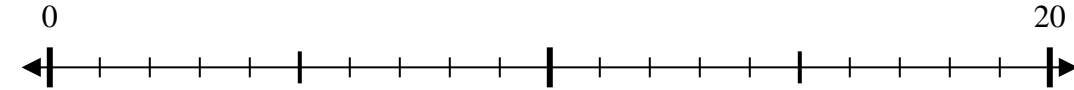













Mark the location of the number on the numberline.

- Ex) $\begin{array}{c} 0 \\ 8 \end{array}$ 
- 1) $\begin{array}{c} 0 \\ 19 \end{array}$ 
- 2) $\begin{array}{c} 0 \\ 5 \end{array}$ 
- 3) $\begin{array}{c} 0 \\ 4 \end{array}$ 
- 4) $\begin{array}{c} 0 \\ 17 \end{array}$ 
- 5) $\begin{array}{c} 0 \\ 15 \end{array}$ 
- 6) $\begin{array}{c} 0 \\ 3 \end{array}$ 
- 7) $\begin{array}{c} 0 \\ 2 \end{array}$ 
- 8) $\begin{array}{c} 0 \\ 16 \end{array}$ 
- 9) $\begin{array}{c} 0 \\ 6 \end{array}$ 
- 10) $\begin{array}{c} 0 \\ 18 \end{array}$ 



Mark the location of the number on the numberline.

