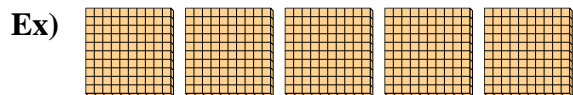
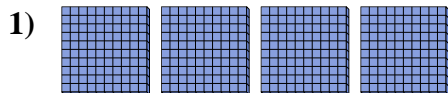




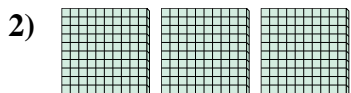
Use the blocks to determine the total quantities.




5 hundreds = 50 tens = 500 ones



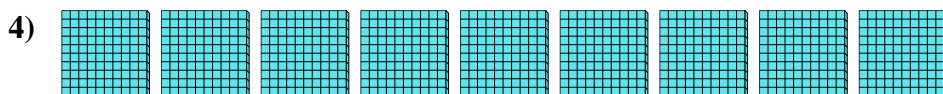
_____ hundreds = _____ tens = _____ ones




_____ hundreds = _____ tens = _____ ones



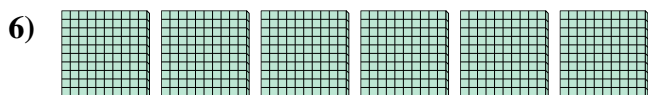
_____ hundreds = _____ tens = _____ ones



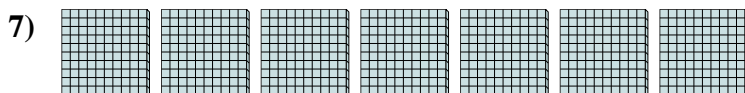
_____ hundreds = _____ tens = _____ ones



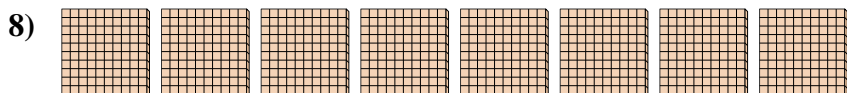
_____ hundreds = _____ tens = _____ ones



_____ hundreds = _____ tens = _____ ones



_____ hundreds = _____ tens = _____ ones



_____ hundreds = _____ tens = _____ ones

Answers

Ex. 5 50 500

1. _____

2. _____

3. _____

4. _____

5. _____

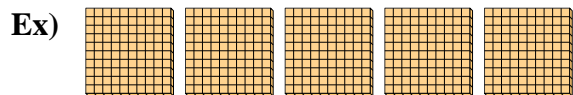
6. _____

7. _____

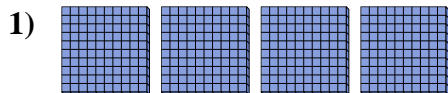
8. _____



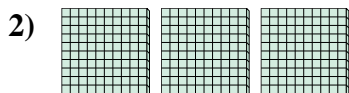
Use the blocks to determine the total quantities.




5 hundreds = 50 tens = 500 ones



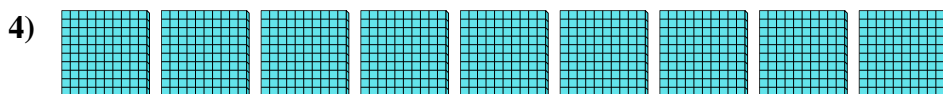
4 hundreds = 40 tens = 400 ones




3 hundreds = 30 tens = 300 ones



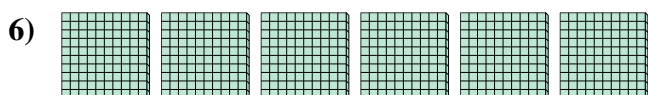
2 hundreds = 20 tens = 200 ones



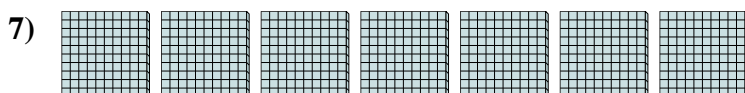
9 hundreds = 90 tens = 900 ones



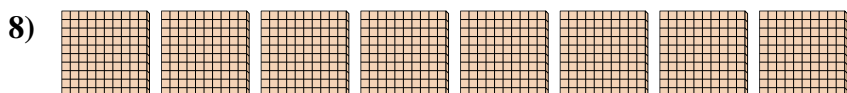
1 hundreds = 10 tens = 100 ones



6 hundreds = 60 tens = 600 ones



7 hundreds = 70 tens = 700 ones



8 hundreds = 80 tens = 800 ones

Answers

| | | | |
|-----|----------|-----------|------------|
| Ex. | <u>5</u> | <u>50</u> | <u>500</u> |
| 1. | <u>4</u> | <u>40</u> | <u>400</u> |
| 2. | <u>3</u> | <u>30</u> | <u>300</u> |
| 3. | <u>2</u> | <u>20</u> | <u>200</u> |
| 4. | <u>9</u> | <u>90</u> | <u>900</u> |
| 5. | <u>1</u> | <u>10</u> | <u>100</u> |
| 6. | <u>6</u> | <u>60</u> | <u>600</u> |
| 7. | <u>7</u> | <u>70</u> | <u>700</u> |
| 8. | <u>8</u> | <u>80</u> | <u>800</u> |