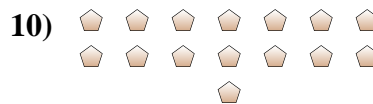
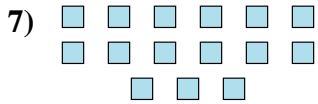
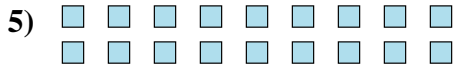




Determine if the number of shapes is even or odd.



Answers

1. \_\_\_\_\_
2. \_\_\_\_\_
3. \_\_\_\_\_
4. \_\_\_\_\_
5. \_\_\_\_\_
6. \_\_\_\_\_
7. \_\_\_\_\_
8. \_\_\_\_\_
9. \_\_\_\_\_
10. \_\_\_\_\_



Determine if the number of shapes is even or odd.



7



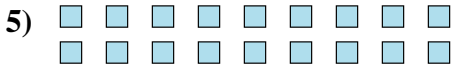
7



18



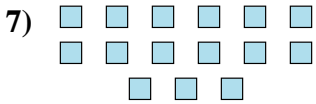
8



18



7



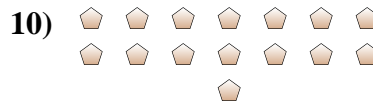
15



9



5



15

Answers

1. odd

2. odd

3. even

4. even

5. even

6. odd

7. odd

8. odd

9. odd

10. odd