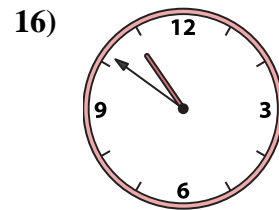
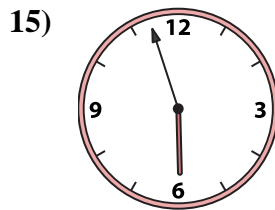
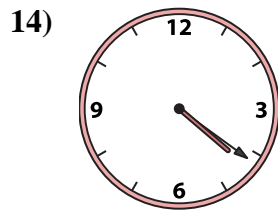
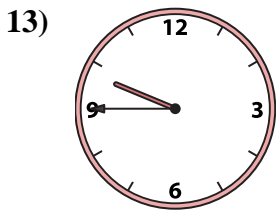
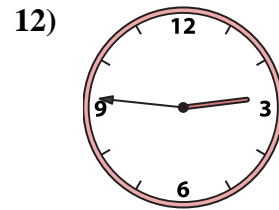
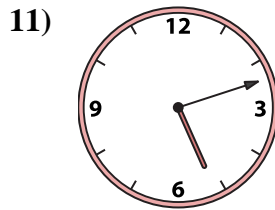
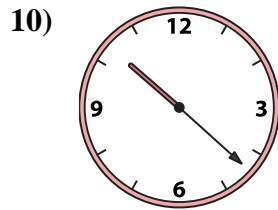
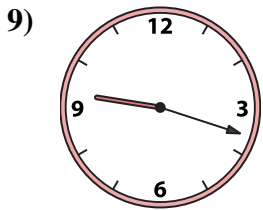
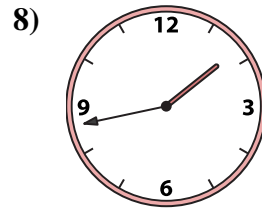
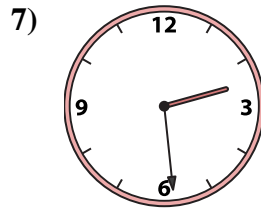
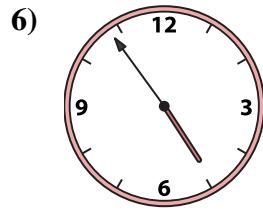
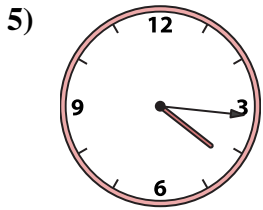
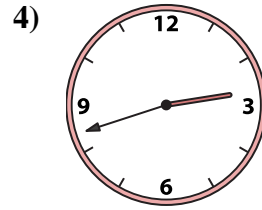
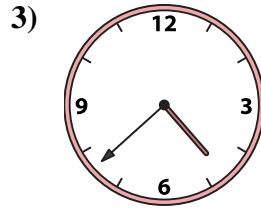
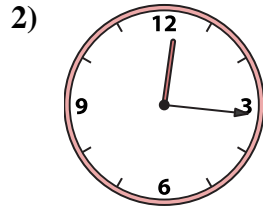
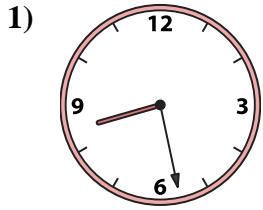




Match the analog clock to the digital clock.



A. 2:29

B. 4:54

C. 1:43

D. 4:21

E. 5:12

F. 12:16

G. 4:38

H. 9:18

I. 9:45

J. 2:42

K. 8:28

L. 4:16

M. 10:51

N. 5:57

O. 2:46

P. 10:22

**Answers**

1. \_\_\_\_\_

2. \_\_\_\_\_

3. \_\_\_\_\_

4. \_\_\_\_\_

5. \_\_\_\_\_

6. \_\_\_\_\_

7. \_\_\_\_\_

8. \_\_\_\_\_

9. \_\_\_\_\_

10. \_\_\_\_\_

11. \_\_\_\_\_

12. \_\_\_\_\_

13. \_\_\_\_\_

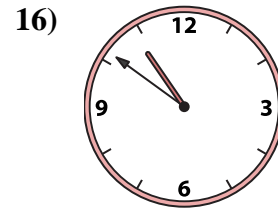
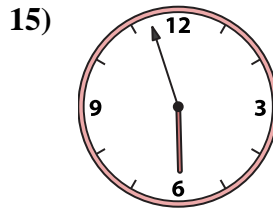
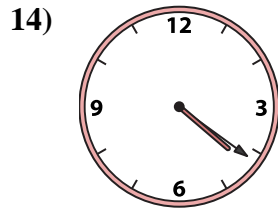
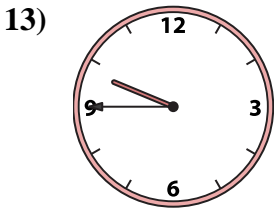
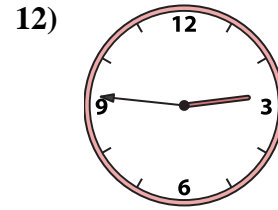
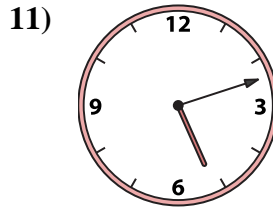
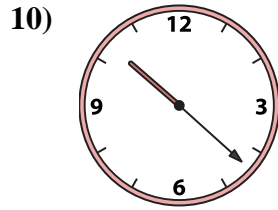
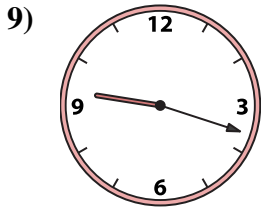
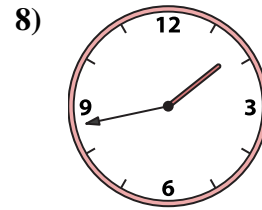
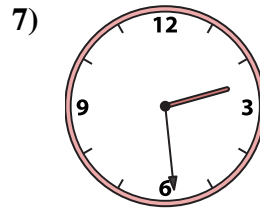
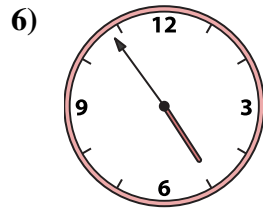
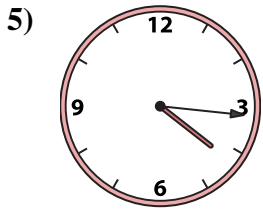
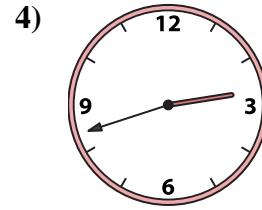
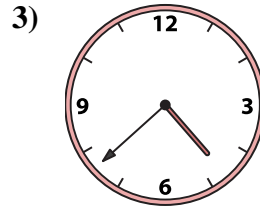
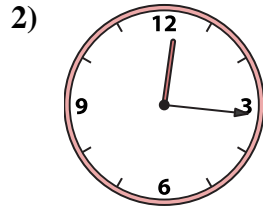
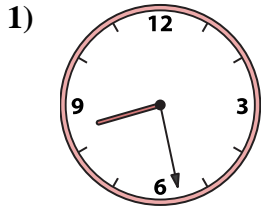
14. \_\_\_\_\_

15. \_\_\_\_\_

16. \_\_\_\_\_



Match the analog clock to the digital clock.



A. **2:29**

B. **4:54**

C. **1:43**

D. **4:21**

E. **5:12**

F. **12:16**

G. **4:38**

H. **9:18**

I. **9:45**

J. **2:42**

K. **8:28**

L. **4:16**

M. **10:51**

N. **5:57**

O. **2:46**

P. **10:22**

**Answers**

1. **K**

2. **F**

3. **G**

4. **J**

5. **L**

6. **B**

7. **A**

8. **C**

9. **H**

10. **P**

11. **E**

12. **O**

13. **I**

14. **D**

15. **N**

16. **M**