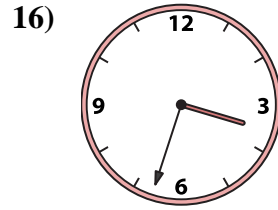
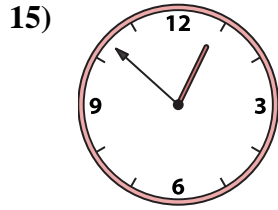
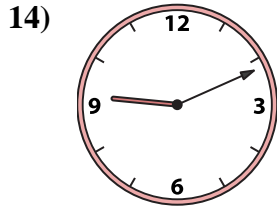
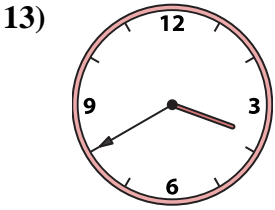
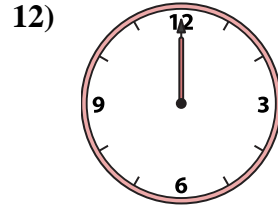
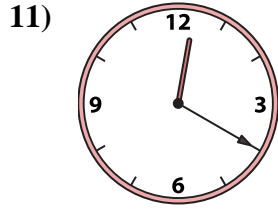
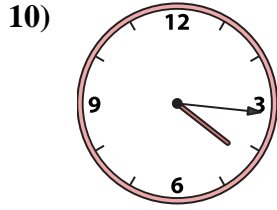
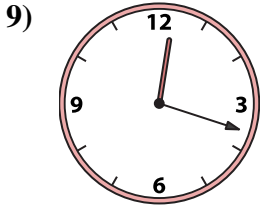
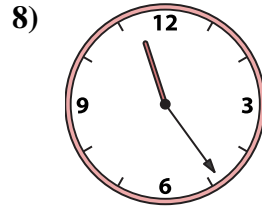
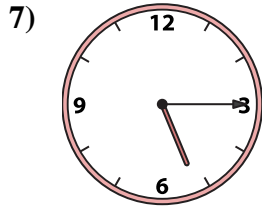
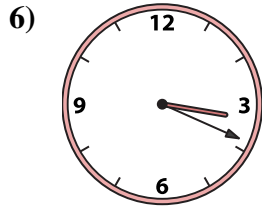
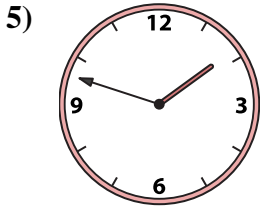
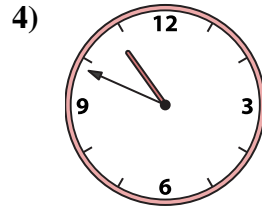
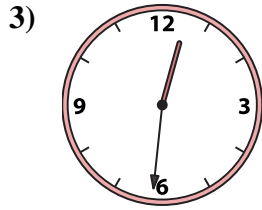
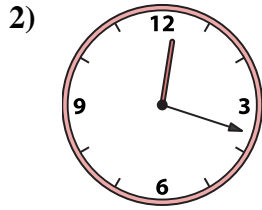
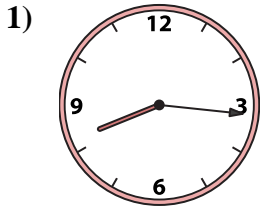




Match the analog clock to the digital clock.

**Answers**



1. \_\_\_\_\_
2. \_\_\_\_\_
3. \_\_\_\_\_
4. \_\_\_\_\_
5. \_\_\_\_\_
6. \_\_\_\_\_
7. \_\_\_\_\_
8. \_\_\_\_\_
9. \_\_\_\_\_
10. \_\_\_\_\_
11. \_\_\_\_\_
12. \_\_\_\_\_
13. \_\_\_\_\_
14. \_\_\_\_\_
15. \_\_\_\_\_
16. \_\_\_\_\_

A. 3:40

B. 9:11

C. 12:20

D. 12:18

E. 12:00

F. 12:18

G. 10:49

H. 12:52

I. 8:16

J. 11:24

K. 5:15

L. 1:48

M. 12:31

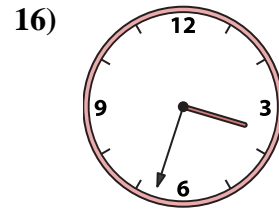
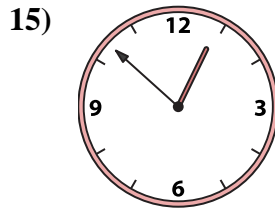
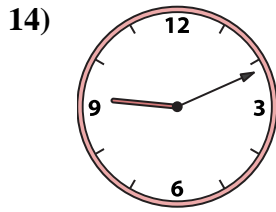
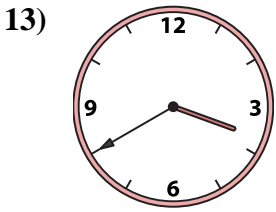
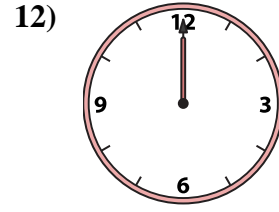
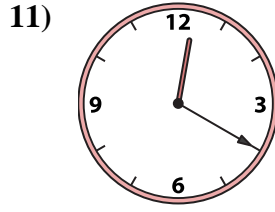
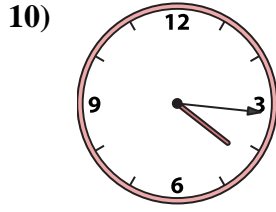
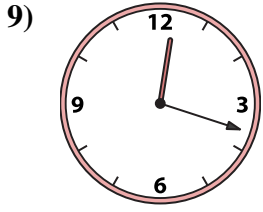
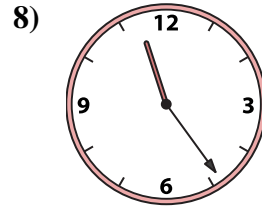
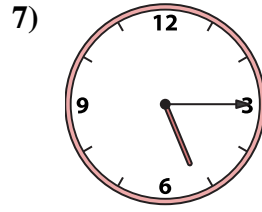
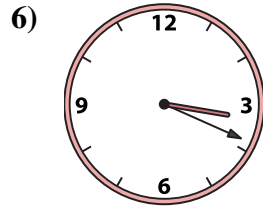
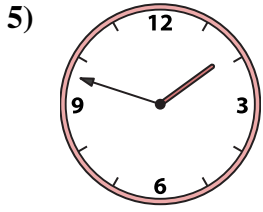
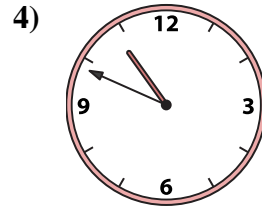
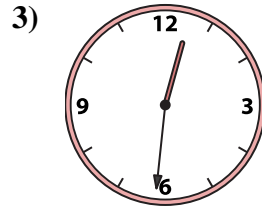
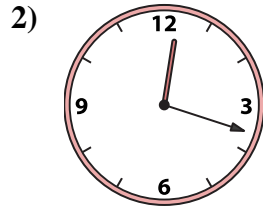
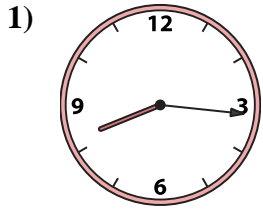
N. 4:16

O. 3:33

P. 3:19



Match the analog clock to the digital clock.



A. 3:40

B. 9:11

C. 12:20

D. 12:18

E. 12:00

F. 12:18

G. 10:49

H. 12:52

I. 8:16

J. 11:24

K. 5:15

L. 1:48

M. 12:31

N. 4:16

O. 3:33

P. 3:19

**Answers**

1. **I**

2. **D**

3. **M**

4. **G**

5. **L**

6. **P**

7. **K**

8. **J**

9. **F**

10. **N**

11. **C**

12. **E**

13. **A**

14. **B**

15. **H**

16. **O**