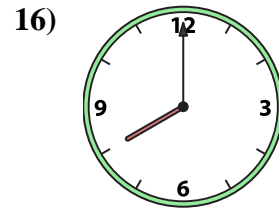
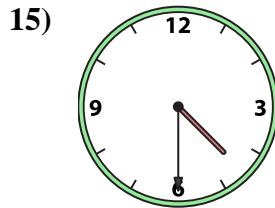
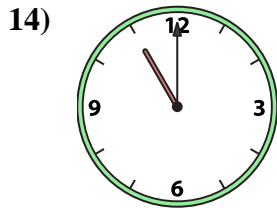
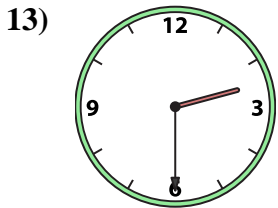
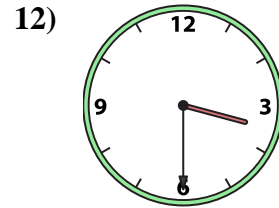
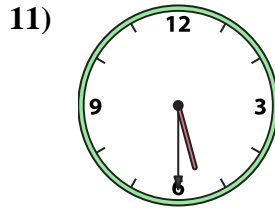
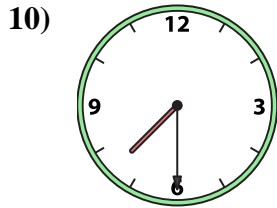

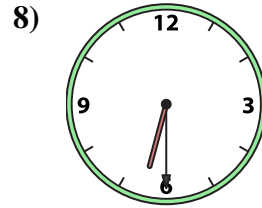
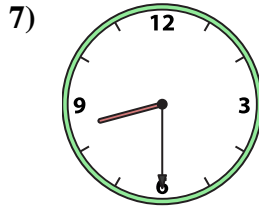
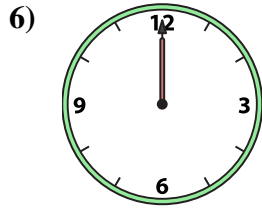
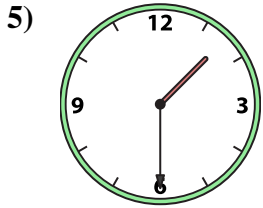
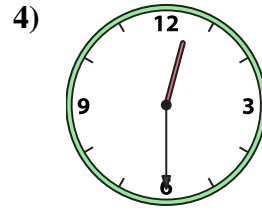
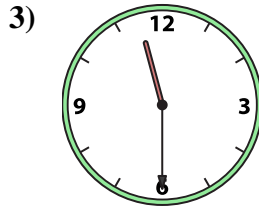
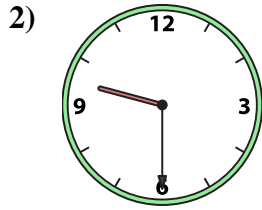




Match the analog clock to the digital clock.



A. 9:30

B. 5:30

C. 4:30

D. 11:30

E. 3:30

F. 1:30

G. 8:00

H. 1:00

I. 6:30

J. 8:30

K. 12:30

L. 12:00

M. 2:30

N. 11:00

O. 7:30

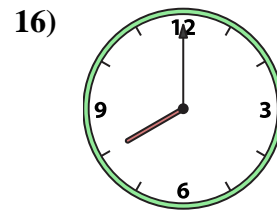
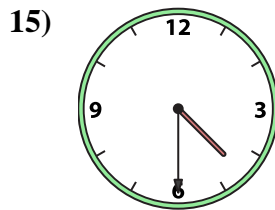
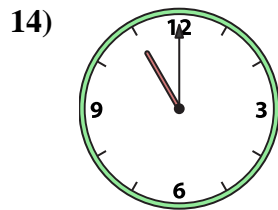
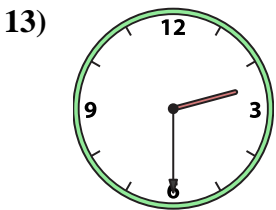
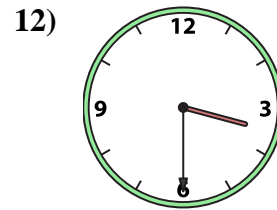
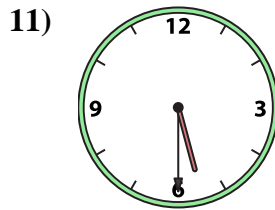
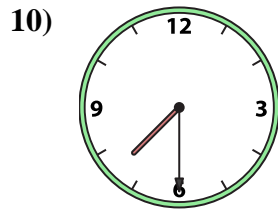

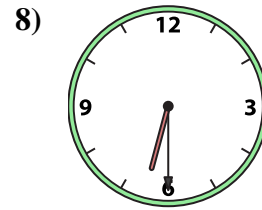
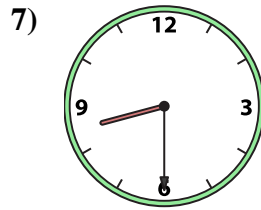
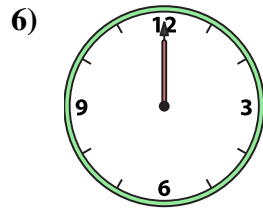
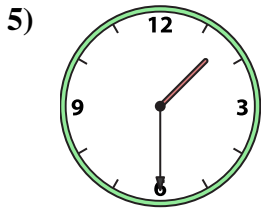
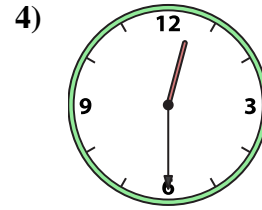
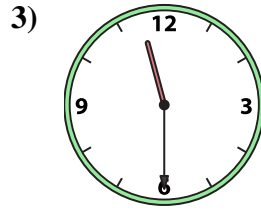
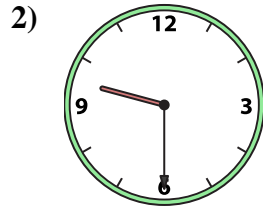
P. 4:00

Answers

1. _____
2. _____
3. _____
4. _____
5. _____
6. _____
7. _____
8. _____
9. _____
10. _____
11. _____
12. _____
13. _____
14. _____
15. _____
16. _____



Match the analog clock to the digital clock.



A. **9:30**

B. **5:30**

C. **4:30**

D. **11:30**

E. **3:30**

F. **1:30**

G. **8:00**

H. **1:00**

I. **6:30**

J. **8:30**

K. **12:30**

L. **12:00**

M. **2:30**

N. **11:00**

O. **7:30**

P. **4:00**

Answers

1. **H**

2. **A**

3. **D**

4. **K**

5. **F**

6. **L**

7. **J**

8. **I**

9. **P**

10. **O**

11. **B**

12. **E**

13. **M**

14. **N**

15. **C**

16. **G**