



Solve each problem.

Answers

1) Start: \_\_\_\_\_

Elapsed: 1 hr & 15 mins

End: 8:15

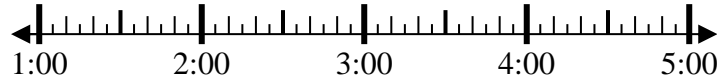


1. \_\_\_\_\_

2) Start: \_\_\_\_\_

Elapsed: 2 hrs & 20 mins

End: 3:20



2. \_\_\_\_\_

3) Start: \_\_\_\_\_

Elapsed: 2 hrs & 30 mins

End: 10:20

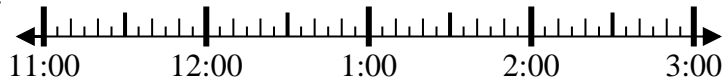


3. \_\_\_\_\_

4) Start: \_\_\_\_\_

Elapsed: 1 hr & 15 mins

End: 12:40



4. \_\_\_\_\_

5) Start: \_\_\_\_\_

Elapsed: 1 hr & 20 mins

End: 5:30



5. \_\_\_\_\_

6) Start: \_\_\_\_\_

Elapsed: 1 hr & 25 mins

End: 9:30

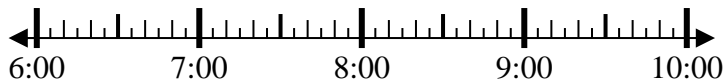


6. \_\_\_\_\_

7) Start: \_\_\_\_\_

Elapsed: 1 hr & 40 mins

End: 8:10



7. \_\_\_\_\_

8) Start: \_\_\_\_\_

Elapsed: 1 hr & 20 mins

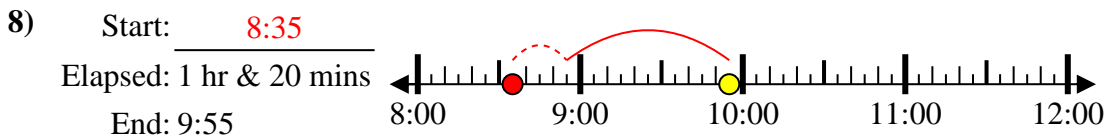
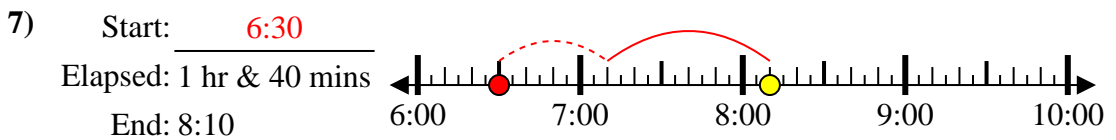
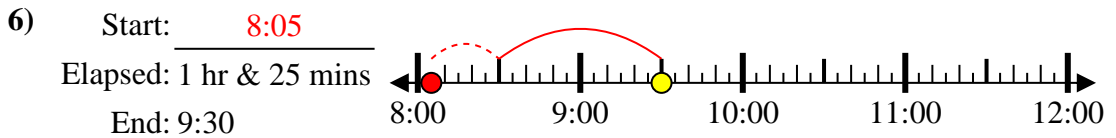
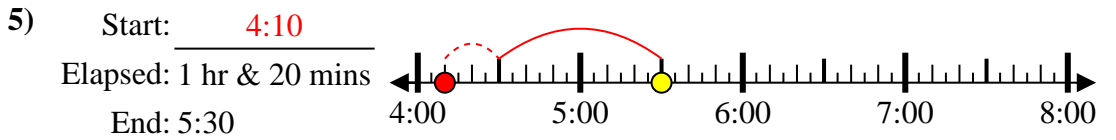
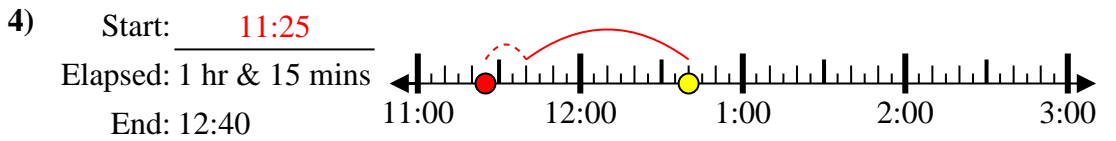
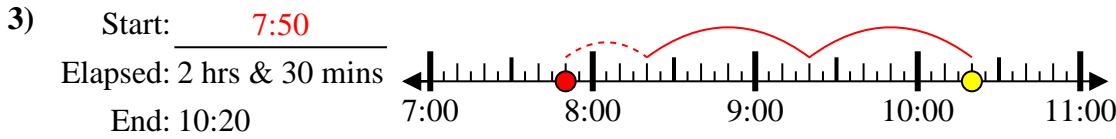
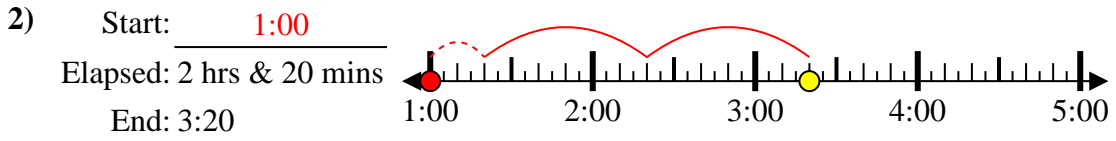
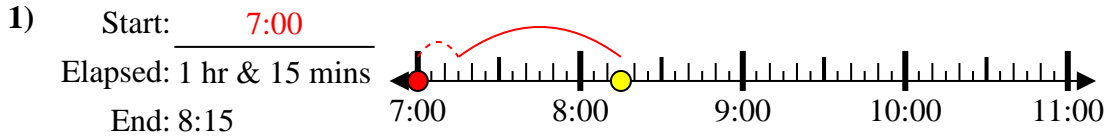
End: 9:55



8. \_\_\_\_\_



Solve each problem.



Answers

1. 7:00

2. 1:00

3. 7:50

4. 11:25

5. 4:10

6. 8:05

7. 6:30

8. 8:35