



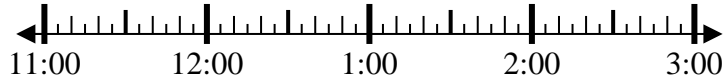
Solve each problem.

Answers

1) Start: 11:35

Elapsed: 1 hr & 10 mins

End: _____

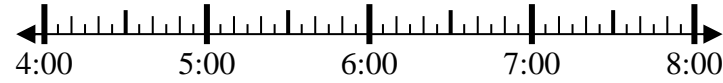


1. _____

2) Start: 4:15

Elapsed: 1 hr & 25 mins

End: _____



2. _____

3) Start: 8:20

Elapsed: 2 hrs & 30 mins

End: _____

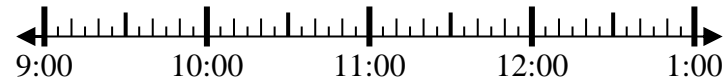


3. _____

4) Start: 9:40

Elapsed: 1 hr & 35 mins

End: _____



4. _____

5) Start: 12:25

Elapsed: 1 hr & 40 mins

End: _____

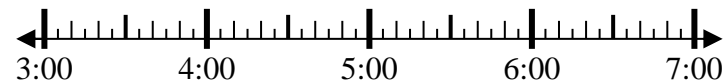


5. _____

6) Start: 3:25

Elapsed: 1 hr & 20 mins

End: _____

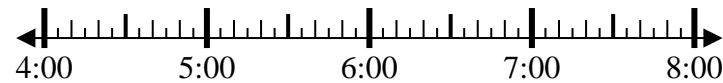


6. _____

7) Start: 4:40

Elapsed: 1 hr & 50 mins

End: _____

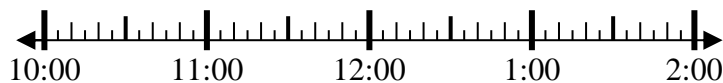


7. _____

8) Start: 10:55

Elapsed: 1 hr & 50 mins

End: _____



8. _____

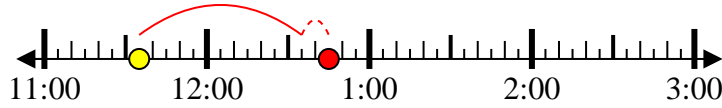


Solve each problem.

1) Start: 11:35

Elapsed: 1 hr & 10 mins

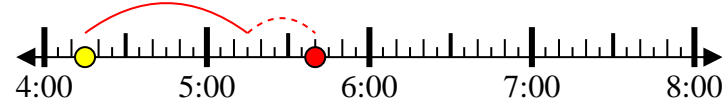
End: 12:45



2) Start: 4:15

Elapsed: 1 hr & 25 mins

End: 5:40



3) Start: 8:20

Elapsed: 2 hrs & 30 mins

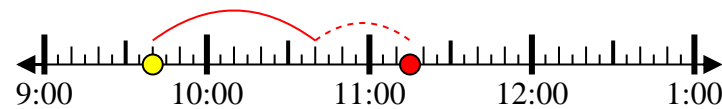
End: 10:50



4) Start: 9:40

Elapsed: 1 hr & 35 mins

End: 11:15



5) Start: 12:25

Elapsed: 1 hr & 40 mins

End: 2:05



6) Start: 3:25

Elapsed: 1 hr & 20 mins

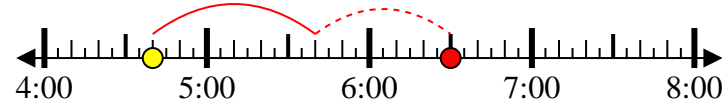
End: 4:45



7) Start: 4:40

Elapsed: 1 hr & 50 mins

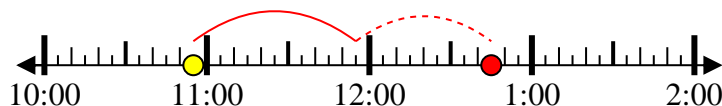
End: 6:30



8) Start: 10:55

Elapsed: 1 hr & 50 mins

End: 12:45



Answers

1. 12:45

2. 5:40

3. 10:50

4. 11:15

5. 2:05

6. 4:45

7. 6:30

8. 12:45