



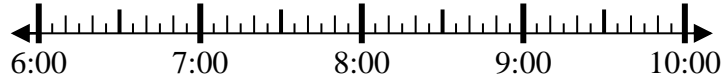
Solve each problem.

Answers

1) Start: 6:45

Elapsed: \_\_\_\_\_

End: 7:55

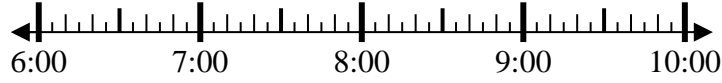


1. \_\_\_\_\_

2) Start: 6:25

Elapsed: \_\_\_\_\_

End: 9:05

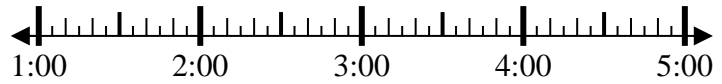


2. \_\_\_\_\_

3) Start: 1:10

Elapsed: \_\_\_\_\_

End: 3:00



3. \_\_\_\_\_

4) Start: 11:15

Elapsed: \_\_\_\_\_

End: 1:00

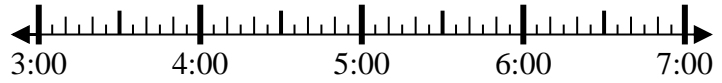


4. \_\_\_\_\_

5) Start: 3:25

Elapsed: \_\_\_\_\_

End: 5:35

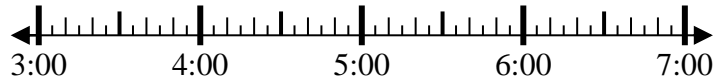


5. \_\_\_\_\_

6) Start: 3:20

Elapsed: \_\_\_\_\_

End: 5:55

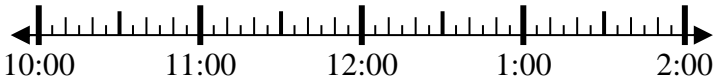


6. \_\_\_\_\_

7) Start: 10:35

Elapsed: \_\_\_\_\_

End: 12:25

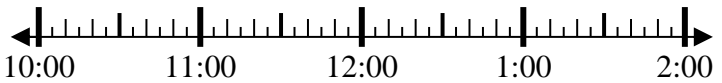


7. \_\_\_\_\_

8) Start: 10:00

Elapsed: \_\_\_\_\_

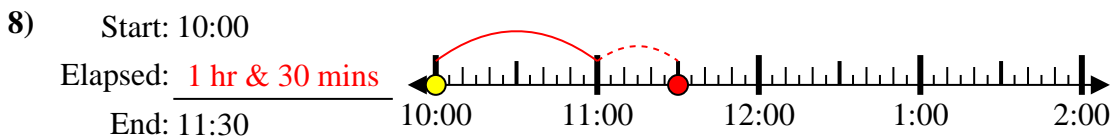
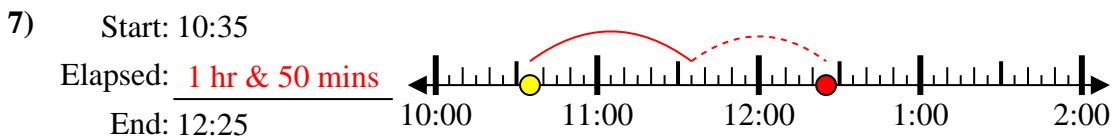
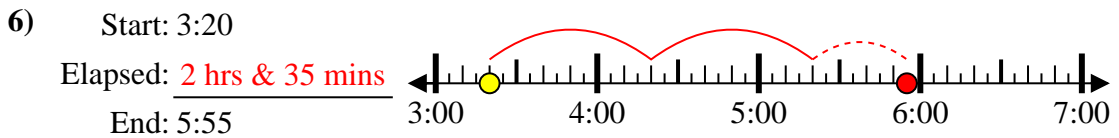
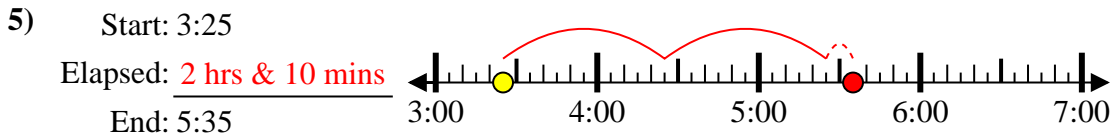
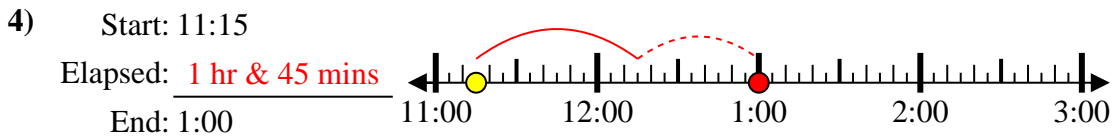
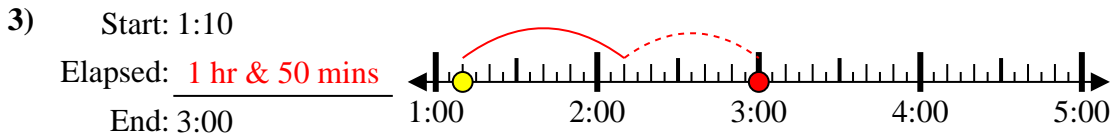
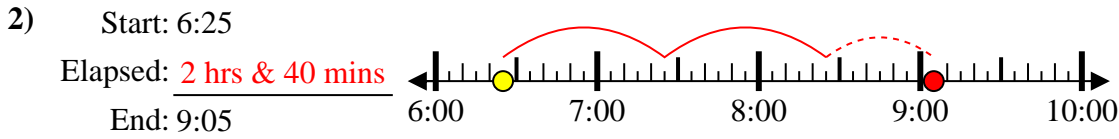
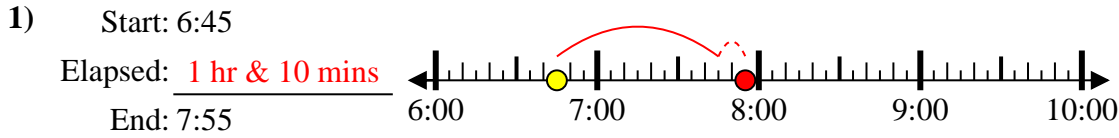
End: 11:30



8. \_\_\_\_\_



Solve each problem.



Answers

1. 1 hr & 10 mins

2. 2 hrs & 40 mins

3. 1 hr & 50 mins

4. 1 hr & 45 mins

5. 2 hrs & 10 mins

6. 2 hrs & 35 mins

7. 1 hr & 50 mins

8. 1 hr & 30 mins