



Draw the hour and minute hand on the clock so it represents the time shown.

1) 12:10



2) 9:35




3) 8:50



4) 2:50



5) 10:55




6) 4:40



7) 5:50



8) 11:35




9) 9:45






Draw the hour and minute hand on the clock so it represents the time shown.


1) 12:10



2) 9:35



3) 8:50



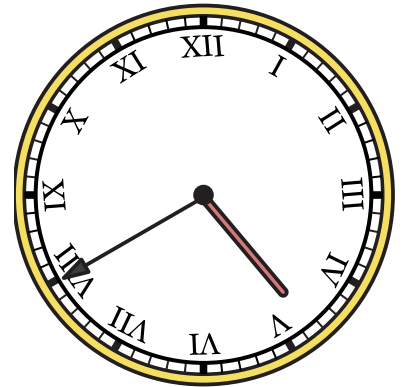
4) 2:50




5) 10:55



6) 4:40



7) 5:50



8) 11:35



9) 9:45

