



Draw the hour and minute hand on the clock so it represents the time shown.

1) 3:30



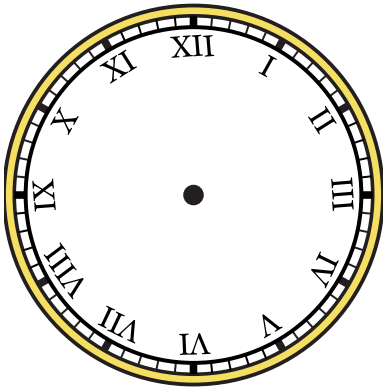
2) 3:15



3) 4:30



4) 8:00



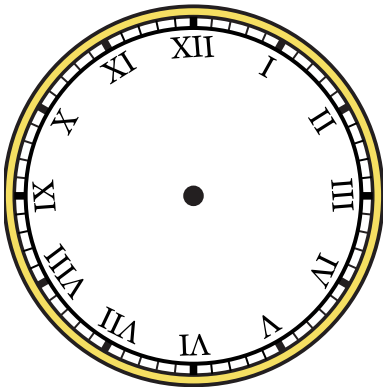
5) 1:00



6) 9:15



7) 7:15



8) 1:30



9) 5:00






Draw the hour and minute hand on the clock so it represents the time shown.


1) 3:30




2) 3:15




3) 4:30



4) 8:00



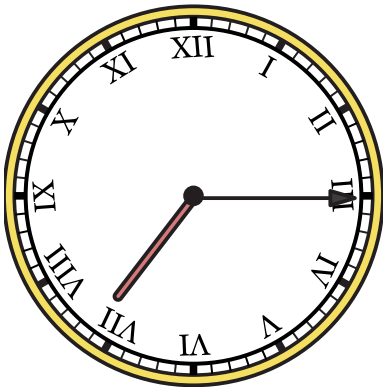
5) 1:00




6) 9:15



7) 7:15



8) 1:30



9) 5:00

