

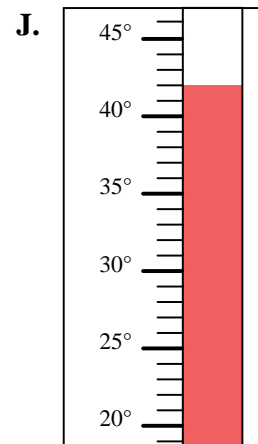
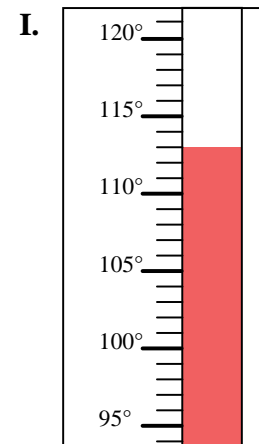
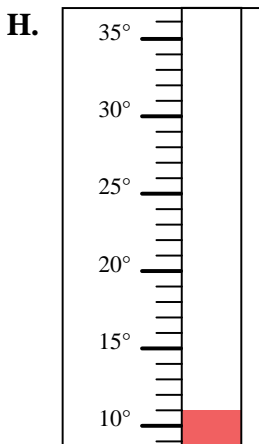
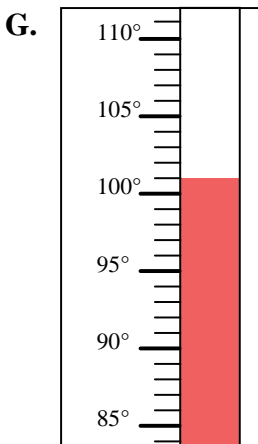
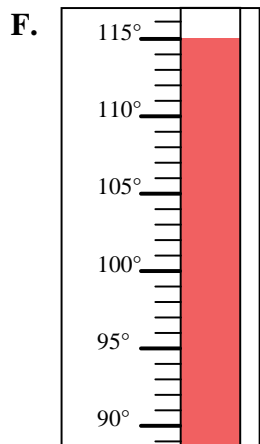
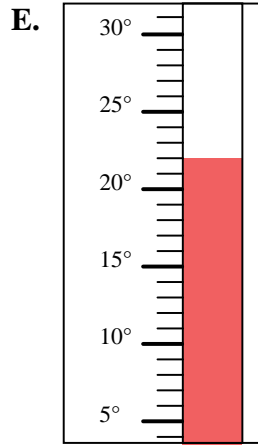
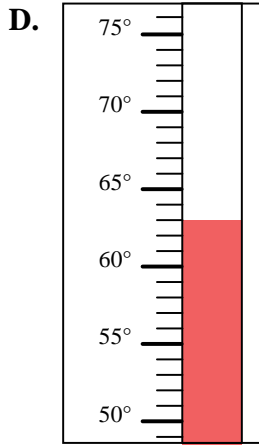
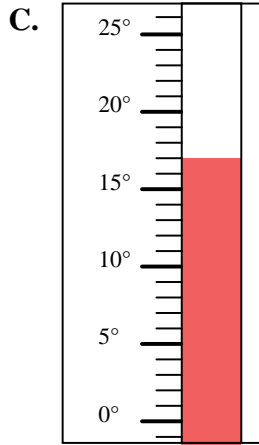
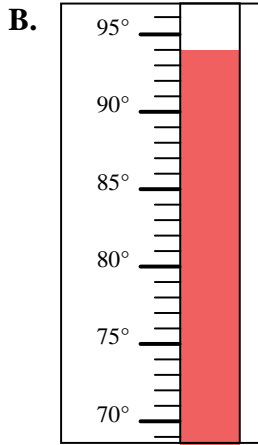
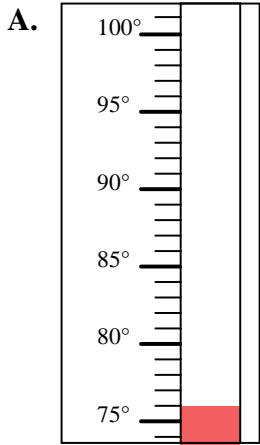


Determine which letter best answers each question.

Answers

- 1) Which thermometer best represents the temperature 115°?
- 2) Which thermometer best represents the temperature 63°?
- 3) Which thermometer best represents the temperature 22°?
- 4) Which thermometer best represents the temperature 94°?
- 5) Which thermometer best represents the temperature 101°?
- 6) Which thermometer best represents the temperature 42°?
- 7) Which thermometer best represents the temperature 17°?
- 8) Which thermometer best represents the temperature 11°?
- 9) Which thermometer best represents the temperature 113°?
- 10) Which thermometer best represents the temperature 76°?

1. _____
2. _____
3. _____
4. _____
5. _____
6. _____
7. _____
8. _____
9. _____
10. _____





Determine which letter best answers each question.

Answers

- 1) Which thermometer best represents the temperature 115°?
- 2) Which thermometer best represents the temperature 63°?
- 3) Which thermometer best represents the temperature 22°?
- 4) Which thermometer best represents the temperature 94°?
- 5) Which thermometer best represents the temperature 101°?
- 6) Which thermometer best represents the temperature 42°?
- 7) Which thermometer best represents the temperature 17°?
- 8) Which thermometer best represents the temperature 11°?
- 9) Which thermometer best represents the temperature 113°?
- 10) Which thermometer best represents the temperature 76°?

1. **F**
2. **D**
3. **E**
4. **B**
5. **G**
6. **J**
7. **C**
8. **H**
9. **I**
10. **A**

