



Use the chart to answer each question.

Team	Points Scored
Alpha	
Beta	
Gamma	
Delta	
Epsilon	
Zeta	
Kappa	

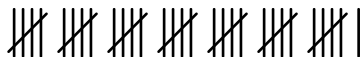






Answers

1. _____
2. _____
3. _____
4. _____
5. _____
6. _____
7. _____
8. _____
9. _____
10. _____

- 1) Which team scored the fewest points?
- 2) Which team scored the greatest number of points?
- 3) How many points did Kappa score?
- 4) How many teams had more than 20 points?
- 5) How many teams had less than 34 points?
- 6) Which team had more points? Gamma or Kappa?
- 7) Which had fewer points? Alpha or Beta?
- 8) How many more points did Alpha score than Delta?
- 9) Which team scored exactly 24 points?
- 10) How many fewer points did Kappa score than Epsilon scored?



Use the chart to answer each question.

Team	Points Scored	
Alpha		36
Beta		24
Gamma		37
Delta		7
Epsilon		38
Zeta		16
Kappa		22

- Which team scored the fewest points?
- Which team scored the greatest number of points?
- How many points did Kappa score?
- How many teams had more than 20 points?
- How many teams had less than 34 points?
- Which team had more points? Gamma or Kappa?
- Which had fewer points? Alpha or Beta?
- How many more points did Alpha score than Delta?
- Which team scored exactly 24 points?
- How many fewer points did Kappa score than Epsilon scored?

Answers

- Delta**
- Epsilon**
- 22**
- 5**
- 4**
- Gamma**
- Beta**
- 29**
- Beta**
- 16**