



Use the visual model to solve each problem.

Answers

- 1) There are 15 stars below.



If you were to take away 8, how many would be left?

$15 - 8 = ?$

- 2) There are 8 triangles below.



If you were to take away 4, how many would be left?

$8 - 4 = ?$

- 3) There are 6 squares below.



If you were to take away 2, how many would be left?

$6 - 2 = ?$

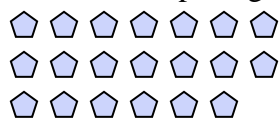
- 4) There are 5 rectangles below.



If you were to take away 1, how many would be left?

$5 - 1 = ?$

- 5) There are 20 pentagons below.



If you were to take away 4, how many would be left?

$20 - 4 = ?$

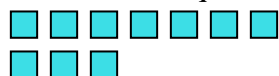
- 6) There are 8 stars below.



If you were to take away 6, how many would be left?

$8 - 6 = ?$

- 7) There are 10 squares below.



If you were to take away 8, how many would be left?

$10 - 8 = ?$

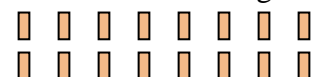
- 8) There are 19 stars below.



If you were to take away 10, how many would be left?

$19 - 10 = ?$

- 9) There are 16 rectangles below.



If you were to take away 5, how many would be left?

$16 - 5 = ?$

- 10) There are 6 squares below.



If you were to take away 1, how many would be left?

$6 - 1 = ?$

1. _____
2. _____
3. _____
4. _____
5. _____
6. _____
7. _____
8. _____
9. _____
10. _____



Use the visual model to solve each problem.

Answers

- 1) There are 15 stars below.



If you were to take away 8, how many would be left?

$15 - 8 = ?$

- 2) There are 8 triangles below.



If you were to take away 4, how many would be left?

$8 - 4 = ?$

- 3) There are 6 squares below.



If you were to take away 2, how many would be left?

$6 - 2 = ?$

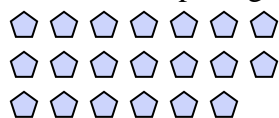
- 4) There are 5 rectangles below.



If you were to take away 1, how many would be left?

$5 - 1 = ?$

- 5) There are 20 pentagons below.



If you were to take away 4, how many would be left?

$20 - 4 = ?$

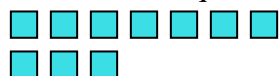
- 6) There are 8 stars below.



If you were to take away 6, how many would be left?

$8 - 6 = ?$

- 7) There are 10 squares below.



If you were to take away 8, how many would be left?

$10 - 8 = ?$

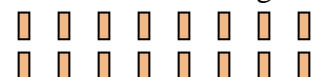
- 8) There are 19 stars below.



If you were to take away 10, how many would be left?

$19 - 10 = ?$

- 9) There are 16 rectangles below.



If you were to take away 5, how many would be left?

$16 - 5 = ?$

- 10) There are 6 squares below.



If you were to take away 1, how many would be left?

$6 - 1 = ?$

1. 7
2. 4
3. 4
4. 4
5. 16
6. 2
7. 2
8. 9
9. 11
10. 5