




Determine if the shape is translating (slide), rotating (turn) or reflecting (flip).

Answers


1)



2)



3)



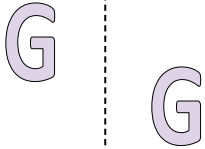
1. _____

2. _____

3. _____

4. _____

4)



5)



6)



5. _____

6. _____


7. _____

8. _____

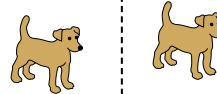
7)



8)



9)



9. _____

10. _____

11. _____

12. _____

10)



11)



12)



13. _____

14. _____

15. _____

13)



14)




15)





Determine if the shape is translating (slide), rotating (turn) or reflecting (flip).

1)



2)



3)



4)



5)



6)



7)



8)



9)



10)



11)



12)



13)



14)



15)



Answers

1. reflecting

2. translating

3. rotating

4. translating

5. translating

6. rotating

7. reflecting

8. reflecting

9. translating

10. translating

11. translating

12. reflecting

13. rotating

14. rotating

15. rotating