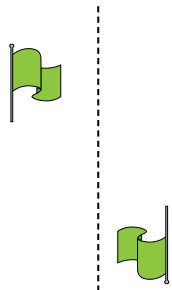




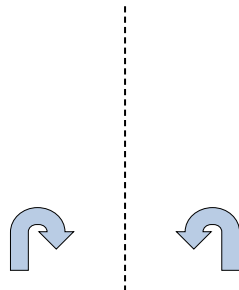
Determine if the shape is translating (slide), rotating (turn) or reflecting (flip).

Answers

1)



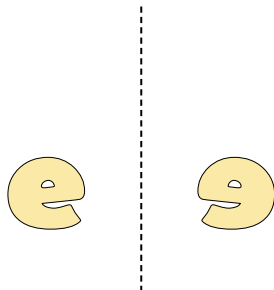
2)




3)



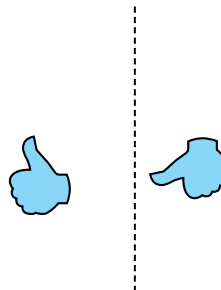
4)



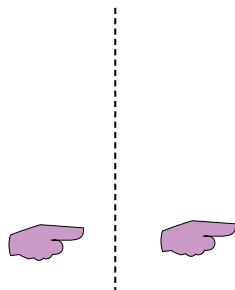
5)



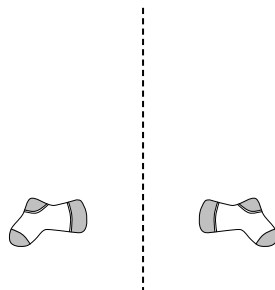
6)



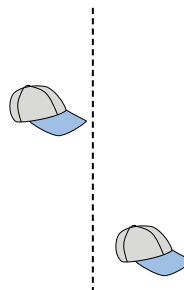
7)



8)



9)



10)



11)



12)



13)



14)



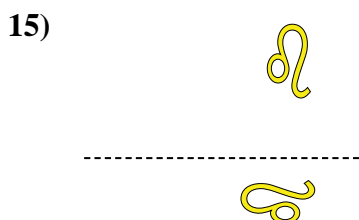

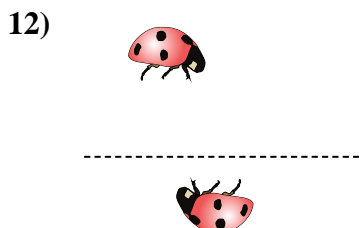
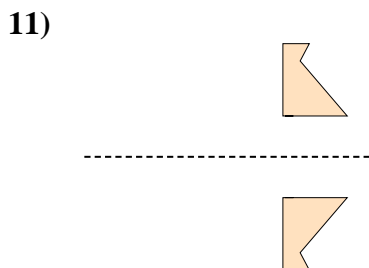
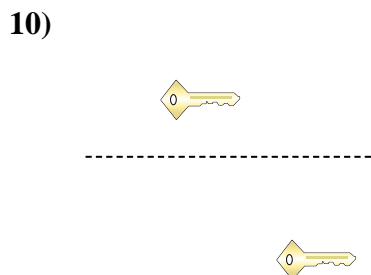
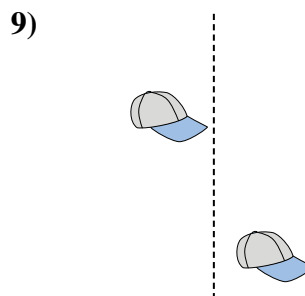
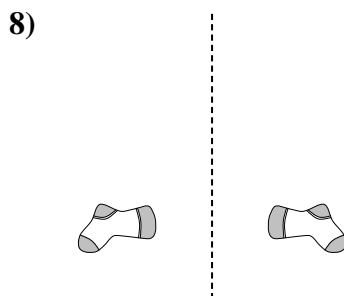
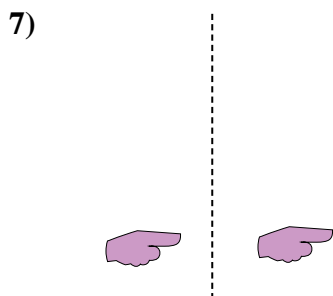


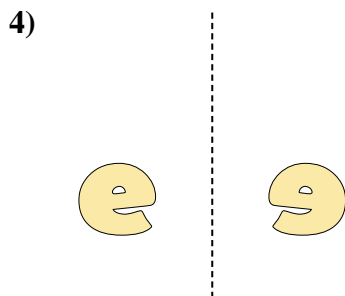
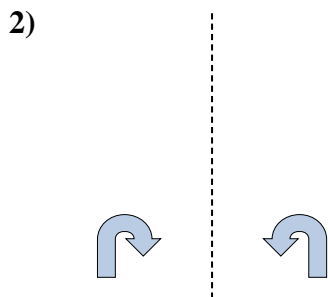

15)



1. \_\_\_\_\_
2. \_\_\_\_\_
3. \_\_\_\_\_
4. \_\_\_\_\_
5. \_\_\_\_\_
6. \_\_\_\_\_
7. \_\_\_\_\_
8. \_\_\_\_\_
9. \_\_\_\_\_
10. \_\_\_\_\_
11. \_\_\_\_\_
12. \_\_\_\_\_
13. \_\_\_\_\_
14. \_\_\_\_\_
15. \_\_\_\_\_



Determine if the shape is translating (slide), rotating (turn) or reflecting (flip).



Answers

1. rotating

2. reflecting

3. reflecting

4. reflecting

5. translating

6. rotating

7. translating

8. reflecting

9. translating

10. translating

11. reflecting

12. rotating

13. rotating

14. translating

15. rotating