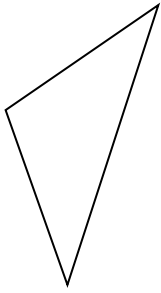




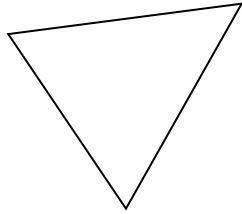
Determine if the figure shown is a 'Triangle', 'Square', 'Rectangle', 'Hexagon' or 'Other'.

Answers

1)



2)



3)



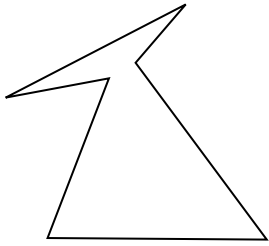
1. _____

2. _____

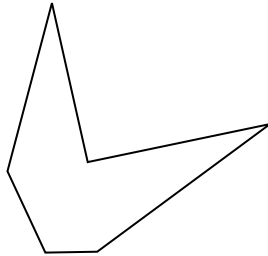
3. _____

4. _____


4)



5)



6)



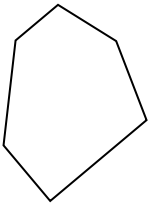
5. _____

6. _____

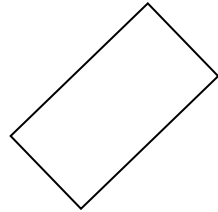
7. _____

8. _____

7)



8)



9)



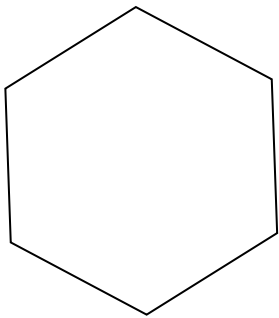
9. _____

10. _____

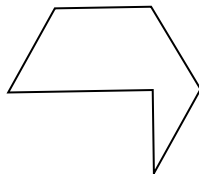
11. _____

12. _____

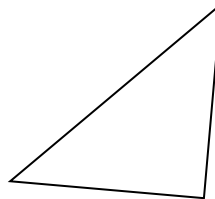
10)



11)



12)

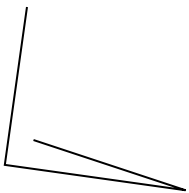


13. _____


14. _____

15. _____

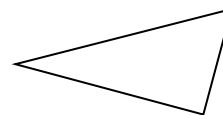
13)



14)



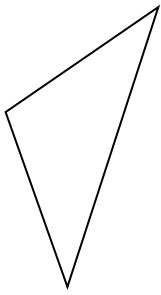
15)



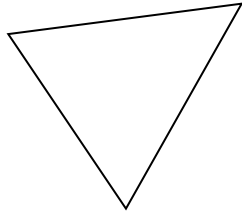


Determine if the figure shown is a 'Triangle', 'Square', 'Rectangle', 'Hexagon' or 'Other'.

1)



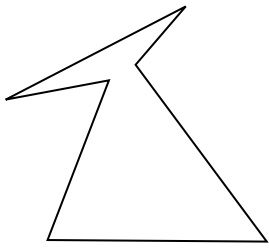
2)



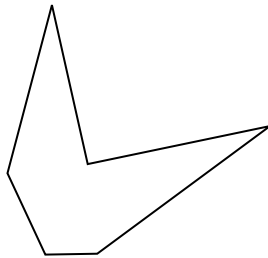
3)




4)



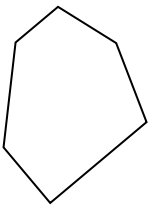
5)



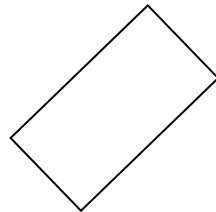
6)




7)



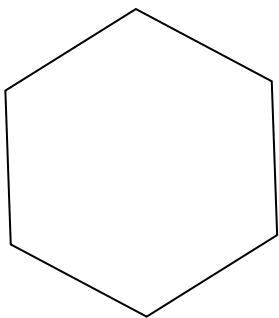
8)



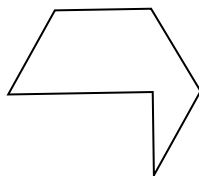
9)



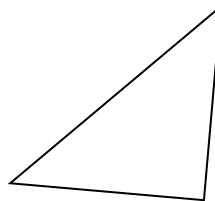
10)



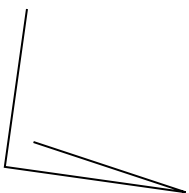
11)




12)



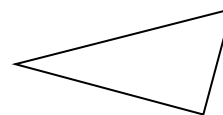
13)



14)



15)



Answers

1. triangle

2. triangle

3. other

4. hexagon

5. hexagon

6. other

7. hexagon

8. rectangle

9. other

10. hexagon

11. hexagon

12. triangle

13. other

14. square

15. triangle