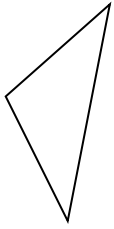




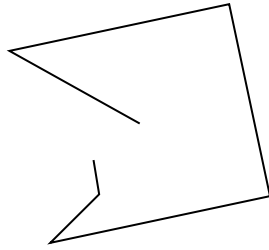
Determine if the figure shown is a 'Triangle', 'Square', 'Rectangle', 'Hexagon' or 'Other'.

Answers

1)



2)



3)



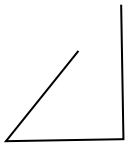
1. _____

2. _____

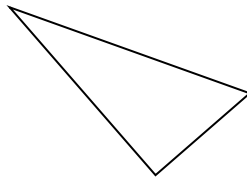
3. _____

4. _____

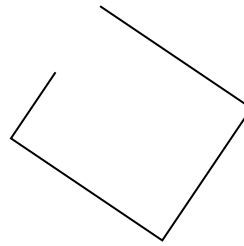
4)



5)



6)



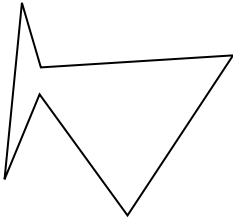
5. _____

6. _____

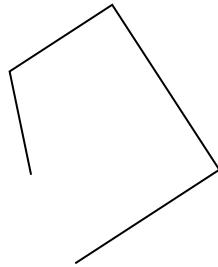
7. _____

8. _____


7)



8)



9)




9. _____

10. _____

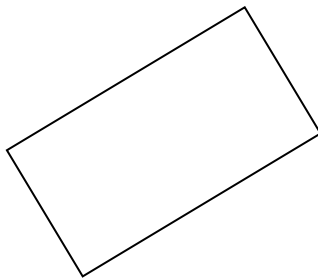
11. _____

12. _____


10)



11)



12)

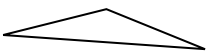


13. _____


14. _____

15. _____

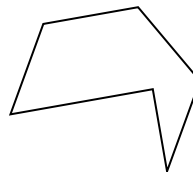
13)



14)



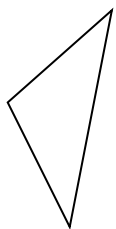
15)



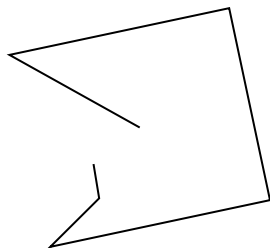


Determine if the figure shown is a 'Triangle', 'Square', 'Rectangle', 'Hexagon' or 'Other'.

1)



2)



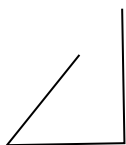
3)



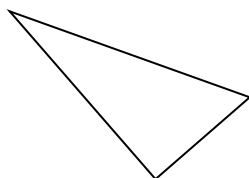
1.

triangle

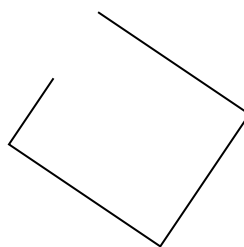
4)



5)



6)



2.

other

3.

other

4.

other

5.

triangle

6.

other

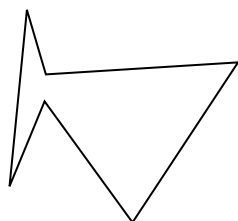
7.

hexagon

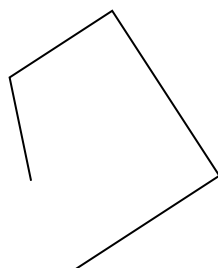
8.

other

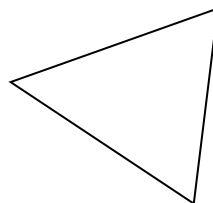
7)



8)



9)




9.

triangle

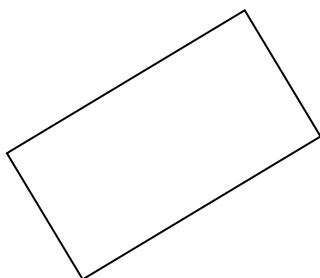
10.

other


10)



11)



12)



11.

rectangle

12.

hexagon

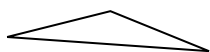
13.

triangle


14.

other

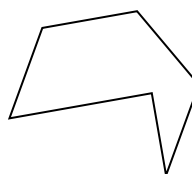
13)



14)



15)



15.

hexagon