


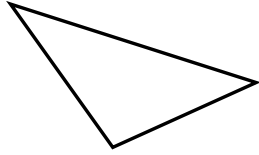
Determine if the triangle shown is a right triangle (yes) or not (no).

Answers


1)



2)

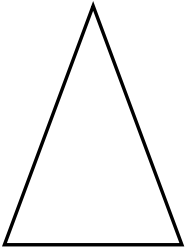


3)

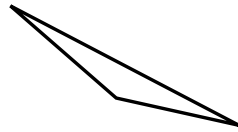


1. _____


4)



5)

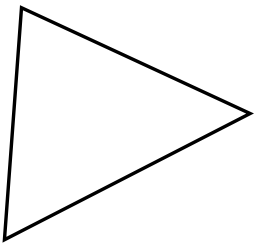


6)

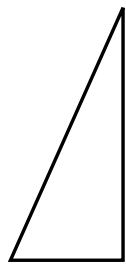


2. _____

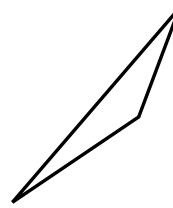
7)



8)



9)



3. _____

4. _____

5. _____

6. _____

7. _____

8. _____

9. _____

10. _____

11. _____

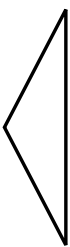
12. _____

13. _____

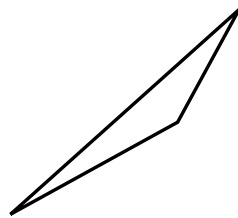
14. _____

15. _____

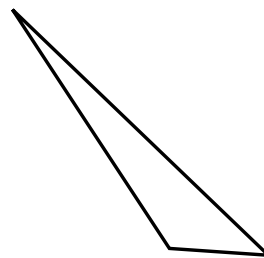
10)



11)



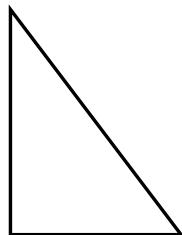
12)



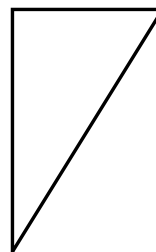
13)

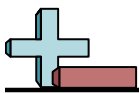


14)



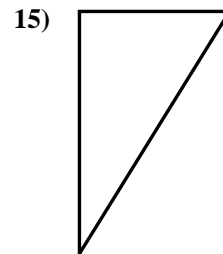
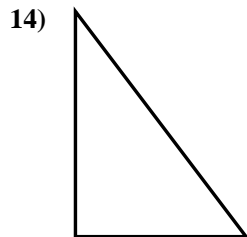
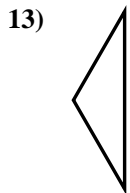
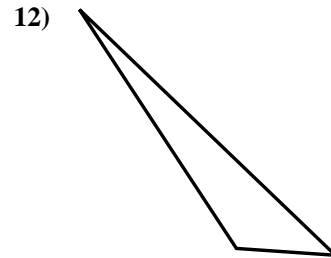
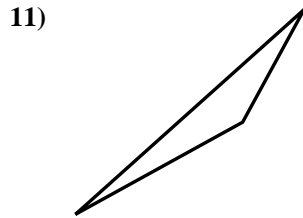
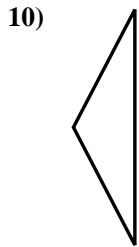
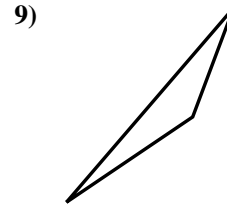
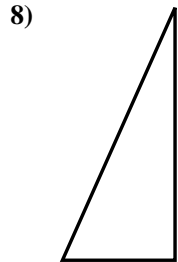

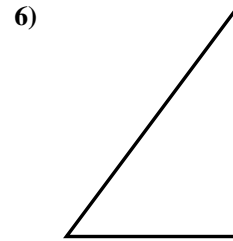
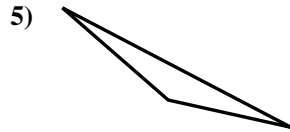
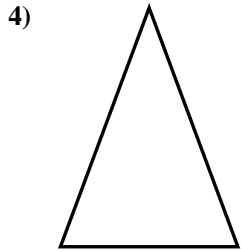
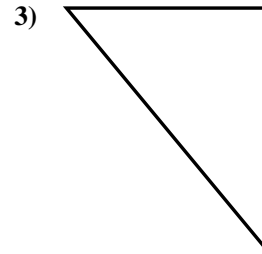
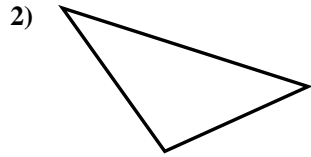

15)





Determine if the triangle shown is a right triangle (yes) or not (no).

Answers



1. no
2. no
3. yes
4. no
5. no
6. yes
7. no
8. yes
9. no
10. no
11. no
12. no
13. no
14. yes
15. yes