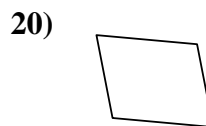
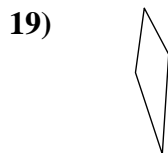
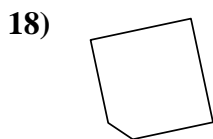
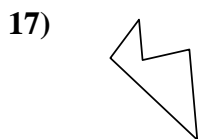
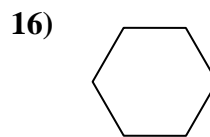
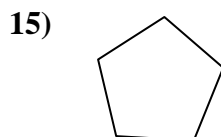
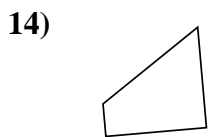
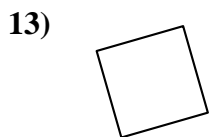
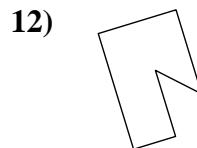
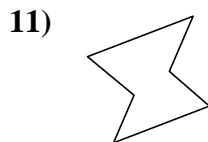
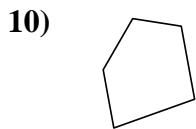
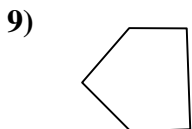
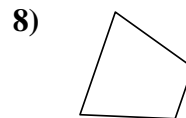
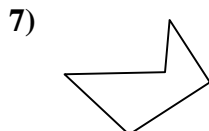
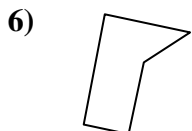

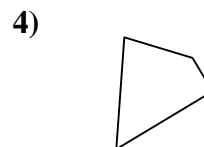
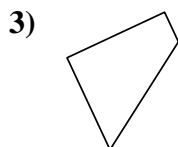
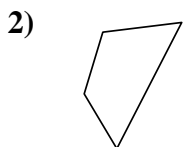
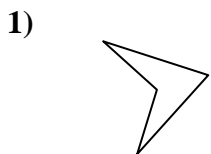




Determine if the shape shown is a quadrilateral (yes) or not (no).

Answers

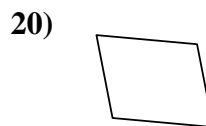
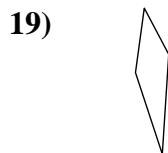
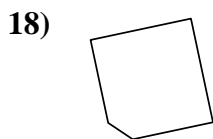
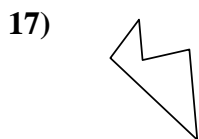
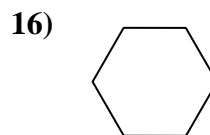
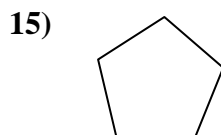
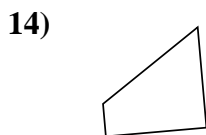
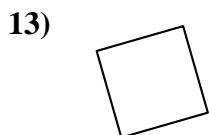
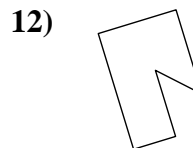
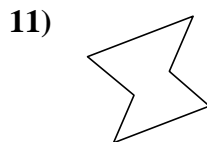
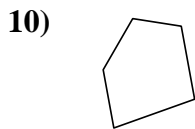
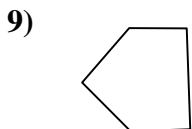
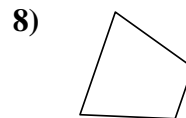
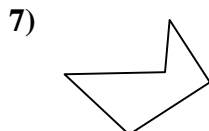
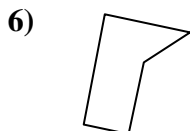

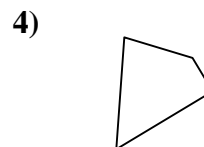
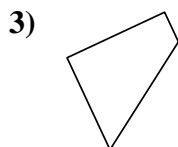
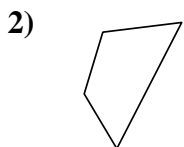
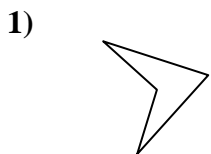


- 1. _____
- 2. _____
- 3. _____
- 4. _____
- 5. _____
- 6. _____
- 7. _____
- 8. _____
- 9. _____
- 10. _____
- 11. _____
- 12. _____
- 13. _____
- 14. _____
- 15. _____
- 16. _____
- 17. _____
- 18. _____
- 19. _____
- 20. _____



Determine if the shape shown is a quadrilateral (yes) or not (no).

Answers



1. yes

2. yes

3. yes

4. yes

5. yes

6. no

7. no

8. yes

9. no

10. no

11. no

12. no

13. yes

14. yes

15. no

16. no

17. no

18. no

19. yes

20. yes