



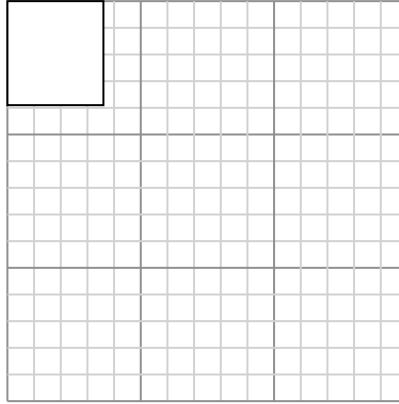
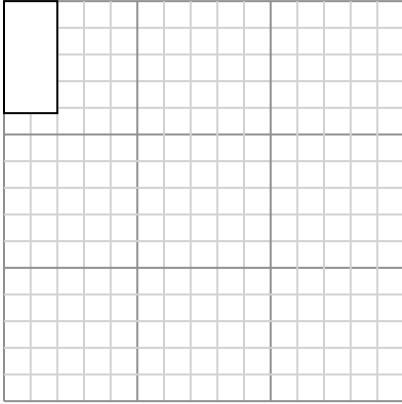
Draw each rectangle to the scale shown and determine the new dimensions.

Answers

- 1) The rectangle below has the dimensions:  
 $2 \times 4.2$

- 2) The rectangle below has the dimensions:  
 $3.6 \times 3.9$

1. \_\_\_\_\_



2. \_\_\_\_\_

Create another rectangle that is scaled to 9 times the size of the current rectangle.

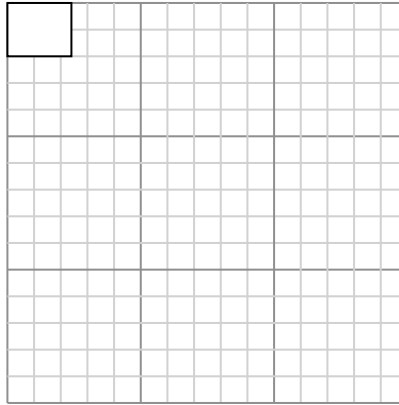
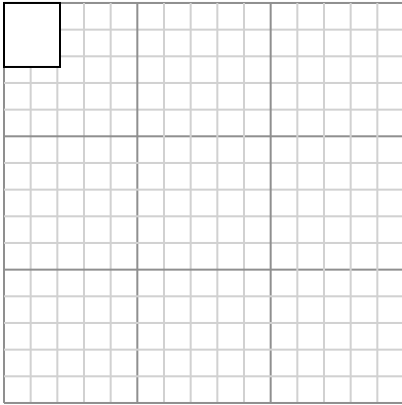
Create another rectangle that is scaled to 9 times the size of the current rectangle.

3. \_\_\_\_\_

- 3) The rectangle below has the dimensions:  
 $2.1 \times 2.4$

- 4) The rectangle below has the dimensions:  
 $2.4 \times 2$

4. \_\_\_\_\_



5. \_\_\_\_\_

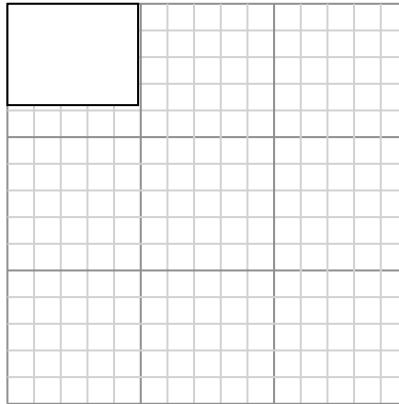
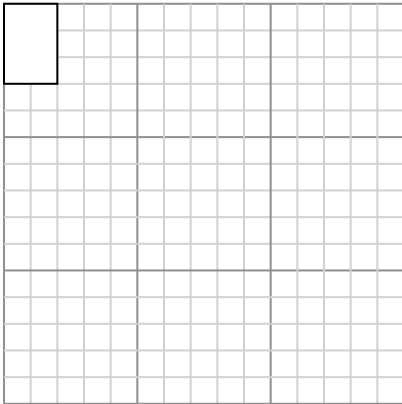
Create another rectangle that is scaled to 16 times the size of the current rectangle.

Create another rectangle that is scaled to 9 times the size of the current rectangle.

6. \_\_\_\_\_

- 5) The rectangle below has the dimensions:  
 $2 \times 3$

- 6) The rectangle below has the dimensions:  
 $4.9 \times 3.8$



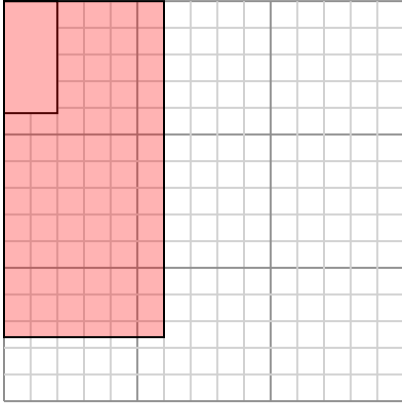
Create another rectangle that is scaled to 16 times the size of the current rectangle.

Create another rectangle that is scaled to 9 times the size of the current rectangle.



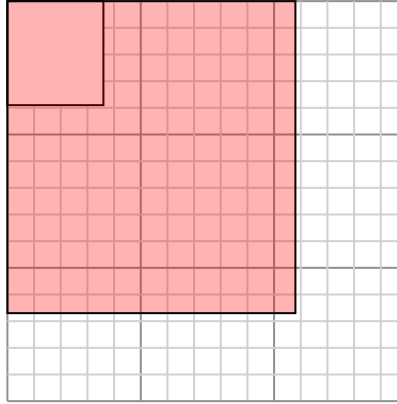
Draw each rectangle to the scale shown and determine the new dimensions.

- 1) The rectangle below has the dimensions:  
 $2 \times 4.2$



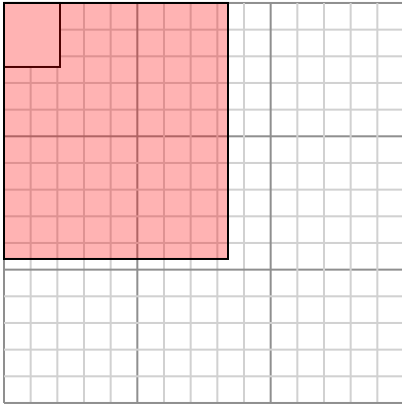
Create another rectangle that is scaled to 9 times the size of the current rectangle.

- 2) The rectangle below has the dimensions:  
 $3.6 \times 3.9$



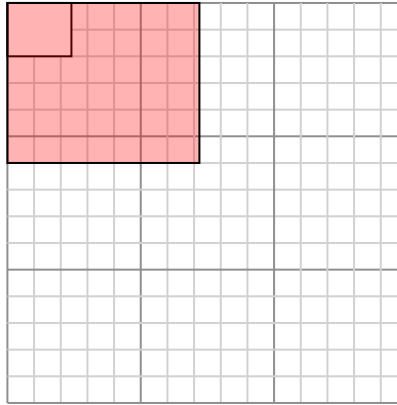
Create another rectangle that is scaled to 9 times the size of the current rectangle.

- 3) The rectangle below has the dimensions:  
 $2.1 \times 2.4$



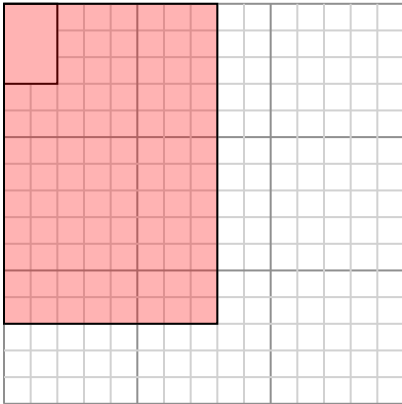
Create another rectangle that is scaled to 16 times the size of the current rectangle.

- 4) The rectangle below has the dimensions:  
 $2.4 \times 2$



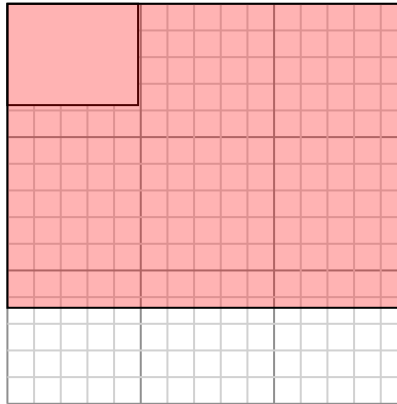
Create another rectangle that is scaled to 9 times the size of the current rectangle.

- 5) The rectangle below has the dimensions:  
 $2 \times 3$



Create another rectangle that is scaled to 16 times the size of the current rectangle.

- 6) The rectangle below has the dimensions:  
 $4.9 \times 3.8$



Create another rectangle that is scaled to 9 times the size of the current rectangle.

Answers

1.  $6 \times 12.6$

2.  $10.8 \times 11.7$

3.  $8.4 \times 9.6$

4.  $7.2 \times 6$

5.  $8 \times 12$

6.  $14.7 \times 11.4$