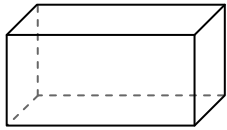




Use the diagram to determine the faces, vertices and edges of the shapes.

Answers

1)




rectangular prism

faces: _____

vertices: _____

edges: _____

2)



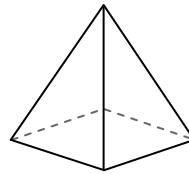
sphere

faces: _____

vertices: _____

edges: _____

3)



rectangular pyramid

faces: _____

vertices: _____

edges: _____

1. _____

2. _____

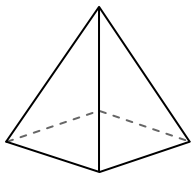
3. _____

4. _____


5. _____

6. _____

4)



rectangular pyramid



sphere

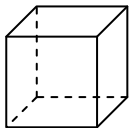
Which shape has more faces?

A.rectangular pyramid

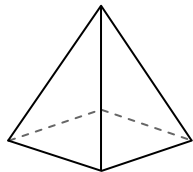
B.sphere

C.They both have the same number of faces.

5)



cube



rectangular pyramid

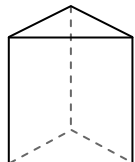
Which shape has more vertices?

A.cube

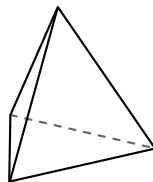
B.rectangular pyramid

C.They both have the same number of vertices.

6)



triangular prism



triangular pyramid

Which shape has more edges?

A.triangular prism

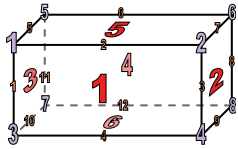
B.triangular pyramid

C.They both have the same number of edges.



Use the diagram to determine the faces, vertices and edges of the shapes.


1)



rectangular prism

faces: 6vertices: 8edges: 12

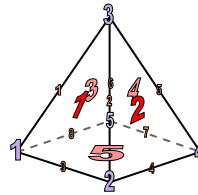
2)



sphere

faces: 1vertices: 0edges: 0

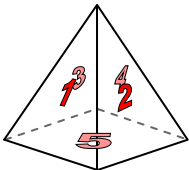
3)




rectangular pyramid

faces: 5vertices: 5edges: 8

4)



rectangular pyramid



sphere

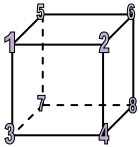
Which shape has more faces?

A.rectangular pyramid

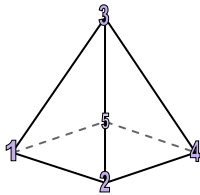
B.sphere

C.They both have the same number of faces.

5)



cube



rectangular pyramid

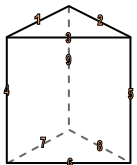
Which shape has more vertices?

A.cube

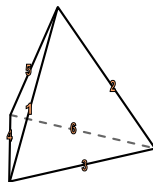
B.rectangular pyramid

C.They both have the same number of vertices.

6)



triangular prism



triangular pyramid

Which shape has more edges?

A.triangular prism

B.triangular pyramid

C.They both have the same number of edges.

Answers1. 6, 8, 122. 1, 0, 03. 5, 5, 84. A5. A6. A