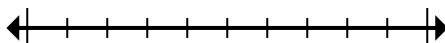




Mark the location (approximate) on the numberline and then solve.

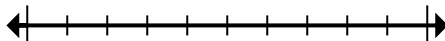
Answers

- 1) Round 60,393,636 to the nearest hundred thousand.



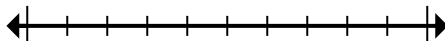
1. _____

- 2) Round 94,001 to the nearest ten thousand.



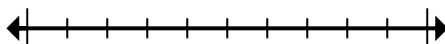
2. _____

- 3) Round 665 to the nearest hundred.



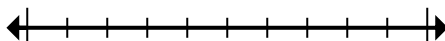
3. _____

- 4) Round 257 to the nearest hundred.



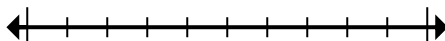
4. _____

- 5) Round 888,081 to the nearest ten thousand.



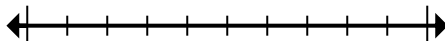
5. _____

- 6) Round 2,138 to the nearest thousand.



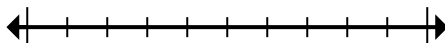
6. _____

- 7) Round 3,390 to the nearest thousand.



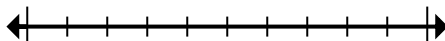
7. _____

- 8) Round 8,542,890 to the nearest ten thousand.



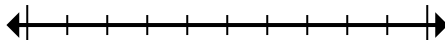
8. _____

- 9) Round 515,011 to the nearest hundred thousand.



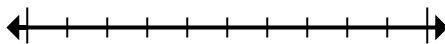
9. _____

- 10) Round 962,363 to the nearest hundred.



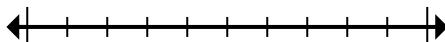
10. _____

- 11) Round 656,429 to the nearest hundred thousand.



11. _____

- 12) Round 87,606 to the nearest ten thousand.

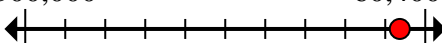













12. _____



Mark the location (approximate) on the numberline and then solve.

Answers

- 1) Round 60,393,636 to the nearest hundred thousand.
- 60,300,000  60,400,000
- 2) Round 94,001 to the nearest ten thousand.
- 90,000  100,000
- 3) Round 665 to the nearest hundred.
- 600  700
- 4) Round 257 to the nearest hundred.
- 200  300
- 5) Round 888,081 to the nearest ten thousand.
- 880,000  890,000
- 6) Round 2,138 to the nearest thousand.
- 2,000  3,000
- 7) Round 3,390 to the nearest thousand.
- 3,000  4,000
- 8) Round 8,542,890 to the nearest ten thousand.
- 8,540,000  8,550,000
- 9) Round 515,011 to the nearest hundred thousand.
- 500,000  600,000
- 10) Round 962,363 to the nearest hundred.
- 962,300  962,400
- 11) Round 656,429 to the nearest hundred thousand.
- 600,000  700,000
- 12) Round 87,606 to the nearest ten thousand.
- 80,000  90,000

1. **60,400,000**
2. **90,000**
3. **700**
4. **300**
5. **890,000**
6. **2,000**
7. **3,000**
8. **8,540,000**
9. **500,000**
10. **962,400**
11. **700,000**
12. **90,000**

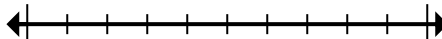


Mark the location (approximate) on the numberline and then solve.

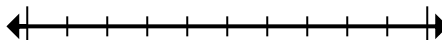
Answers

2,000	60,400,000	700	90,000
90,000	700,000	3,000	8,540,000
962,400	300	500,000	890,000

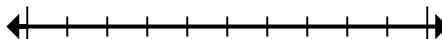
- 1) Round 60,393,636 to the nearest hundred thousand.



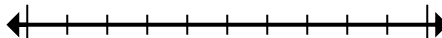
- 2) Round 94,001 to the nearest ten thousand.



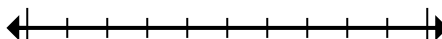
- 3) Round 665 to the nearest hundred.



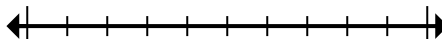
- 4) Round 257 to the nearest hundred.



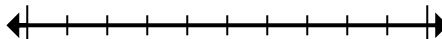
- 5) Round 888,081 to the nearest ten thousand.



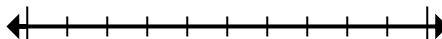
- 6) Round 2,138 to the nearest thousand.



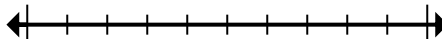
- 7) Round 3,390 to the nearest thousand.



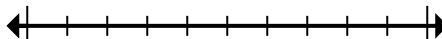
- 8) Round 8,542,890 to the nearest ten thousand.



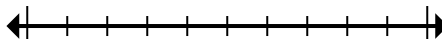
- 9) Round 515,011 to the nearest hundred thousand.



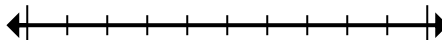
- 10) Round 962,363 to the nearest hundred.



- 11) Round 656,429 to the nearest hundred thousand.



- 12) Round 87,606 to the nearest ten thousand.



1. _____
2. _____
3. _____
4. _____
5. _____
6. _____
7. _____
8. _____
9. _____
10. _____
11. _____
12. _____