



Use the numberlines to round each number to the nearest 100.

Ex)

397



Ex. 400

1)

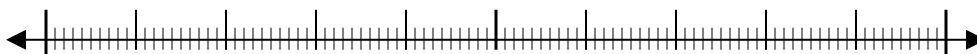
800



1. _____

2)

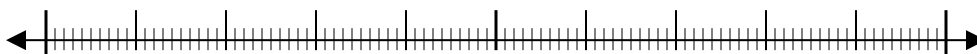
28,779



2. _____

3)

54,598



3. _____

4)

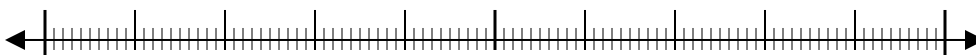
4,487



4. _____

5)

742



5. _____

6)

33,637



6. _____

7)

2,751



7. _____

8)

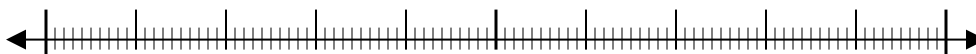
950



8. _____

9)

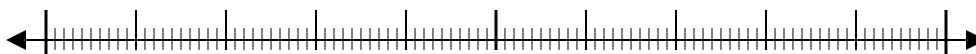
9,087



9. _____

10)

5,809

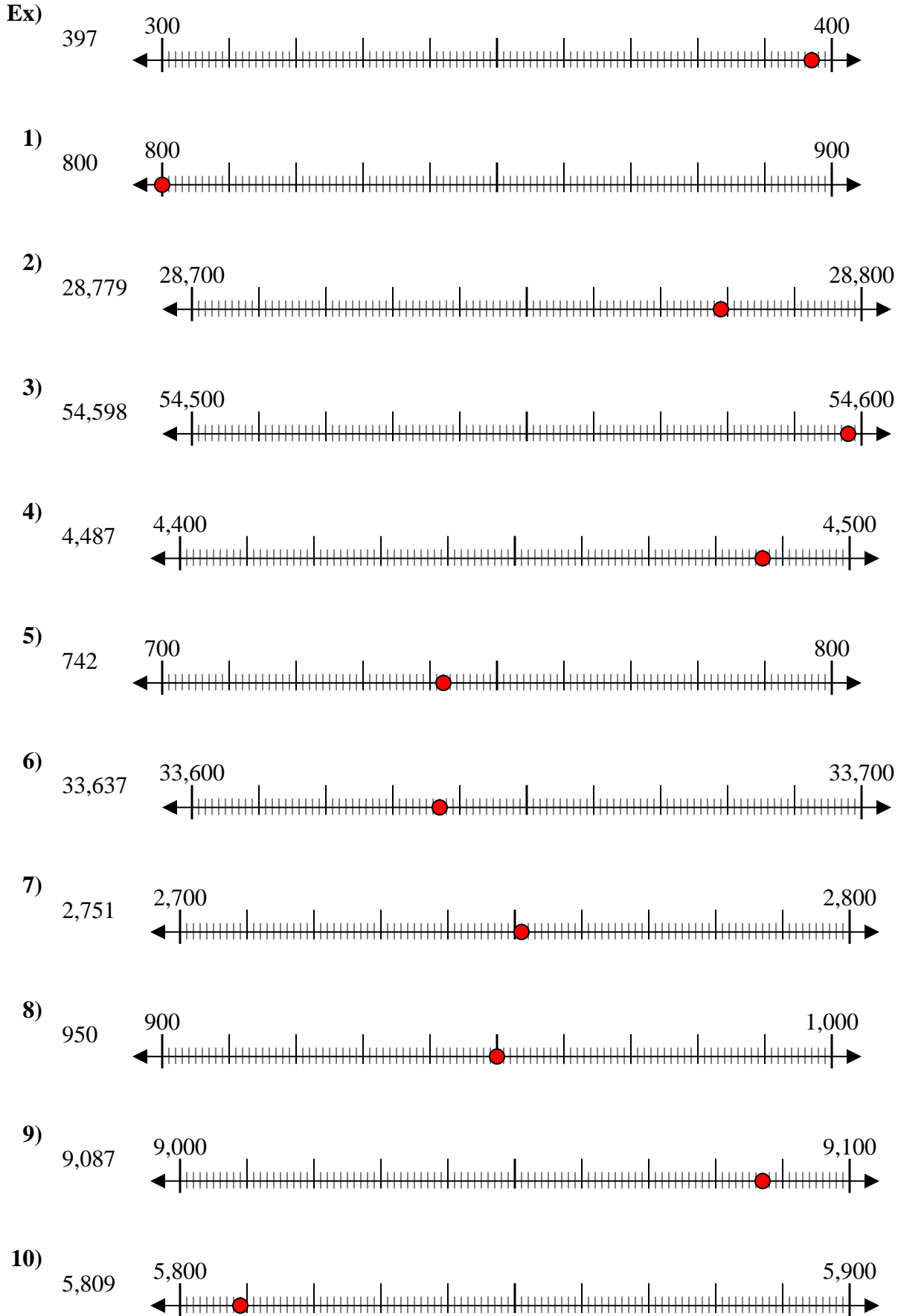


10. _____

Answers



Use the numberlines to round each number to the nearest 100.



Answers

- Ex. 400
1. 800
2. 28,800
3. 54,600
4. 4,500
5. 700
6. 33,600
7. 2,800
8. 1,000
9. 9,100
10. 5,800