



Use the numberlines to round each number to the nearest 100.

Ex)

22,128



Answers

Ex. 22,100

1)

7,798



1. _____

2)

73,791



2. _____

3)

48,807



3. _____

4)

1,381



4. _____

5)

746



5. _____

6)

140



6. _____

7)

904



7. _____

8)

93,445



8. _____

9)

4,176



9. _____

10)

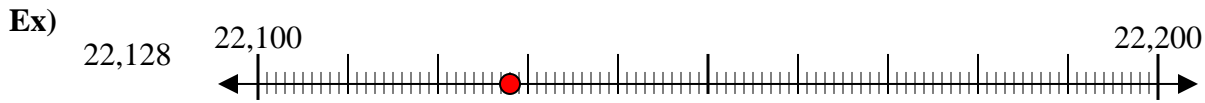
369



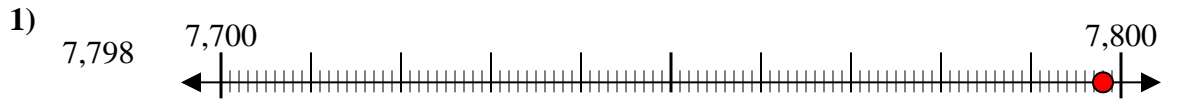
10. _____



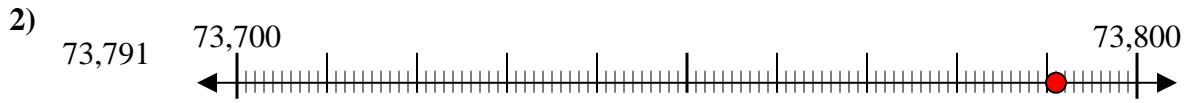
Use the numberlines to round each number to the nearest 100.



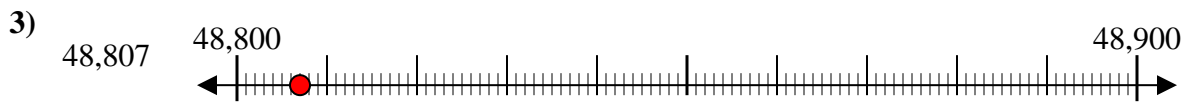
Answers
Ex. 22,100



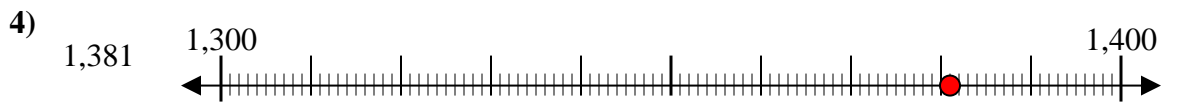
1. 7,800



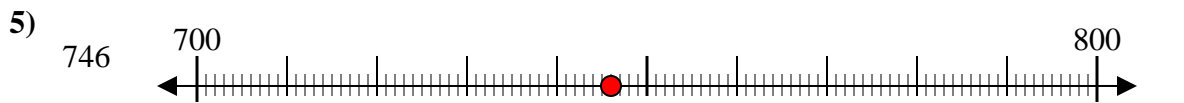
2. 73,800



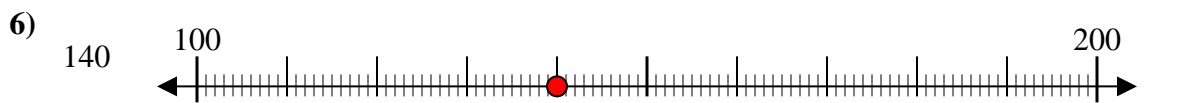
3. 48,800



4. 1,400



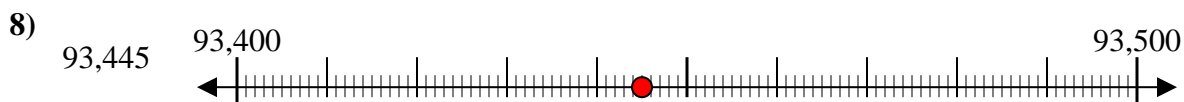
5. 700



6. 100



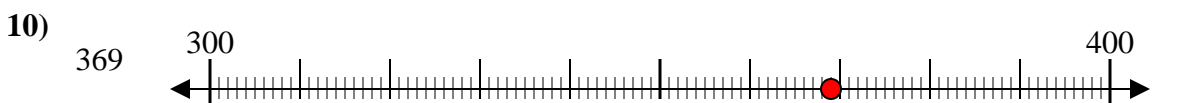
7. 900



8. 93,400



9. 4,200



10. 400