

**Use the double numberline to solve the problems.****Answers**

- 1) A recipe call for 9 teaspoons of seasoning for every 10 batches of chicken. If you have 70 batches of chicken, how many teaspoons of seasoning will you need?
- chicken
seasoning

1. _____

2. _____

- 2) At a school fundraiser for every 6 boxes of chocolate sold you earn 10 points. If you were to sell 36 boxes, how many points would you have earned?
- boxes
points

3. _____

4. _____

5. _____

- 3) In a video game for every 3 enemies defeat, you earned 7 points. If you defeated 24 enemies, how many points would you have earned?
- enemies
points

6. _____

7. _____

- 4) A movie theater put 10 cups of oil for every 8 batches of popcorn they made. After they had made 72 batches of popcorn, how much oil would they have used?
- popcorn
oil

8. _____

- 5) On her MP3 player for every 6 pop song Tiffany had she also had 9 country song. If she has 12 pop songs on her MP3 player, how many country songs does she have?
- pop
country

- 6) A store had a sale where you could get 6 bags of cashews for \$7. If you wanted to buy 54 bags, how much would it cost?
- cashews
price

- 7) A builder could get 9 sheets of sheetrock for \$8. If he bought 81 sheets, how much money would he have spent?
- sheetrock
price

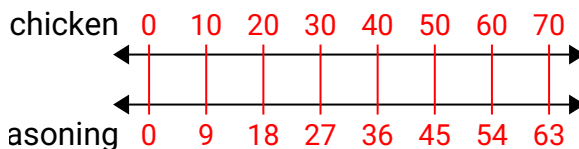
- 8) A box of candy had 9 cherry pieces for every 6 lemon pieces. If the box had 42 lemon pieces, how many cherry pieces would there be?
- lemon
cherry



Use the double numberline to solve the problems.

Answers

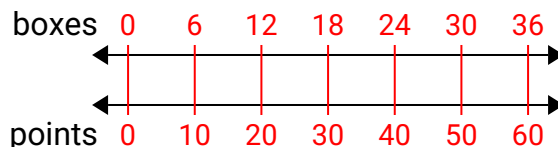
- 1) A recipe call for 9 teaspoons of seasoning for every 10 batches of chicken. If you have 70 batches of chicken, how many teaspoons of seasoning will you need?



1. **63**

2. **60**

- 2) At a school fundraiser for every 6 boxes of chocolate sold you earn 10 points. If you were to sell 36 boxes, how many points would you have earned?

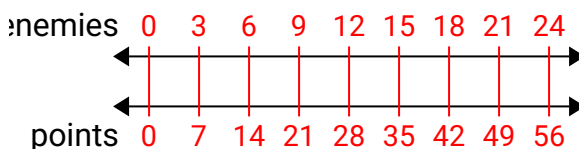


3. **56**

4. **90**

5. **18**

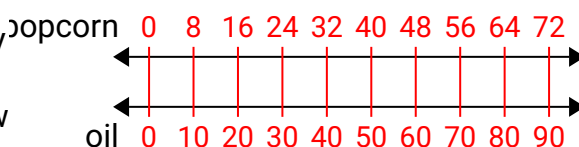
- 3) In a video game for every 3 enemies defeat, you earned 7 points. If you defeated 24 enemies, how many points would you have earned?



6. **63**

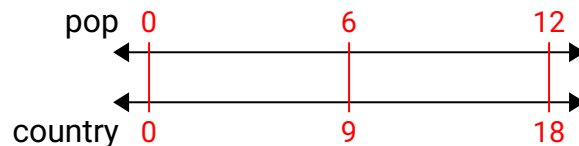
7. **72**

- 4) A movie theater put 10 cups of oil for every 8 batches of popcorn they made. After they had made 72 batches of popcorn, how much oil would they have used?

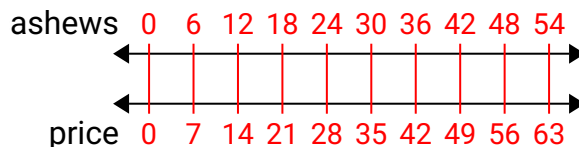


8. **63**

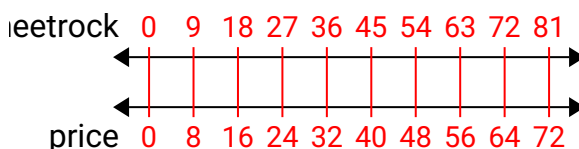
- 5) On her MP3 player for every 6 pop song Tiffany had she also had 9 country song. If she has 12 pop songs on her MP3 player, how many country songs does she have?



- 6) A store had a sale where you could get 6 bags of cashews for \$7. If you wanted to buy 54 bags, how much would it cost?



- 7) A builder could get 9 sheets of sheetrock for \$8. If he bought 81 sheets, how much money would he have spent?



- 8) A box of candy had 9 cherry pieces for every 6 lemon pieces. If the box had 42 lemon pieces, how many cherry pieces would there be?

