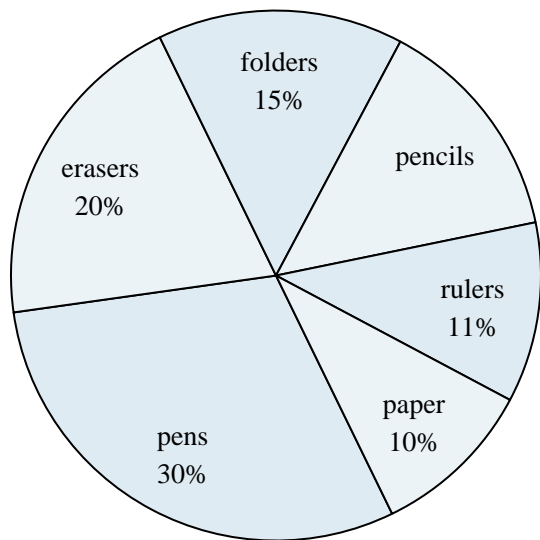
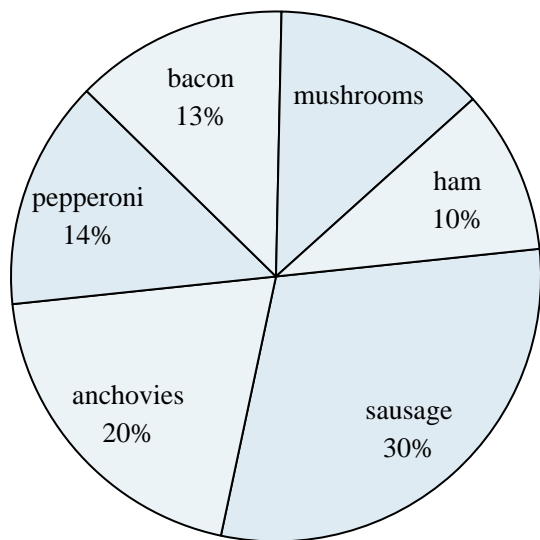




Use the graph to solve.

School Store Sales

- 1) Which product sold the best?
- 2) Which two products accounted for about half the sales?
- 3) What percent of the sales were pencils?
- 4) Which product sold the worst?
- 5) What is the combined amount of pens and folders sold?

Favorite Pizza Topping

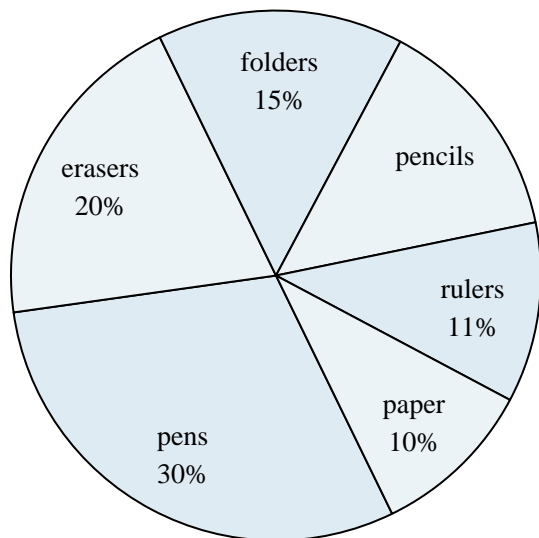
- 6) Which topping was the least popular?
- 7) What percent of people said anchovies was their favorite?
- 8) Which two toppings did about half the people like the best?
- 9) Which topping was the most popular?
- 10) What percent of people said either sausage or ham was their favorite?

Answers

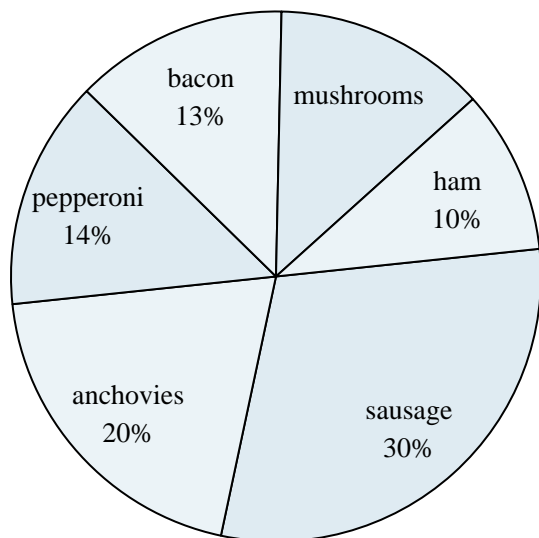
1. _____
2. _____
3. _____
4. _____
5. _____
6. _____
7. _____
8. _____
9. _____
10. _____



Use the graph to solve.

School Store Sales

- 1) Which product sold the best?
- 2) Which two products accounted for about half the sales?
- 3) What percent of the sales were pencils?
- 4) Which product sold the worst?
- 5) What is the combined amount of pens and folders sold?

Favorite Pizza Topping

- 6) Which topping was the least popular?
- 7) What percent of people said anchovies was their favorite?
- 8) Which two toppings did about half the people like the best?
- 9) Which topping was the most popular?
- 10) What percent of people said either sausage or ham was their favorite?

Answers

1. **pens**
2. **pens & erasers**
3. **14%**
4. **paper**
5. **45%**
6. **ham**
7. **20%**
8. **sausage & anchovies**
9. **sausage**
10. **40%**