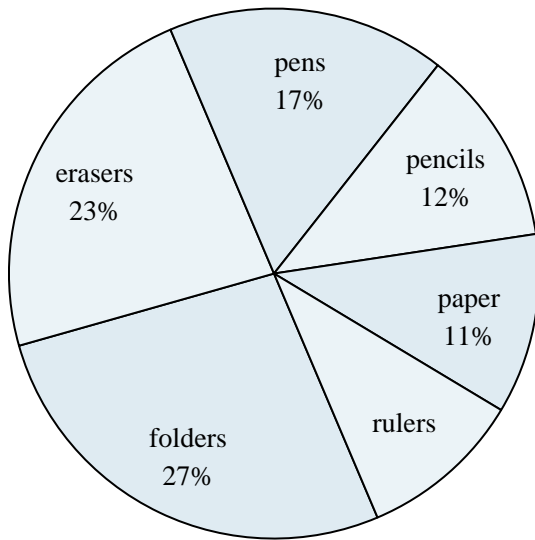





Use the graph to solve.

School Store Sales

- 1) What percent of the sales were folders?
- 2) Which product sold the best?
- 3) Which product sold the worst?
- 4) Which two products accounted for about half the sales?
- 5) What is the combined amount of erasers and pencils sold?

Time Spent on Homework

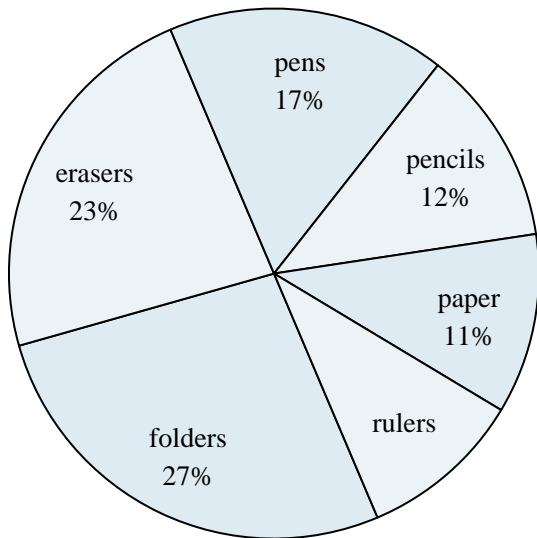
- 6) What percent of the time was spent working on reading?
- 7) The most time was spent on which subject?
- 8) What is the combined amount of time spent on science and english?
- 9) The least time was spent on which subject?
- 10) Which two subjects accounted for about half the time spent?

Answers


1. _____
2. _____
3. _____
4. _____
5. _____
6. _____
7. _____
8. _____
9. _____
10. _____



Use the graph to solve.

School Store Sales

- 1) What percent of the sales were folders?
- 2) Which product sold the best?
- 3) Which product sold the worst?
- 4) Which two products accounted for about half the sales?
- 5) What is the combined amount of erasers and pencils sold?

Time Spent on Homework

- 6) What percent of the time was spent working on reading?
- 7) The most time was spent on which subject?
- 8) What is the combined amount of time spent on science and english?
- 9) The least time was spent on which subject?
- 10) Which two subjects accounted for about half the time spent?

Answers

1. **27%**
2. **folders**
3. **rulers**
4. **folders & erasers**
5. **35%**
6. **15%**
7. **social studies**
8. **31%**
9. **english**
10. **social studies & science**