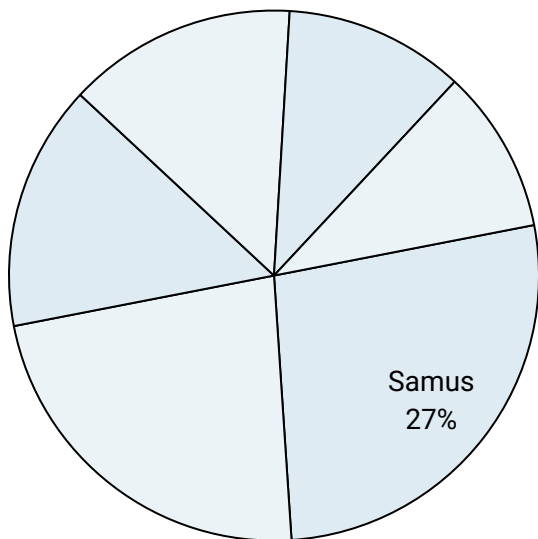




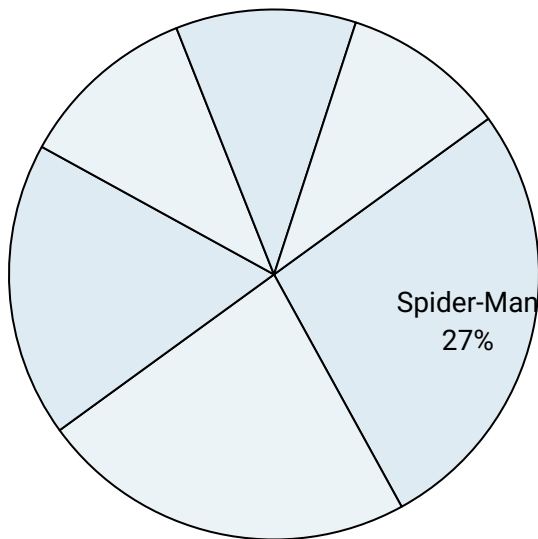
Use the graph to solve.

Favorite Game Character



- 1) Which character was the least popular?
- 2) What percent of people said DK was their favorite?
- 3) What percent of people said either Mario or Samus was their favorite?
- 4) Which character was the most popular?
- 5) Which two characters did about half the people say was their favorite?

Favorite Superhero



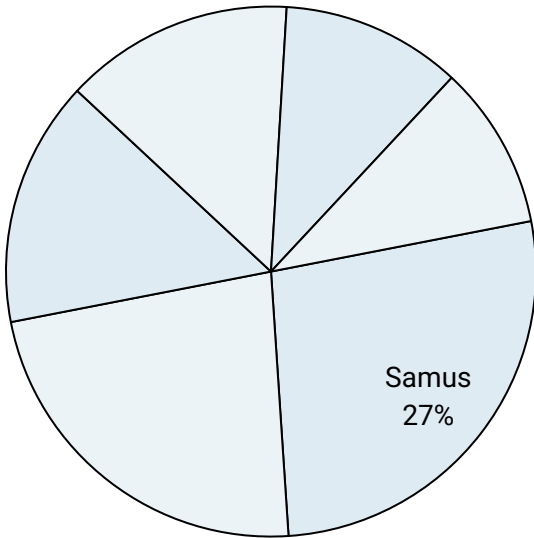
- 6) Which two heroes did about half the people say was their favorite?
- 7) What percent of people said The Hulk was their favorite?
- 8) Which hero was the most popular?
- 9) Which hero was the least popular?
- 10) What percent of people said either Thor or Batman was their favorite?

Answers

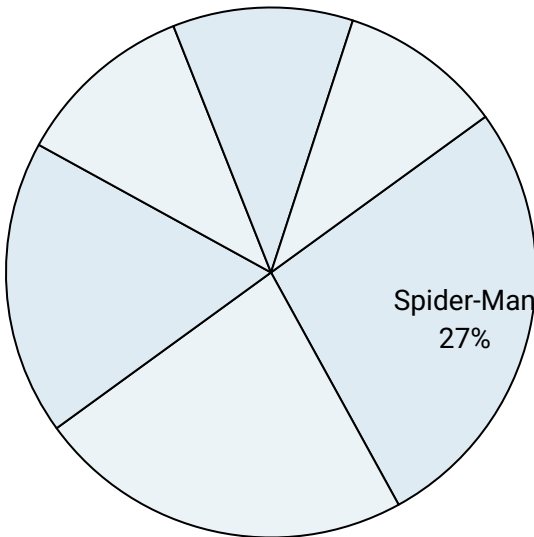
1. _____
2. _____
3. _____
4. _____
5. _____
6. _____
7. _____
8. _____
9. _____
10. _____



Use the graph to solve.

Favorite Game Character

- 1) Which character was the least popular?
- 2) What percent of people said DK was their favorite?
- 3) What percent of people said either Mario or Samus was their favorite?
- 4) Which character was the most popular?
- 5) Which two characters did about half the people say was their favorite?

Favorite Superhero

- 6) Which two heroes did about half the people say was their favorite?
- 7) What percent of people said The Hulk was their favorite?
- 8) Which hero was the most popular?
- 9) Which hero was the least popular?
- 10) What percent of people said either Thor or Batman was their favorite?

Answers

1. **Mario**
2. **14%**
3. **37%**
4. **Samus**
5. **Samus & Pikachu**
6. **Spider-Man & Thor**
7. **11%**
8. **Spider-Man**
9. **IronMan**
10. **41%**