



Determine which letter best completes the pattern.

Answers

1) Determine which letter best completes the pattern.



- A.
- B.
- C.
- D.

1. _____

2. _____

3. _____

4. _____

5. _____

2) Determine which letter best completes the pattern.



- A.
- B.
- C.
- D.

3) Determine which letter best completes the pattern.




- A.
- B.
- C.
- D.

4) Determine which letter best completes the pattern.



- A.
- B.
- C.
- D.

5) Determine which letter best completes the pattern.



- A.
- B.
- C.
- D.

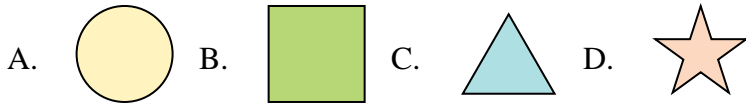


Determine which letter best completes the pattern.

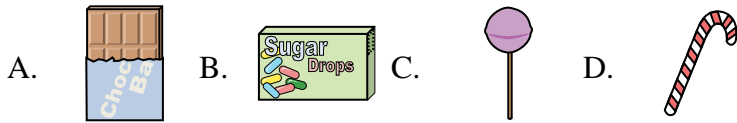
1) Determine which letter best completes the pattern.



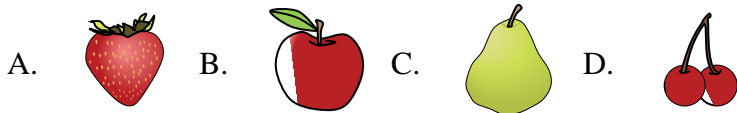
2) Determine which letter best completes the pattern.





3) Determine which letter best completes the pattern.



4) Determine which letter best completes the pattern.



5) Determine which letter best completes the pattern.



Answers

1. **D**

2. **B**

3. **D**

4. **A**

5. **A**