



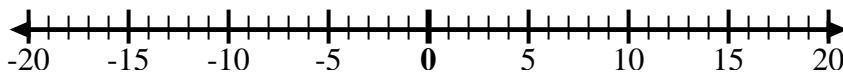
Use the numberlines to show each expression and solve.

Ex) Start at 7 and add -12



Ex. $7 + -12 = -5$

1) Start at -2 and add 5



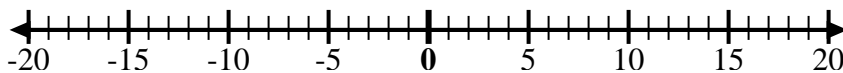
1. _____

2) Start at 8 and add -13



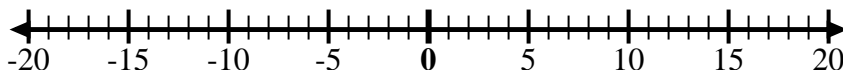
2. _____

3) Start at -7 and add -2



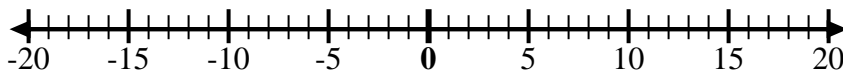
3. _____

4) Start at -4 and add -3



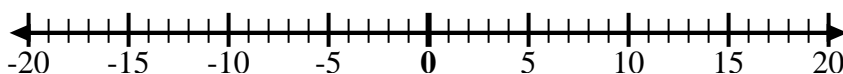
4. _____

5) Start at -3 and add -2



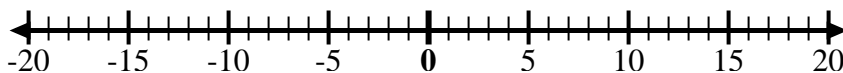
5. _____

6) Start at -7 and add 5



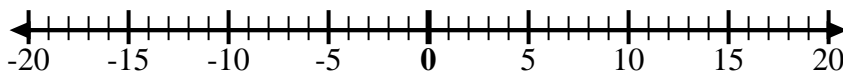
6. _____

7) Start at -6 and add -2



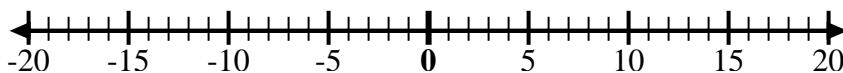
7. _____

8) Start at 1 and add -11



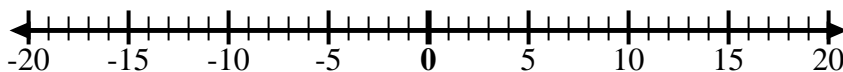
8. _____

9) Start at -7 and add 8



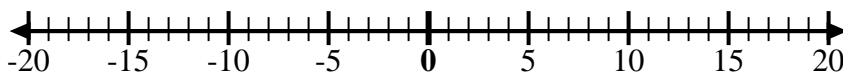
9. _____

10) Start at 1 and add -9



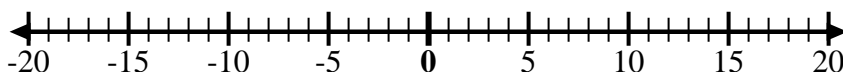
10. _____

11) Start at -3 and add -3



11. _____

12) Start at 2 and add -11



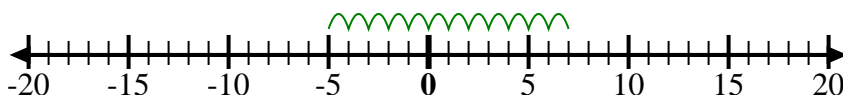
12. _____

Answers



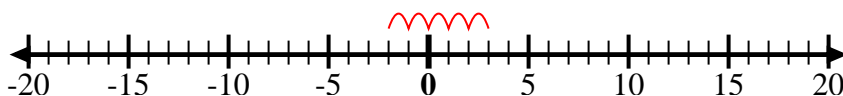
Use the numberlines to show each expression and solve.

Ex) Start at 7 and add -12



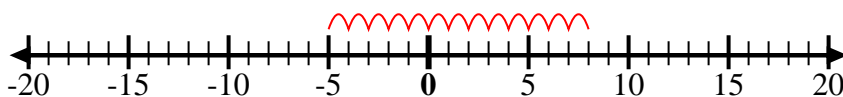
Ex. $7 + -12 = -5$

1) Start at -2 and add 5



1. $-2 + 5 = 3$

2) Start at 8 and add -13



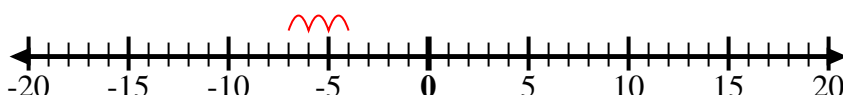
2. $8 + -13 = -5$

3) Start at -7 and add -2



3. $-7 + -2 = -9$

4) Start at -4 and add -3



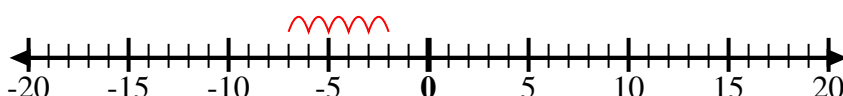
4. $-4 + -3 = -7$

5) Start at -3 and add -2



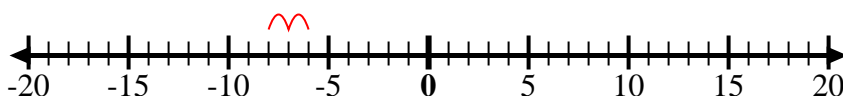
5. $-3 + -2 = -5$

6) Start at -7 and add 5



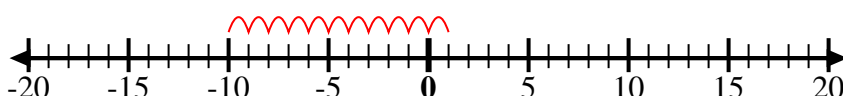
6. $-7 + 5 = -2$

7) Start at -6 and add -2



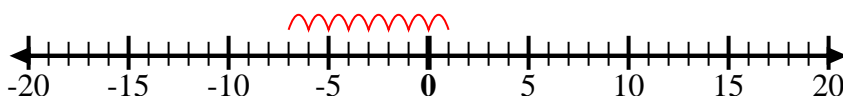
7. $-6 + -2 = -8$

8) Start at 1 and add -11



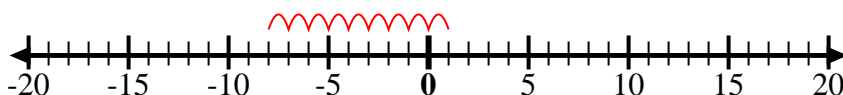
8. $1 + -11 = -10$

9) Start at -7 and add 8



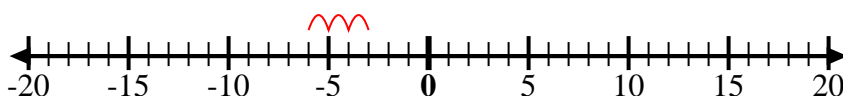
9. $-7 + 8 = 1$

10) Start at 1 and add -9



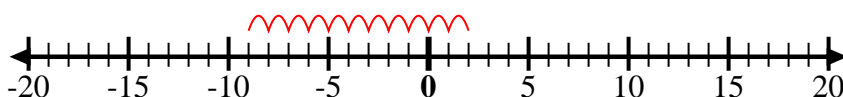
10. $1 + -9 = -8$

11) Start at -3 and add -3



11. $-3 + -3 = -6$

12) Start at 2 and add -11



12. $2 + -11 = -9$

Answers