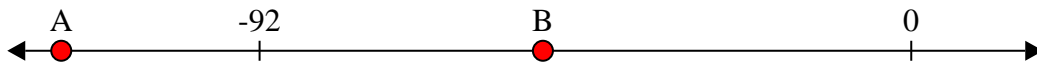




Solve each problem.


Answers

1) Which letter best shows -52?




1. _____

2) Which letter best shows -24?




2. _____

3) Which letter best shows -26?



3. _____

4) Which letter best shows -108?



4. _____

5) Which letter best shows -78?



5. _____

6) Which letter best shows -110?




6. _____

7) Which letter best shows -102?




7. _____

8) Which letter best shows -23?




8. _____

9) Which letter best shows -13?



9. _____

10) Which letter best shows -22?

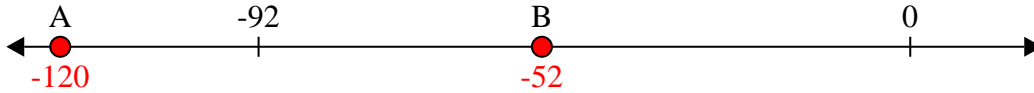


10. _____

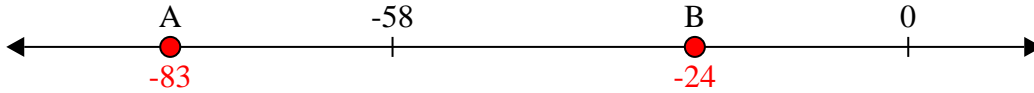


Solve each problem.

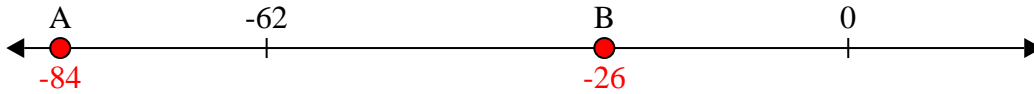
1) Which letter best shows -52?



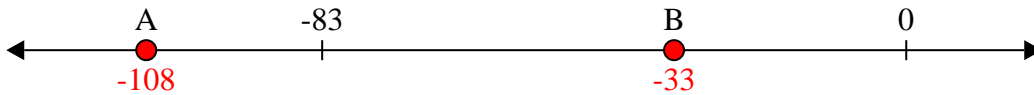
2) Which letter best shows -24?



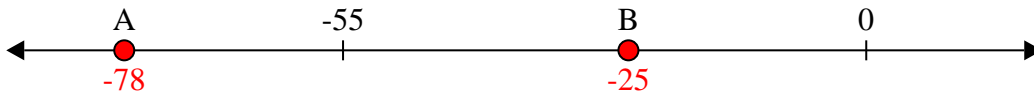
3) Which letter best shows -26?



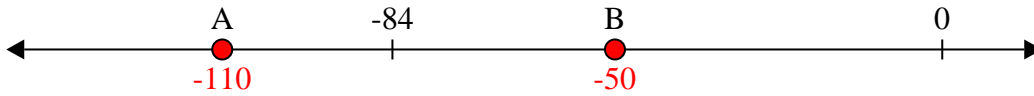
4) Which letter best shows -108?



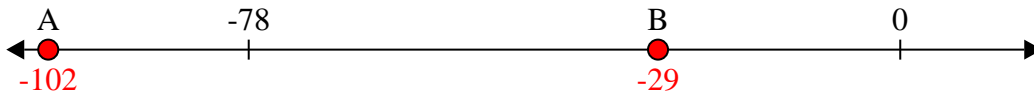
5) Which letter best shows -78?



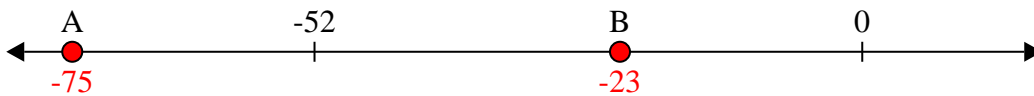
6) Which letter best shows -110?



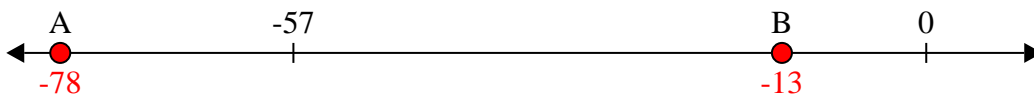
7) Which letter best shows -102?



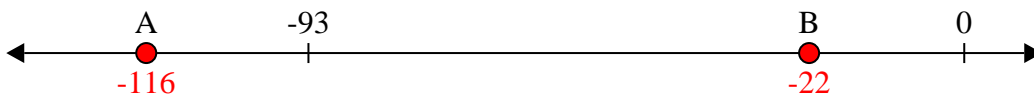
8) Which letter best shows -23?



9) Which letter best shows -13?



10) Which letter best shows -22?



Answers

1. **B**

2. **B**

3. **B**

4. **A**

5. **A**

6. **A**

7. **A**

8. **B**

9. **B**

10. **B**