




Solve each problem.


**Answers**

1) Which letter best shows -101?




1. \_\_\_\_\_

2) Which letter best shows -42?




2. \_\_\_\_\_

3) Which letter best shows -76?




3. \_\_\_\_\_

4) Which letter best shows -110?




4. \_\_\_\_\_

5) Which letter best shows -106?




5. \_\_\_\_\_

6) Which letter best shows -114?




6. \_\_\_\_\_

7) Which letter best shows -21?




7. \_\_\_\_\_

8) Which letter best shows -20?




8. \_\_\_\_\_

9) Which letter best shows -79?



9. \_\_\_\_\_

10) Which letter best shows -97?




10. \_\_\_\_\_

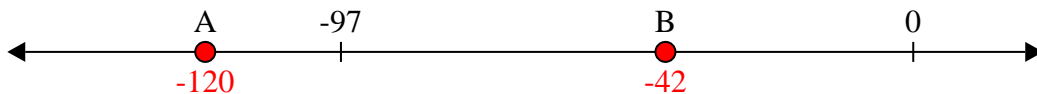


Solve each problem.

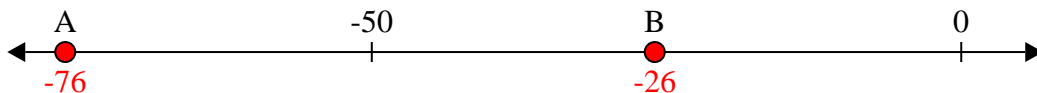
1) Which letter best shows -101?




2) Which letter best shows -42?




3) Which letter best shows -76?




4) Which letter best shows -110?




5) Which letter best shows -106?




6) Which letter best shows -114?




7) Which letter best shows -21?



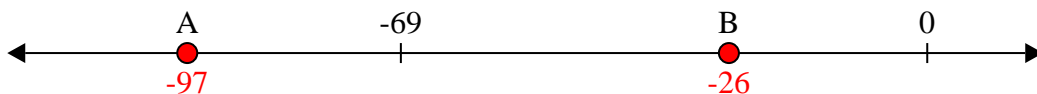
8) Which letter best shows -20?



9) Which letter best shows -79?



10) Which letter best shows -97?



**Answers**

1.   **A**  

2.   **B**  

3.   **A**  

4.   **A**  

5.   **A**  

6.   **A**  

7.   **B**  

8.   **B**  

9.   **A**  

10.   **A**