




Solve each problem.


Answers

- 1) Which letter best shows -109?




1. _____

- 2) Which letter best shows -122?



2. _____

- 3) Which letter best shows -35?




3. _____

- 4) Which letter best shows -91?




4. _____

- 5) Which letter best shows -10?




5. _____

- 6) Which letter best shows -105?




6. _____

- 7) Which letter best shows -17?




7. _____

- 8) Which letter best shows -122?



8. _____

- 9) Which letter best shows -12?



9. _____

- 10) Which letter best shows -31?




10. _____




Solve each problem.

Answers


- 1) Which letter best shows -109?

1. **A**

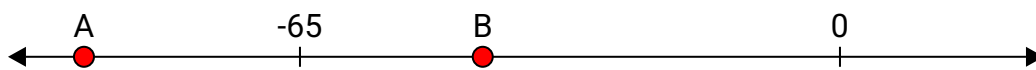
- 2) Which letter best shows -122?

2. **A**


- 3) Which letter best shows -35?

3. **B**


- 4) Which letter best shows -91?

4. **A**


- 5) Which letter best shows -10?

5. **B**


- 6) Which letter best shows -105?

6. **A**


- 7) Which letter best shows -17?

7. **B**


- 8) Which letter best shows -122?

8. **A**

- 9) Which letter best shows -12?

9. **B**

- 10) Which letter best shows -31?

10. **B**