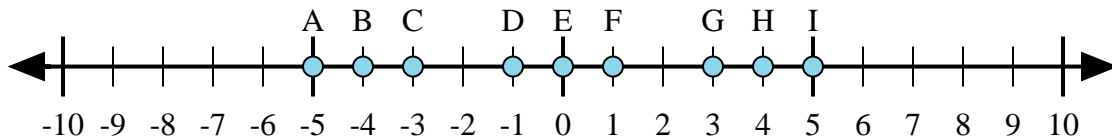




Determine which letter in the numberline best represents the answer to each problem.

Answers



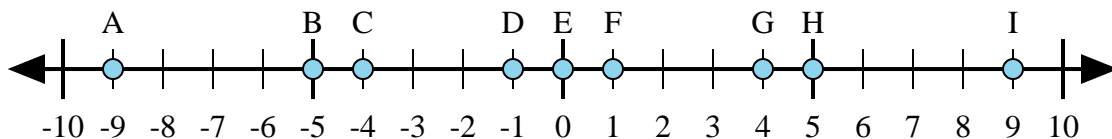
1)  $4 + 1 =$

2)  $4 + (-1) =$

3)  $1 + (-4) =$

4)  $(-4) + (-1) =$

5)  $(-1) + 4 =$



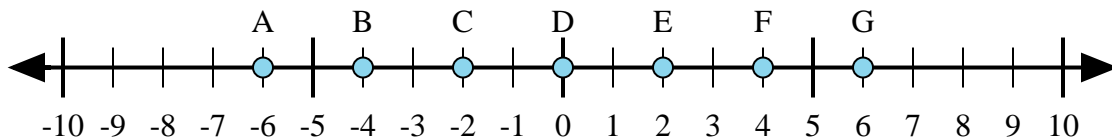
6)  $(-4) + 5 =$

7)  $4 + (-5) =$

8)  $4 + 5 =$

9)  $(-4) + (-5) =$

10)  $(-5) + 4 =$



11)  $(-4) + (-2) =$

12)  $2 + (-4) =$

13)  $4 + 2 =$

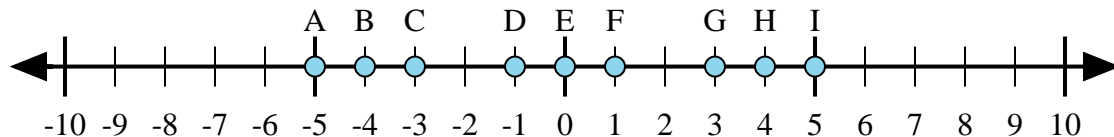
14)  $(-2) + 4 =$

15)  $4 + (-2) =$

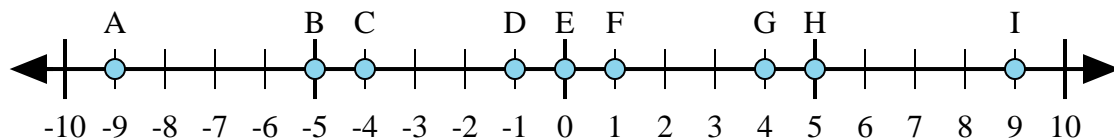
1. \_\_\_\_\_
2. \_\_\_\_\_
3. \_\_\_\_\_
4. \_\_\_\_\_
5. \_\_\_\_\_
6. \_\_\_\_\_
7. \_\_\_\_\_
8. \_\_\_\_\_
9. \_\_\_\_\_
10. \_\_\_\_\_
11. \_\_\_\_\_
12. \_\_\_\_\_
13. \_\_\_\_\_
14. \_\_\_\_\_
15. \_\_\_\_\_



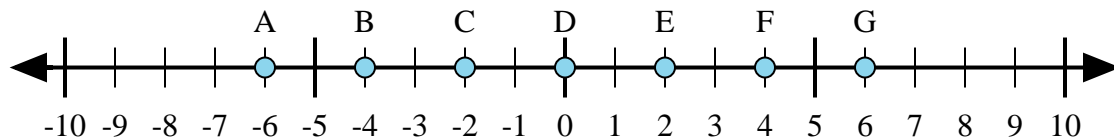
Determine which letter in the numberline best represents the answer to each problem.



- 1)  $4 + 1 =$
- 2)  $4 + (-1) =$
- 3)  $1 + (-4) =$
- 4)  $(-4) + (-1) =$
- 5)  $(-1) + 4 =$



- 6)  $(-4) + 5 =$
- 7)  $4 + (-5) =$
- 8)  $4 + 5 =$
- 9)  $(-4) + (-5) =$
- 10)  $(-5) + 4 =$



- 11)  $(-4) + (-2) =$
- 12)  $2 + (-4) =$
- 13)  $4 + 2 =$
- 14)  $(-2) + 4 =$
- 15)  $4 + (-2) =$

Answers

1. I
2. G
3. C
4. A
5. G
6. F
7. D
8. I
9. A
10. D
11. A
12. C
13. G
14. E
15. E