

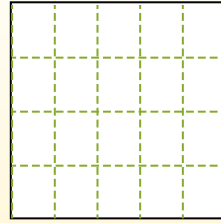
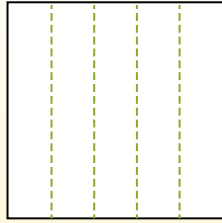
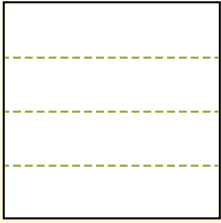


Partition the shape as described and then count to find the number of boxes.

Rows go left to right.

Columns go up and down.


This has 4 rows and 5 columns.  
There are 20 boxes total.




**Answers**

1. \_\_\_\_\_
2. \_\_\_\_\_
3. \_\_\_\_\_
4. \_\_\_\_\_
5. \_\_\_\_\_
6. \_\_\_\_\_
7. \_\_\_\_\_
8. \_\_\_\_\_
9. \_\_\_\_\_


1) 2 rows  
2 columns




2) 4 rows  
2 columns




3) 5 rows  
5 columns




4) 2 rows  
4 columns




5) 4 rows  
4 columns



6) 5 rows  
3 columns




7) 3 rows  
2 columns



8) 3 rows  
4 columns



9) 3 rows  
5 columns



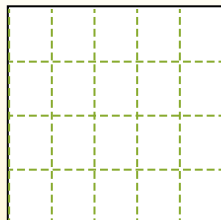
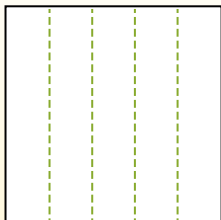
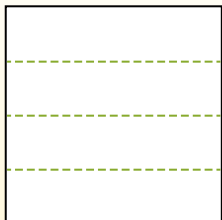


Partition the shape as described and then count to find the number of boxes.

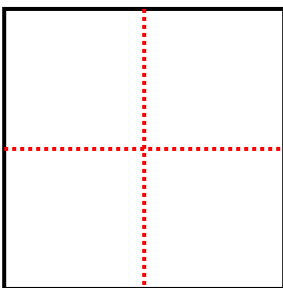
Rows go left to right.

Columns go up and down.

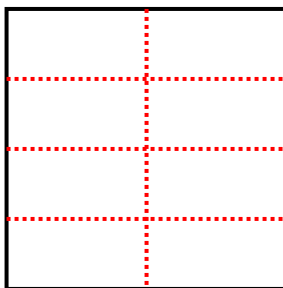
This has 4 rows and 5 columns.  
There are 20 boxes total.



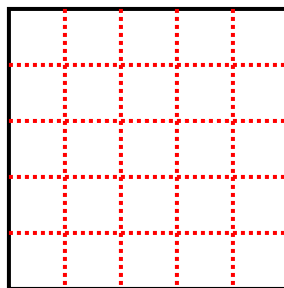
1) 2 rows  
2 columns



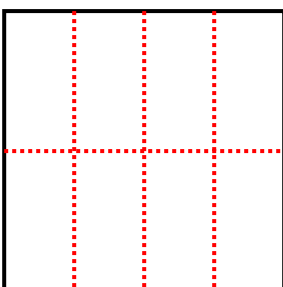
2) 4 rows  
2 columns




3) 5 rows  
5 columns



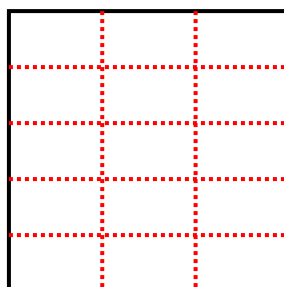
4) 2 rows  
4 columns



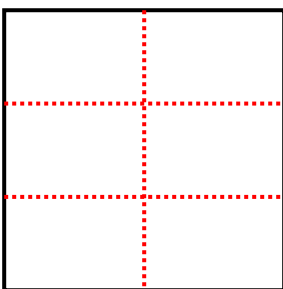
5) 4 rows  
4 columns



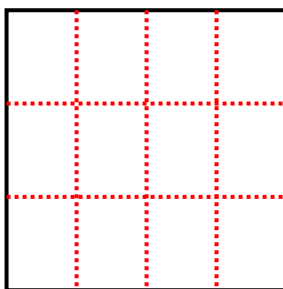
6) 5 rows  
3 columns




7) 3 rows  
2 columns



8) 3 rows  
4 columns



9) 3 rows  
5 columns



Answers

1. 4

2. 8

3. 25

4. 8

5. 16

6. 15

7. 6

8. 12

9. 15