





Use the array provided to solve each problem.


1) $20 \times 24 =$




2) $20 \times 29 =$




3) $24 \times 20 =$




4) $20 \times 26 =$



5) $20 \times 25 =$



6) $23 \times 20 =$



Answers

1. _____

2. _____

3. _____

4. _____

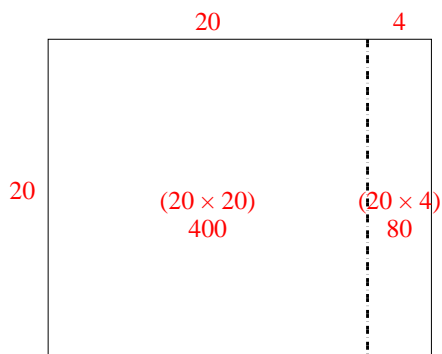
5. _____

6. _____

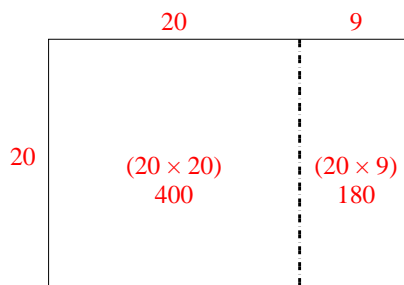


Use the array provided to solve each problem.

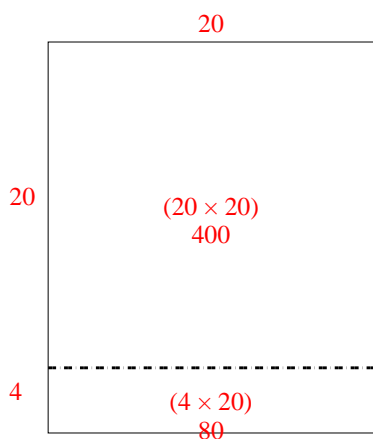
1) $20 \times 24 =$



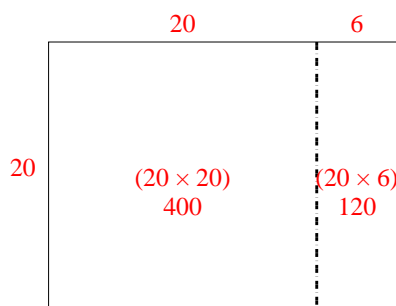
2) $20 \times 29 =$



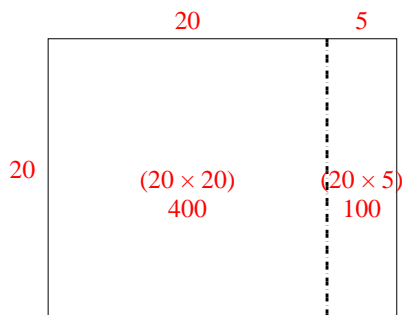
3) $24 \times 20 =$



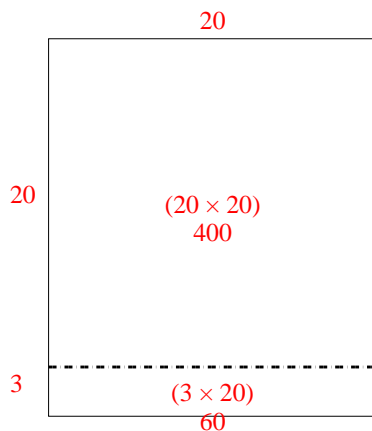
4) $20 \times 26 =$



5) $20 \times 25 =$



6) $23 \times 20 =$



Answers

1. 480

2. 580

3. 480

4. 520

5. 500

6. 460