





Use the array provided to solve each problem.


1)  $20 \times 26 =$




2)  $21 \times 20 =$




3)  $20 \times 22 =$




4)  $20 \times 28 =$



5)  $20 \times 29 =$



6)  $20 \times 23 =$



Answers

1. \_\_\_\_\_

2. \_\_\_\_\_

3. \_\_\_\_\_

4. \_\_\_\_\_

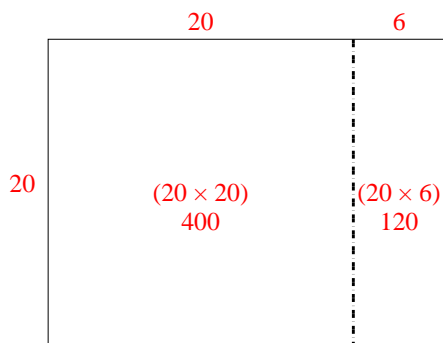
5. \_\_\_\_\_

6. \_\_\_\_\_

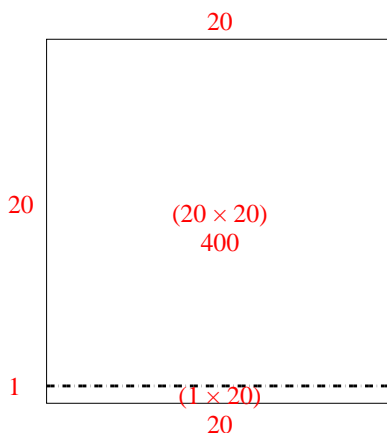


Use the array provided to solve each problem.

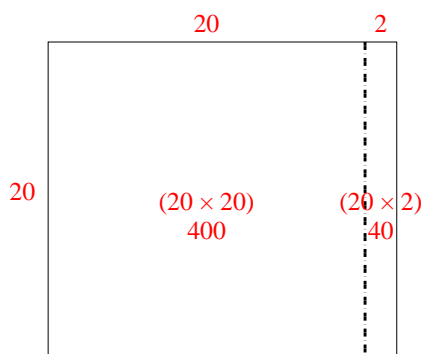
1)  $20 \times 26 =$



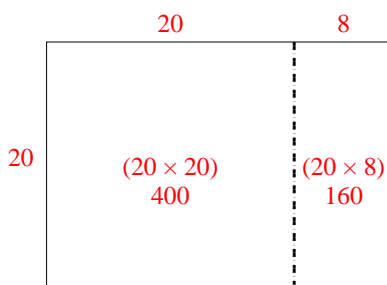
2)  $21 \times 20 =$



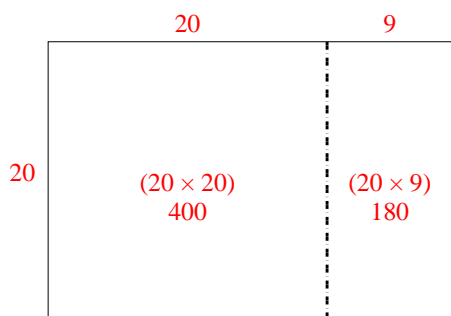
3)  $20 \times 22 =$



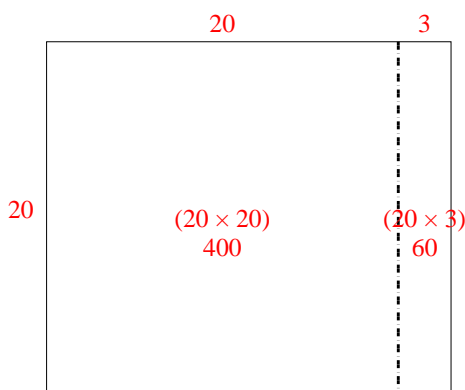
4)  $20 \times 28 =$



5)  $20 \times 29 =$



6)  $20 \times 23 =$



Answers

1. **520**

2. **420**

3. **440**

4. **560**

5. **580**

6. **460**