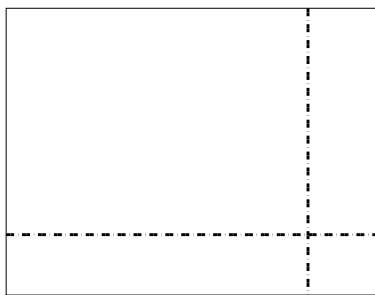


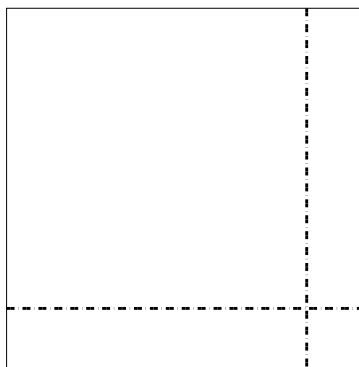


Use the array provided to solve each problem.

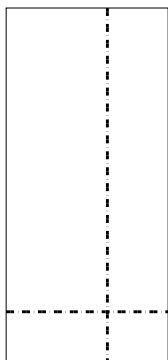
1) $38 \times 49 =$




2) $36 \times 36 =$




3) $35 \times 16 =$




4) $35 \times 26 =$



5) $33 \times 24 =$



6) $34 \times 46 =$



Answers

1. _____

2. _____

3. _____

4. _____

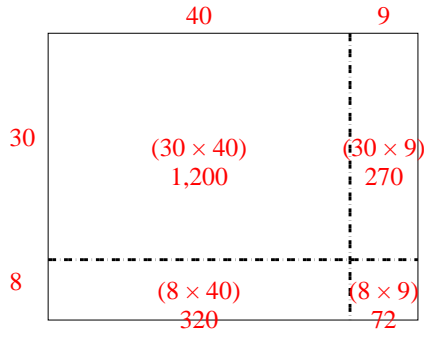
5. _____

6. _____

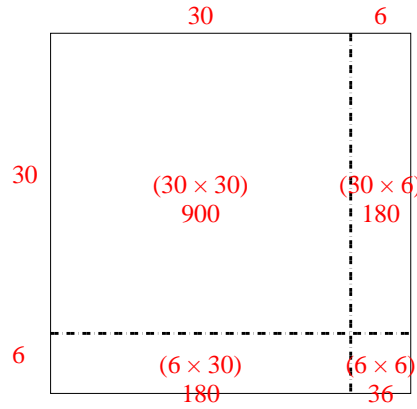


Use the array provided to solve each problem.

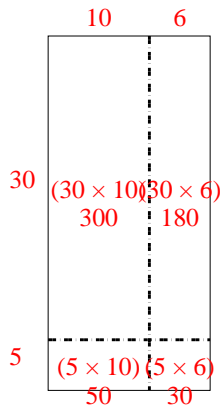
1) $38 \times 49 =$



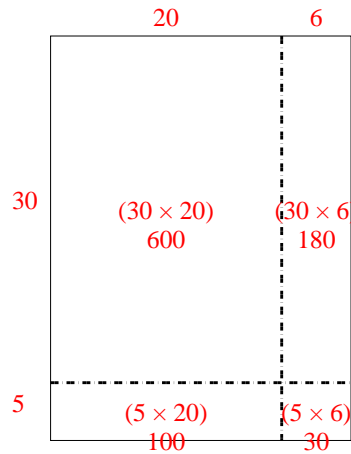
2) $36 \times 36 =$



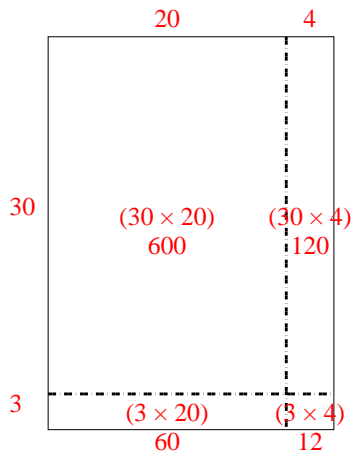
3) $35 \times 16 =$



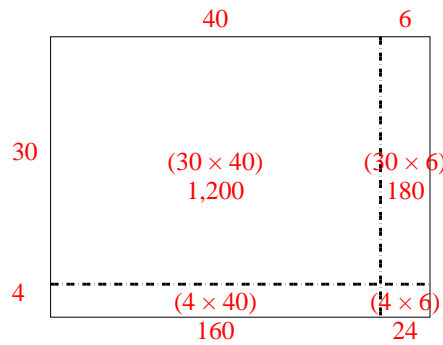
4) $35 \times 26 =$



5) $33 \times 24 =$



6) $34 \times 46 =$



Answers

1. 1,862

2. 1,296

3. 560

4. 910

5. 792

6. 1,564