





Write an equation to express the array and then find the number of shapes.

Answers





Ex. $4 \times 4 = 16$

1. _____

2. _____

3. _____

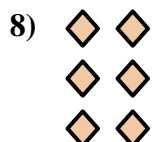



4. _____

5. _____

6. _____

7. _____



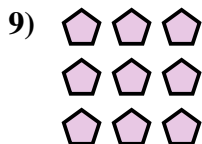


8. _____

9. _____

10. _____


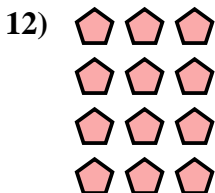
11. _____



12. _____

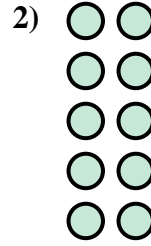
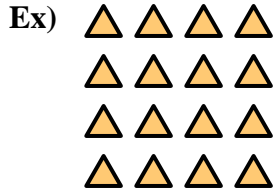
13. _____

14. _____





Write an equation to express the array and then find the number of shapes.



Answers

Ex. $4 \times 4 = 16$

1. $2 \times 4 = 8$

2. $5 \times 2 = 10$

3. $3 \times 4 = 12$

4. $3 \times 5 = 15$

5. $2 \times 3 = 6$

6. $4 \times 5 = 20$

7. $5 \times 3 = 15$

8. $3 \times 2 = 6$

9. $3 \times 3 = 9$

10. $5 \times 5 = 25$

11. $5 \times 4 = 20$

12. $4 \times 3 = 12$

13. $2 \times 2 = 4$

14. $2 \times 5 = 10$

