



Use lattice multiplication to solve each problem.

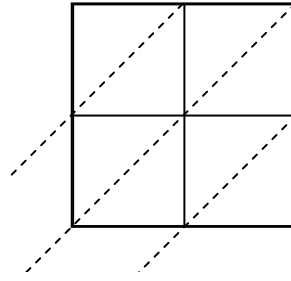
1)  $51 \times 54 =$



2)  $92 \times 75 =$



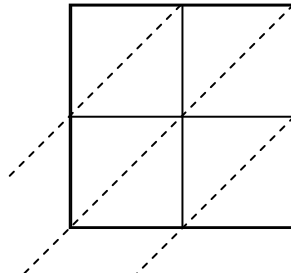
3)  $74 \times 33 =$



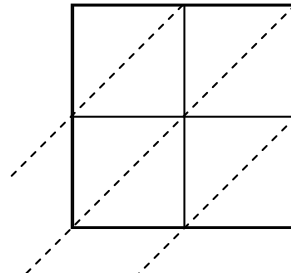
4)  $68 \times 33 =$



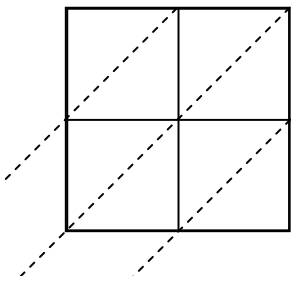
5)  $87 \times 39 =$



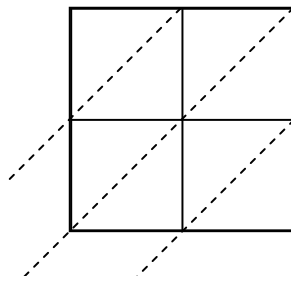
6)  $21 \times 53 =$



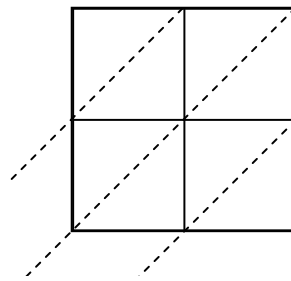
7)  $66 \times 63 =$



8)  $28 \times 79 =$



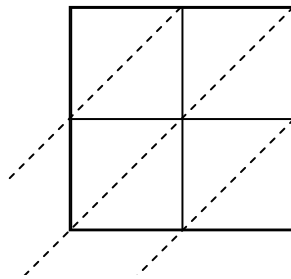
9)  $97 \times 26 =$



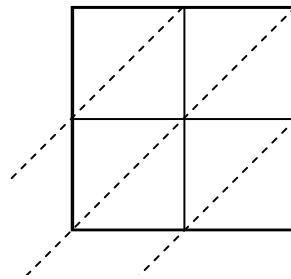
10)  $39 \times 30 =$



11)  $78 \times 26 =$



12)  $82 \times 46 =$



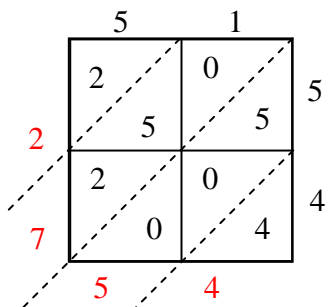
**Answers**

1. \_\_\_\_\_
2. \_\_\_\_\_
3. \_\_\_\_\_
4. \_\_\_\_\_
5. \_\_\_\_\_
6. \_\_\_\_\_
7. \_\_\_\_\_
8. \_\_\_\_\_
9. \_\_\_\_\_
10. \_\_\_\_\_
11. \_\_\_\_\_
12. \_\_\_\_\_

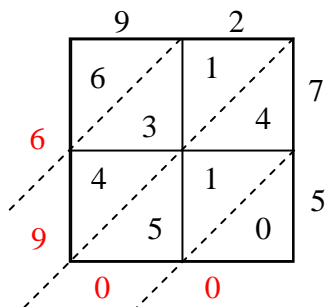


Use lattice multiplication to solve each problem.

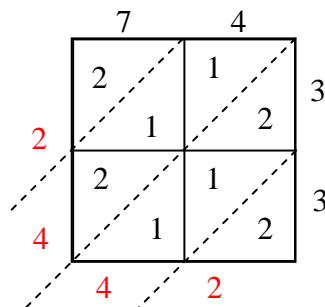
1)  $51 \times 54 =$



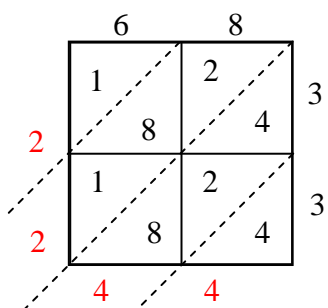
2)  $92 \times 75 =$



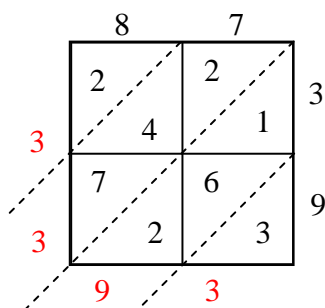
3)  $74 \times 33 =$



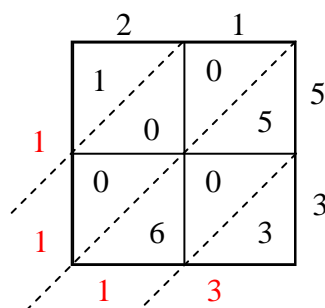
4)  $68 \times 33 =$



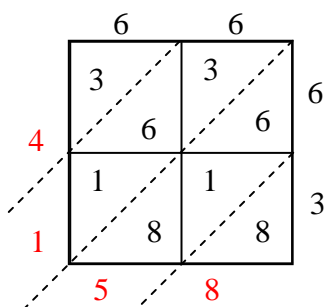
5)  $87 \times 39 =$



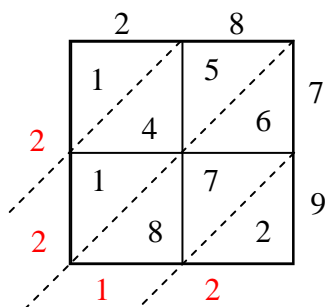
6)  $21 \times 53 =$



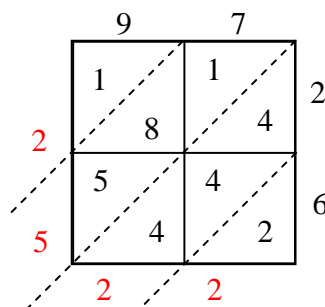
7)  $66 \times 63 =$



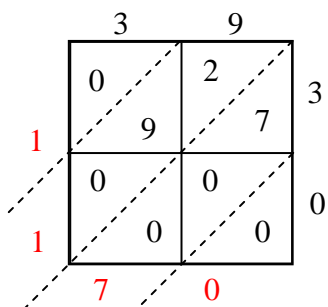
8)  $28 \times 79 =$



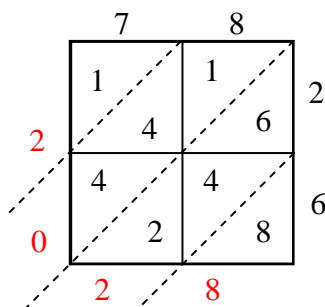
9)  $97 \times 26 =$



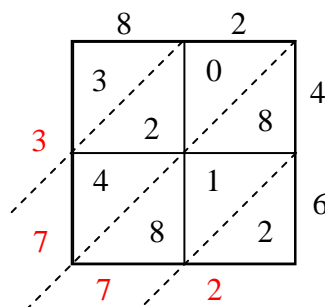
10)  $39 \times 30 =$



11)  $78 \times 26 =$



12)  $82 \times 46 =$



Answers

1. 2,754
2. 6,900
3. 2,442
4. 2,244
5. 3,393
6. 1,113
7. 4,158
8. 2,212
9. 2,522
10. 1,170
11. 2,028
12. 3,772