



Measure the width and height of each block in inches and in centimeters.

Ex)



**Answers**

Ex. 5 1/2 0 1/2 **14** **1.3**


1. \_\_\_\_\_

2. \_\_\_\_\_


3. \_\_\_\_\_

4. \_\_\_\_\_


1)




2)



3)



4)





Measure the width and height of each block in inches and in centimeters.

Ex)



**Answers**

Ex. 5 1/2 0 1/2 **14** **1.3**


1. 3 1/2 1 1/2 **8.9** **3.8**

2. **4** 0 1/2 **10.2** **1.3**

3. **5** **1** 12.7 2.5

4. **1** **1** 2.5 2.5

1)



2)



3)



4)

