




Measure each of the bars (in centimeters) and then generate a line plot based on the information.

Answers



- 1. \_\_\_\_\_
- 2. \_\_\_\_\_
- 3. \_\_\_\_\_
- 4. \_\_\_\_\_
- 5. \_\_\_\_\_
- 6. \_\_\_\_\_
- 7. \_\_\_\_\_
- 8. \_\_\_\_\_
- 9. \_\_\_\_\_
- 10. \_\_\_\_\_
- 11. \_\_\_\_\_
- 12. \_\_\_\_\_
- 13. \_\_\_\_\_
- 14. \_\_\_\_\_
- 15. \_\_\_\_\_

**Line Plot**



Measure each of the bars (in centimeters) and then generate a line plot based on the information.


Answers

1)  6

1. 6

2)  6

2. 6

3)  9

3. 9

4)  6


4. 6

5)  6

5. 6

6)  6

6. 6

7)  6

7. 6

8)  9


8. 9

9)  9

9. 9

10)  9

10. 9

11)  6


11. 6

12)  6


12. 6

13)  2

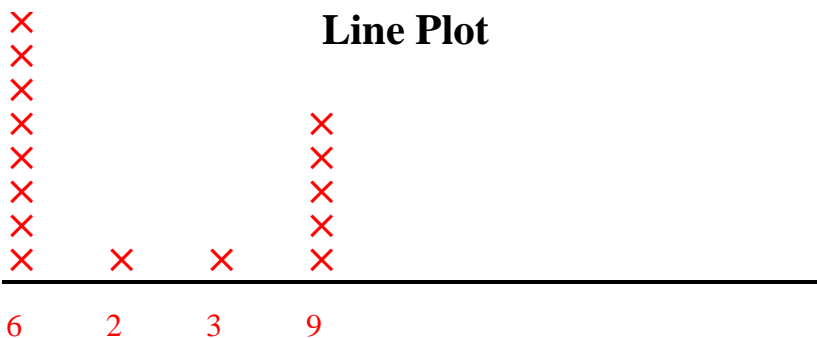
13. 2

14)  9

14. 9

15)  3


15. 3





Measure each of the bars (in centimeters) and then generate a line plot based on the information.

Answers


















- 1. \_\_\_\_\_
- 2. \_\_\_\_\_
- 3. \_\_\_\_\_
- 4. \_\_\_\_\_
- 5. \_\_\_\_\_
- 6. \_\_\_\_\_
- 7. \_\_\_\_\_
- 8. \_\_\_\_\_
- 9. \_\_\_\_\_
- 10. \_\_\_\_\_
- 11. \_\_\_\_\_
- 12. \_\_\_\_\_
- 13. \_\_\_\_\_
- 14. \_\_\_\_\_
- 15. \_\_\_\_\_

**Line Plot**

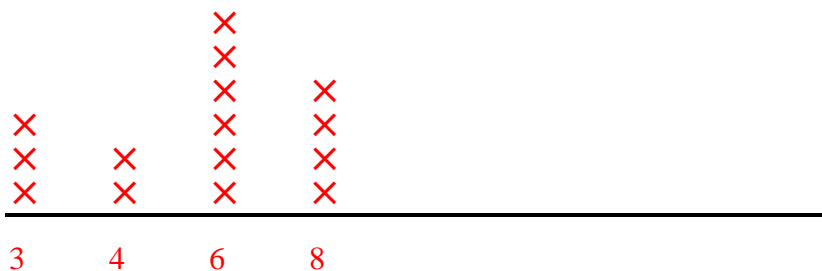


Measure each of the bars (in centimeters) and then generate a line plot based on the information.

- 1)  3
- 2)  4
- 3)  6
- 4)  6
- 5)  4
- 6)  3
- 7)  6
- 8)  8
- 9)  8
- 10)  6
- 11)  8
- 12)  3
- 13)  6
- 14)  6
- 15)  8

- Answers
- 1. 3
  - 2. 4
  - 3. 6
  - 4. 6
  - 5. 4
  - 6. 3
  - 7. 6
  - 8. 8
  - 9. 8
  - 10. 6
  - 11. 8
  - 12. 3
  - 13. 6
  - 14. 6
  - 15. 8

**Line Plot**





Measure each of the bars (in centimeters) and then generate a line plot based on the information.


Answers



1. \_\_\_\_\_



2. \_\_\_\_\_




3. \_\_\_\_\_



4. \_\_\_\_\_



5. \_\_\_\_\_



6. \_\_\_\_\_



7. \_\_\_\_\_




8. \_\_\_\_\_



9. \_\_\_\_\_




10. \_\_\_\_\_




11. \_\_\_\_\_




12. \_\_\_\_\_



13. \_\_\_\_\_



14. \_\_\_\_\_

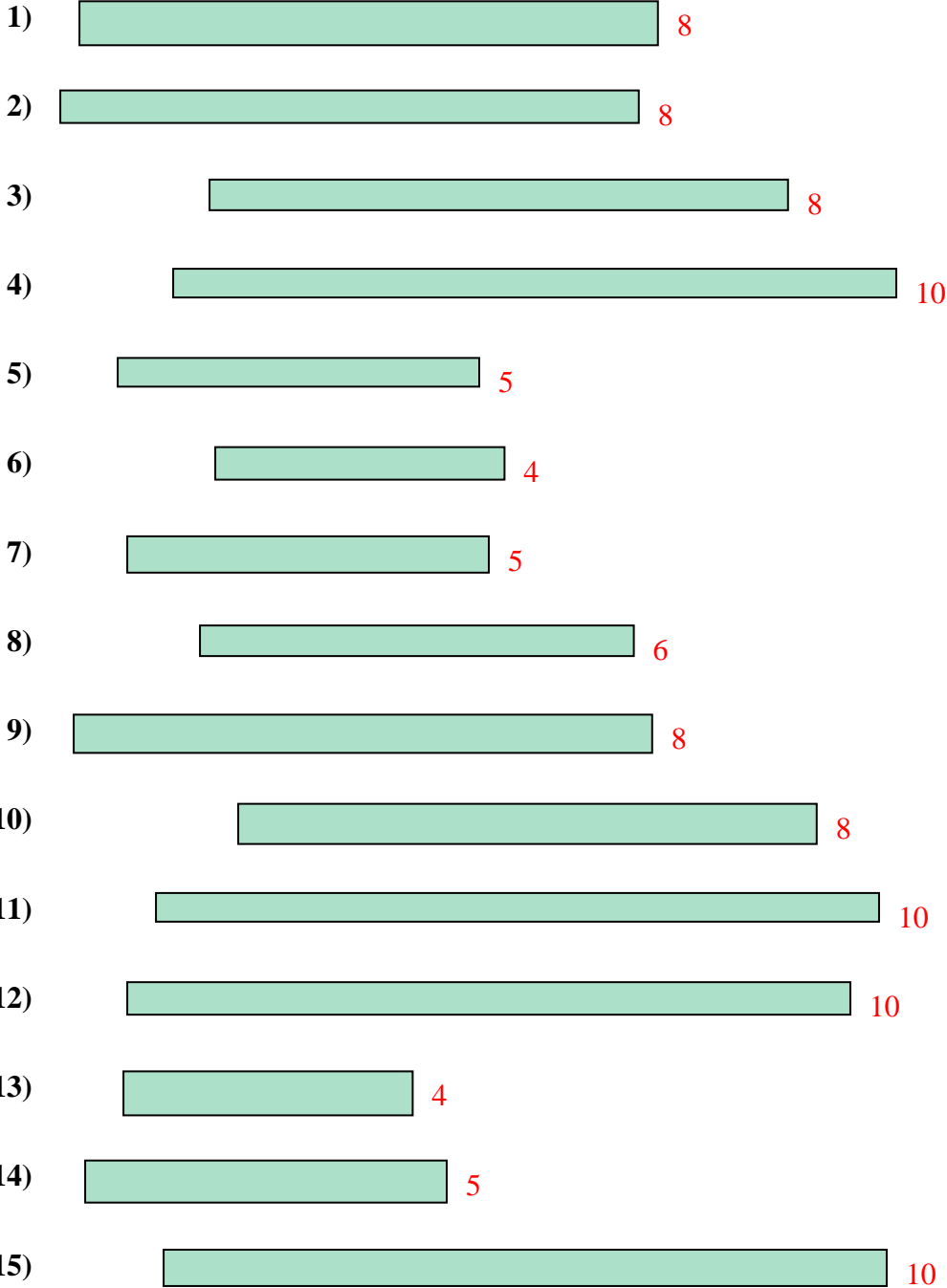


15. \_\_\_\_\_

**Line Plot**

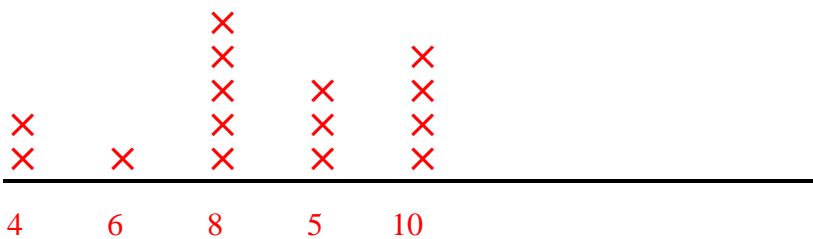


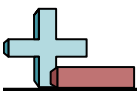
Measure each of the bars (in centimeters) and then generate a line plot based on the information.



- Answers**
1. 8
  2. 8
  3. 8
  4. 10
  5. 5
  6. 4
  7. 5
  8. 6
  9. 8
  10. 8
  11. 10
  12. 10
  13. 4
  14. 5
  15. 10

**Line Plot**





Measure each of the bars (in centimeters) and then generate a line plot based on the information.

Answers



1. \_\_\_\_\_



2. \_\_\_\_\_



3. \_\_\_\_\_



4. \_\_\_\_\_



5. \_\_\_\_\_



6. \_\_\_\_\_



7. \_\_\_\_\_



8. \_\_\_\_\_



9. \_\_\_\_\_



10. \_\_\_\_\_



11. \_\_\_\_\_



12. \_\_\_\_\_



13. \_\_\_\_\_



14. \_\_\_\_\_




15. \_\_\_\_\_

**Line Plot**



Measure each of the bars (in centimeters) and then generate a line plot based on the information.



Answers

1. 4

2. 2

3. 10

4. 2

5. 2

6. 4

7. 2

8. 7

9. 10

10. 7

11. 6

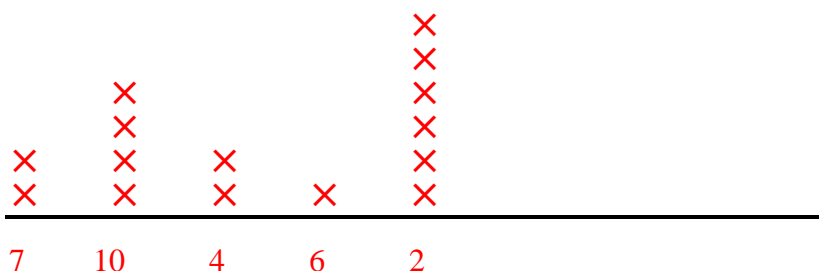
12. 10

13. 2

14. 10

15. 2

**Line Plot**







Measure each of the bars (in centimeters) and then generate a line plot based on the information.

Answers



1. \_\_\_\_\_



2. \_\_\_\_\_



3. \_\_\_\_\_



4. \_\_\_\_\_



5. \_\_\_\_\_



6. \_\_\_\_\_



7. \_\_\_\_\_



8. \_\_\_\_\_



9. \_\_\_\_\_



10. \_\_\_\_\_



11. \_\_\_\_\_



12. \_\_\_\_\_



13. \_\_\_\_\_



14. \_\_\_\_\_



15. \_\_\_\_\_

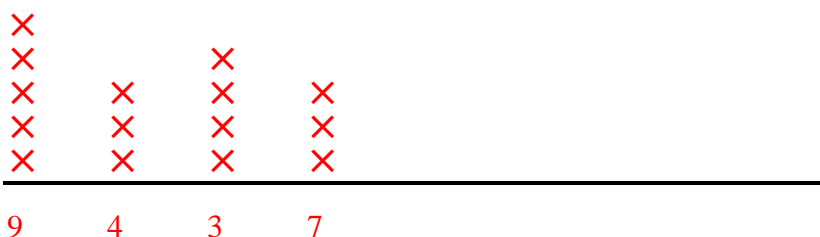
**Line Plot**



Measure each of the bars (in centimeters) and then generate a line plot based on the information.



**Line Plot**



Answers

1. 9

2. 3

3. 3

4. 3

5. 7

6. 9

7. 3

8. 9

9. 4

10. 9

11. 7

12. 7

13. 4

14. 9

15. 4



Measure each of the bars (in centimeters) and then generate a line plot based on the information.

Answers



1. \_\_\_\_\_



2. \_\_\_\_\_



3. \_\_\_\_\_



4. \_\_\_\_\_



5. \_\_\_\_\_



6. \_\_\_\_\_



7. \_\_\_\_\_



8. \_\_\_\_\_



9. \_\_\_\_\_



10. \_\_\_\_\_



11. \_\_\_\_\_



12. \_\_\_\_\_



13. \_\_\_\_\_



14. \_\_\_\_\_


















15. \_\_\_\_\_

**Line Plot**

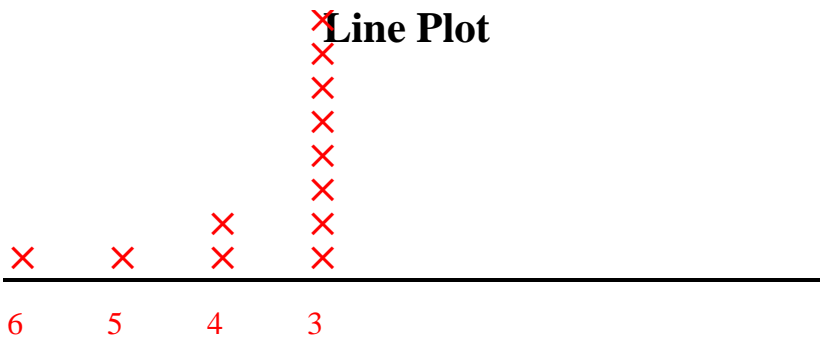


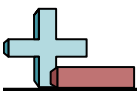
Measure each of the bars (in centimeters) and then generate a line plot based on the information.

- 1)  3
- 2)  3
- 3)  3
- 4)  3
- 5)  4
- 6)  3
- 7)  3
- 8)  5
- 9)  3
- 10)  3
- 11)  6
- 12)  3
- 13)  3
- 14)  3
- 15)  4

- Answers
- 1. 3
  - 2. 3
  - 3. 3
  - 4. 3
  - 5. 4
  - 6. 3
  - 7. 3
  - 8. 5
  - 9. 3
  - 10. 3
  - 11. 6
  - 12. 3
  - 13. 3
  - 14. 3
  - 15. 4

**Line Plot**





Measure each of the bars (in centimeters) and then generate a line plot based on the information.

Answers



1. \_\_\_\_\_



2. \_\_\_\_\_



3. \_\_\_\_\_



4. \_\_\_\_\_



5. \_\_\_\_\_



6. \_\_\_\_\_



7. \_\_\_\_\_



8. \_\_\_\_\_



9. \_\_\_\_\_



10. \_\_\_\_\_



11. \_\_\_\_\_



12. \_\_\_\_\_



13. \_\_\_\_\_



14. \_\_\_\_\_




15. \_\_\_\_\_

**Line Plot**

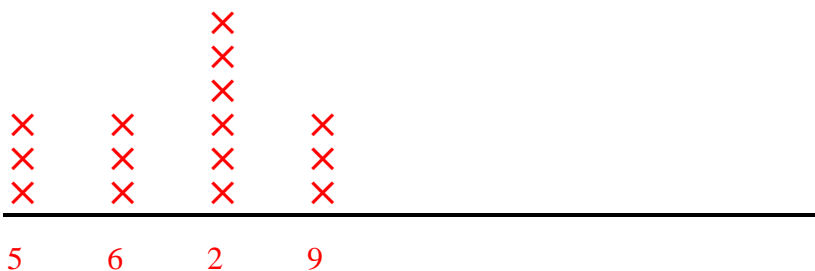


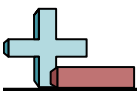
Measure each of the bars (in centimeters) and then generate a line plot based on the information.

- 1)  9
- 2)  2
- 3)  9
- 4)  6
- 5)  5
- 6)  2
- 7)  2
- 8)  5
- 9)  2
- 10)  9
- 11)  5
- 12)  6
- 13)  2
- 14)  6
- 15)  2

- Answers
- 1. 9
  - 2. 2
  - 3. 9
  - 4. 6
  - 5. 5
  - 6. 2
  - 7. 2
  - 8. 5
  - 9. 2
  - 10. 9
  - 11. 5
  - 12. 6
  - 13. 2
  - 14. 6
  - 15. 2

**Line Plot**





Measure each of the bars (in centimeters) and then generate a line plot based on the information.

Answers



1. \_\_\_\_\_



2. \_\_\_\_\_



3. \_\_\_\_\_




4. \_\_\_\_\_



5. \_\_\_\_\_



6. \_\_\_\_\_



7. \_\_\_\_\_



8. \_\_\_\_\_



9. \_\_\_\_\_



10. \_\_\_\_\_



11. \_\_\_\_\_



12. \_\_\_\_\_



13. \_\_\_\_\_



14. \_\_\_\_\_



15. \_\_\_\_\_

**Line Plot**



Measure each of the bars (in centimeters) and then generate a line plot based on the information.


Answers

1)  3

1. 3

2)  7

2. 7

3)  7

3. 7

4)  4

4. 4

5)  7


5. 7

6)  7

6. 7

7)  3

7. 3

8)  10

8. 10

9)  7

9. 7

10)  7

10. 7

11)  7

11. 7

12)  10

12. 10

13)  9

13. 9

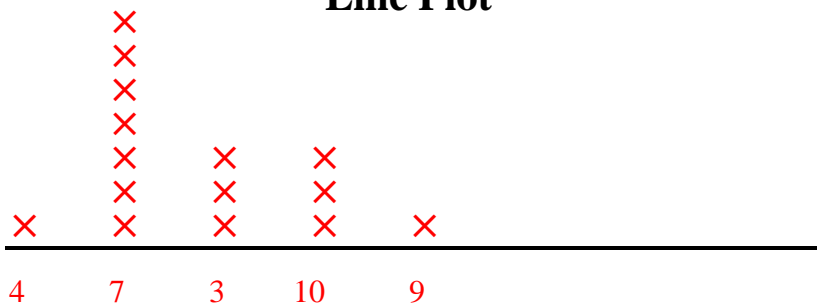
14)  3

14. 3

15)  10

15. 10

**Line Plot**










Measure each of the bars (in centimeters) and then generate a line plot based on the information.

Answers

- 1) 
- 2) 
- 3) 
- 4) 
- 5) 
- 6) 
- 7) 
- 8) 
- 9) 
- 10) 
- 11) 
- 12) 
- 13) 
- 14) 
- 15) 

- 1. \_\_\_\_\_
- 2. \_\_\_\_\_
- 3. \_\_\_\_\_
- 4. \_\_\_\_\_
- 5. \_\_\_\_\_
- 6. \_\_\_\_\_
- 7. \_\_\_\_\_
- 8. \_\_\_\_\_
- 9. \_\_\_\_\_
- 10. \_\_\_\_\_
- 11. \_\_\_\_\_
- 12. \_\_\_\_\_
- 13. \_\_\_\_\_
- 14. \_\_\_\_\_
- 15. \_\_\_\_\_

**Line Plot**



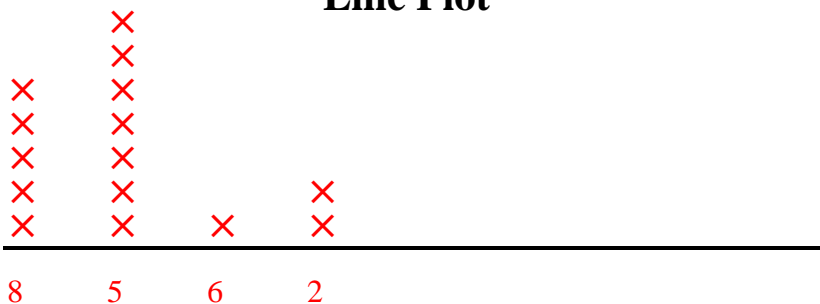
Measure each of the bars (in centimeters) and then generate a line plot based on the information.

- 1) 5
- 2) 5
- 3) 8
- 4) 5
- 5) 2
- 6) 5
- 7) 5
- 8) 6
- 9) 5
- 10) 2
- 11) 8
- 12) 8
- 13) 8
- 14) 8
- 15) 5

Answers

- 1. 5
- 2. 5
- 3. 8
- 4. 5
- 5. 2
- 6. 5
- 7. 5
- 8. 6
- 9. 5
- 10. 2
- 11. 8
- 12. 8
- 13. 8
- 14. 8
- 15. 5

**Line Plot**





Measure each of the bars (in centimeters) and then generate a line plot based on the information.

Answers



1. \_\_\_\_\_



2. \_\_\_\_\_



3. \_\_\_\_\_



4. \_\_\_\_\_



5. \_\_\_\_\_



6. \_\_\_\_\_




7. \_\_\_\_\_



8. \_\_\_\_\_



9. \_\_\_\_\_



10. \_\_\_\_\_



11. \_\_\_\_\_



12. \_\_\_\_\_



13. \_\_\_\_\_



14. \_\_\_\_\_


















15. \_\_\_\_\_

**Line Plot**



Measure each of the bars (in centimeters) and then generate a line plot based on the information.

- 1)  9
- 2)  8
- 3)  9
- 4)  2
- 5)  2
- 6)  5
- 7)  8
- 8)  8
- 9)  8
- 10)  10
- 11)  10
- 12)  8
- 13)  9
- 14)  8
- 15)  9

- Answers
- 1. 9
  - 2. 8
  - 3. 9
  - 4. 2
  - 5. 2
  - 6. 5
  - 7. 8
  - 8. 8
  - 9. 8
  - 10. 10
  - 11. 10
  - 12. 8
  - 13. 9
  - 14. 8
  - 15. 9

**Line Plot**

