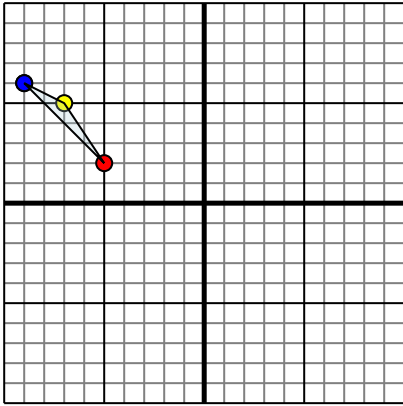




Reflect each shape as described.

1)

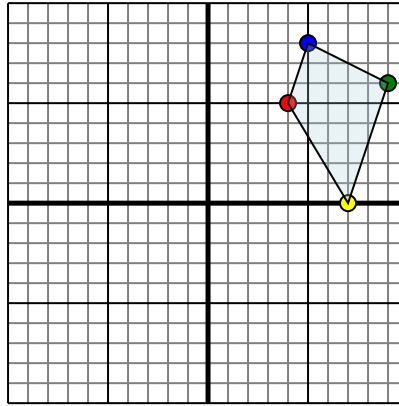


The shape above has the following coordinates:

- A. (-5,2)
- B. (-7,5)
- C. (-9,6)

Reflect the shape over the X axis.

2)

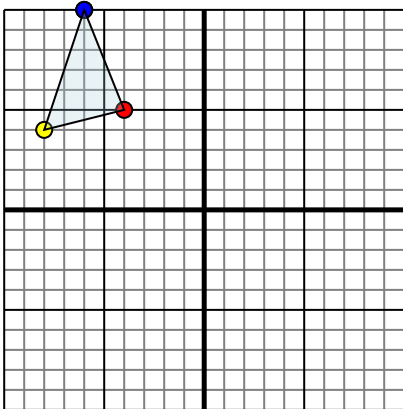


The shape above has the following coordinates:

- A. (4,5)
- B. (7,0)
- C. (9,6)
- D. (5,8)

Reflect the shape over the Y axis.

3)

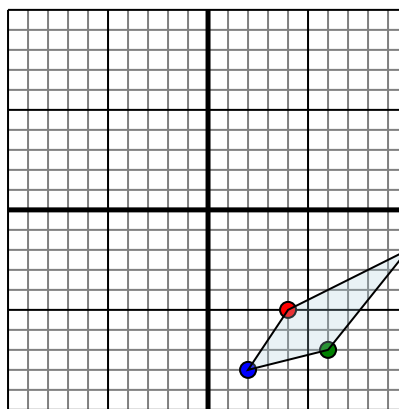


The shape above has the following coordinates:

- A. (-4,5)
- B. (-8,4)
- C. (-6,10)

Reflect the shape over the X axis.

4)



The shape above has the following coordinates:

- A. (4,-5)
- B. (10,-2)
- C. (6,-7)
- D. (2,-8)

Reflect the shape over the X axis.

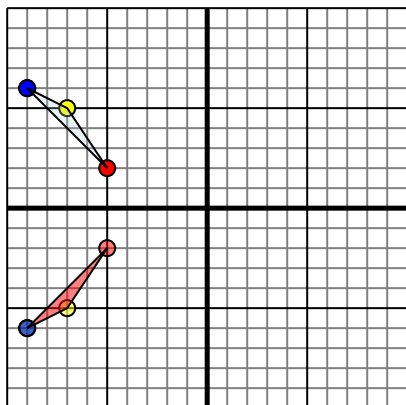
Answers

- 1. _____
- 2. _____
- 3. _____
- 4. _____



Reflect each shape as described.

1)

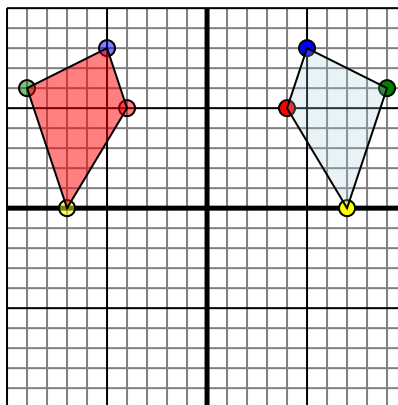


The shape above has the following coordinates:

- A. (-5,2)
- B. (-7,5)
- C. (-9,6)

Reflect the shape over the X axis.

2)

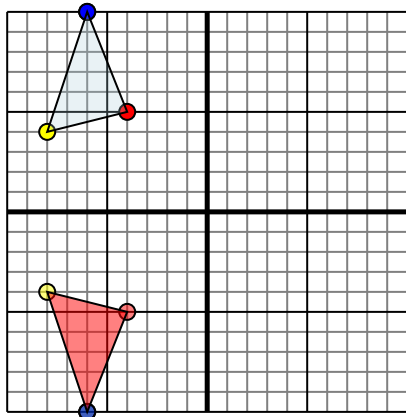


The shape above has the following coordinates:

- A. (4,5)
- B. (7,0)
- C. (9,6)
- D. (5,8)

Reflect the shape over the Y axis.

3)

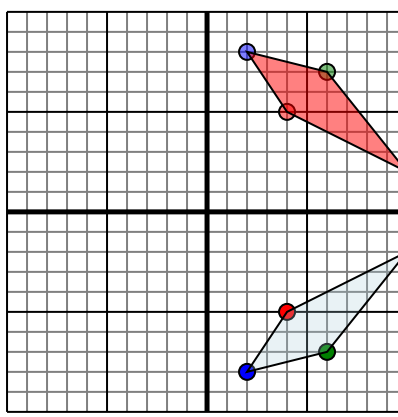


The shape above has the following coordinates:

- A. (-4,5)
- B. (-8,4)
- C. (-6,10)

Reflect the shape over the X axis.

4)



The shape above has the following coordinates:

- A. (4,-5)
- B. (10,-2)
- C. (6,-7)
- D. (2,-8)

Reflect the shape over the X axis.

Answers

- 1. -5,-2 -7,-5 -9,-6 Graph
- 2. -4,5 -7,0 -9,6 -5,8 Graph
- 3. -4,-5 -8,-4 -6,-10 Graph
- 4. 4,5 10,2 6,7 2,8 Graph