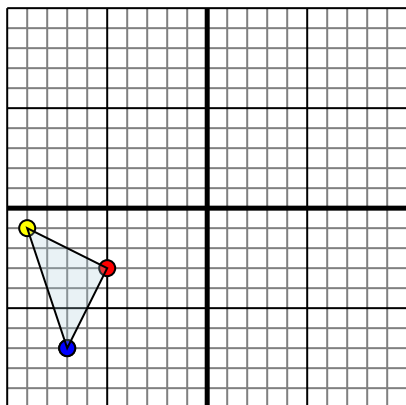




Reflect each shape as described.

1)

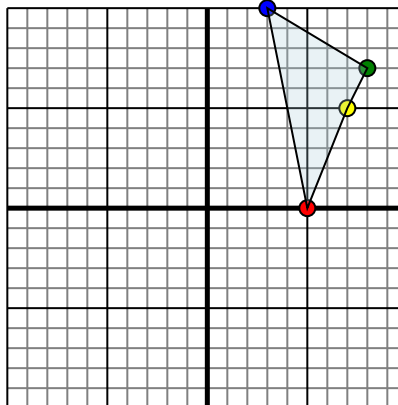


The shape above has the following coordinates:

- A.  $(-5, -3)$
- B.  $(-9, -1)$
- C.  $(-7, -7)$

Reflect the shape over the X axis.

2)

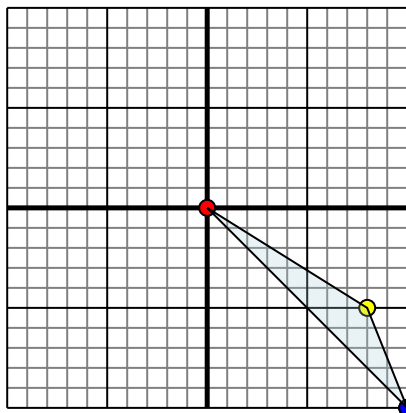


The shape above has the following coordinates:

- A.  $(5, 0)$
- B.  $(7, 5)$
- C.  $(8, 7)$
- D.  $(3, 10)$

Reflect the shape over the X axis.

3)

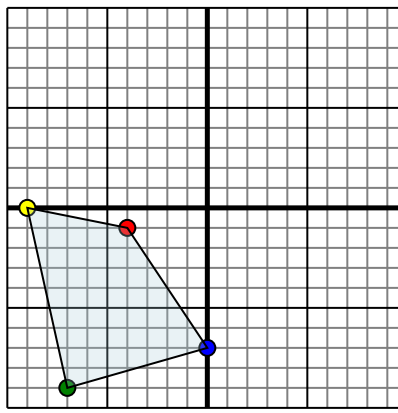


The shape above has the following coordinates:

- A.  $(0, 0)$
- B.  $(8, -5)$
- C.  $(10, -10)$

Reflect the shape over the Y axis.

4)



The shape above has the following coordinates:

- A.  $(-4, -1)$
- B.  $(-9, 0)$
- C.  $(-7, -9)$
- D.  $(0, -7)$

Reflect the shape over the Y axis.

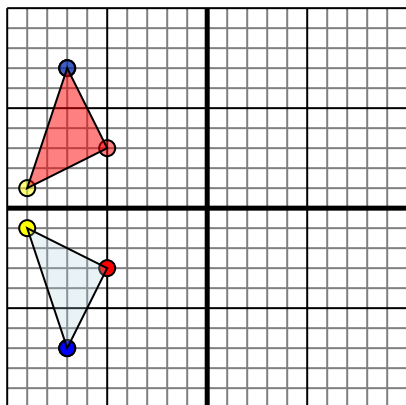
**Answers**

1. \_\_\_\_\_
2. \_\_\_\_\_
3. \_\_\_\_\_
4. \_\_\_\_\_



Reflect each shape as described.

1)

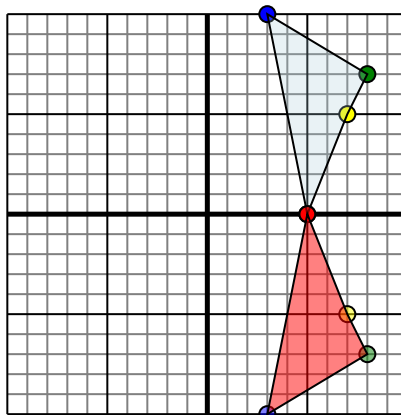


The shape above has the following coordinates:

- A. (-5,-3)
- B. (-9,-1)
- C. (-7,-7)

Reflect the shape over the X axis.

2)

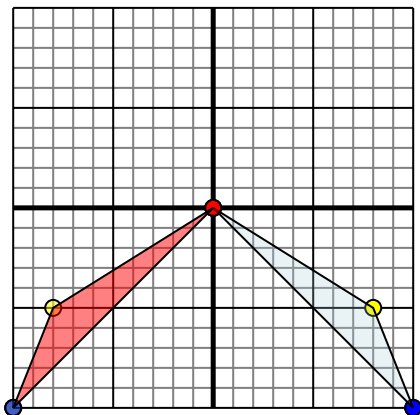


The shape above has the following coordinates:

- A. (5,0)
- B. (7,5)
- C. (8,7)
- D. (3,10)

Reflect the shape over the X axis.

3)

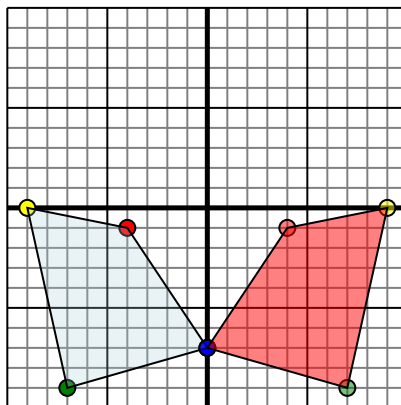


The shape above has the following coordinates:

- A. (0,0)
- B. (8,-5)
- C. (10,-10)

Reflect the shape over the Y axis.

4)



The shape above has the following coordinates:

- A. (-4,-1)
- B. (-9,0)
- C. (-7,-9)
- D. (0,-7)

Reflect the shape over the Y axis.

**Answers**

1. -5,3 -9,1 -7,7 Graph
2. 5,0 7,5 8,7 3,-10 Graph
3. 0,0 -8,-5 -10,-10 Graph
4. 4,-1 9,0 7,-9 0,-7 Graph