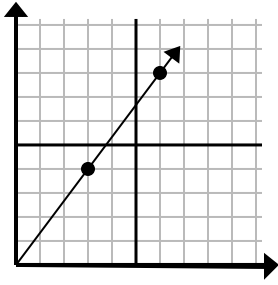




Determine which choice represents a point on the line if it were to continue.

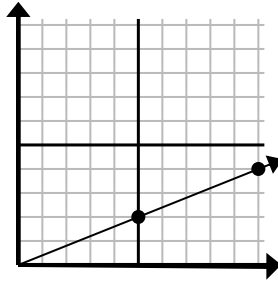
Answers

1)



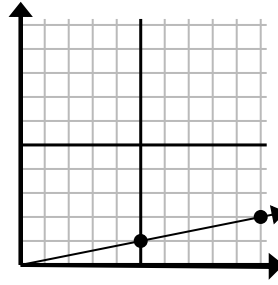
- A. (18 , 24)
- B. (15 , 20)
- C. (9 , 12)
- D. (9 , 5)

2)



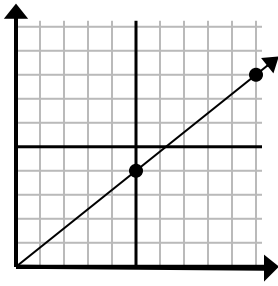
- A. (11 , 7)
- B. (25 , 10)
- C. (30 , 12)
- D. (15 , 6)

3)



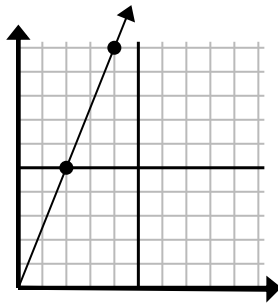
- A. (15 , 3)
- B. (20 , 4)
- C. (30 , 6)
- D. (12 , 6)

4)



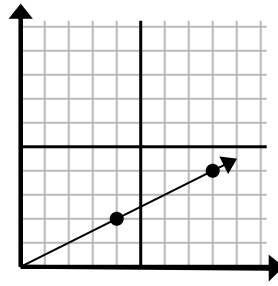
- A. (13 , 5)
- B. (15 , 12)
- C. (30 , 24)
- D. (11 , 6)

5)



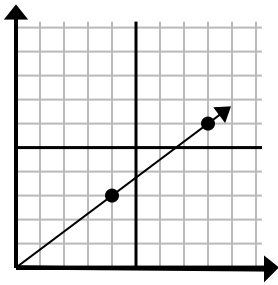
- A. (8 , 20)
- B. (7 , 6)
- C. (6 , 15)
- D. (10 , 25)

6)



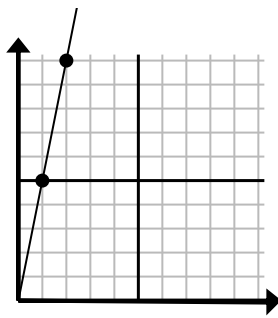
- A. (24 , 12)
- B. (28 , 14)
- C. (12 , 6)
- D. (10 , 4)

7)



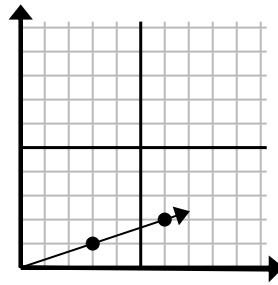
- A. (12 , 9)
- B. (24 , 18)
- C. (12 , 4)
- D. (16 , 12)

8)



- A. (6 , 8)
- B. (3 , 15)
- C. (7 , 7)
- D. (6 , 30)

9)



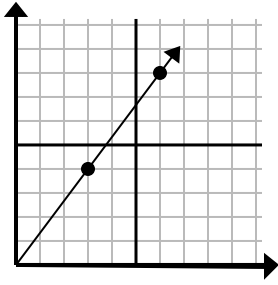
- A. (9 , 3)
- B. (8 , 6)
- C. (7 , 2)
- D. (18 , 6)

1. _____
2. _____
3. _____
4. _____
5. _____
6. _____
7. _____
8. _____
9. _____



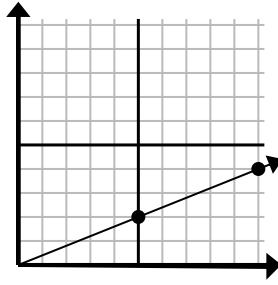
Determine which choice represents a point on the line if it were to continue.

1)



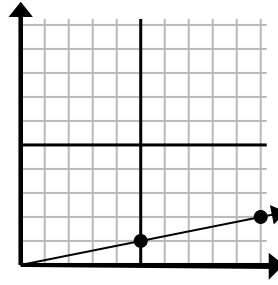
- A. (18, 24)
- B. (15, 20)
- C. (9, 12)
- D. (9, 5)

2)



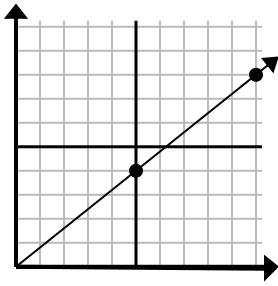
- A. (11, 7)
- B. (25, 10)
- C. (30, 12)
- D. (15, 6)

3)



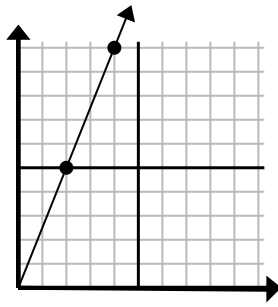
- A. (15, 3)
- B. (20, 4)
- C. (30, 6)
- D. (12, 6)

4)



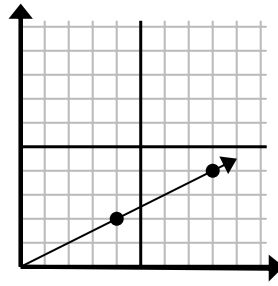
- A. (13, 5)
- B. (15, 12)
- C. (30, 24)
- D. (11, 6)

5)



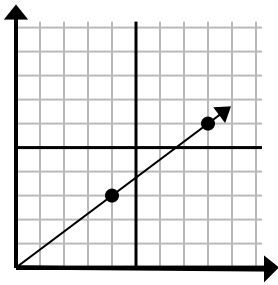
- A. (8, 20)
- B. (7, 6)
- C. (6, 15)
- D. (10, 25)

6)



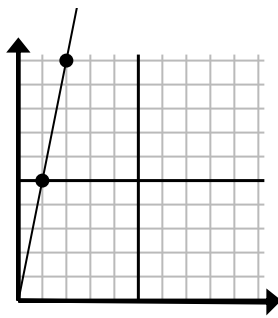
- A. (24, 12)
- B. (28, 14)
- C. (12, 6)
- D. (10, 4)

7)



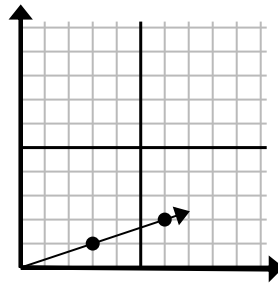
- A. (12, 9)
- B. (24, 18)
- C. (12, 4)
- D. (16, 12)

8)



- A. (6, 8)
- B. (3, 15)
- C. (7, 7)
- D. (6, 30)

9)



- A. (9, 3)
- B. (8, 6)
- C. (7, 2)
- D. (18, 6)

Answers

- 1. **C**
- 2. **D**
- 3. **A**
- 4. **B**
- 5. **C**
- 6. **C**
- 7. **A**
- 8. **B**
- 9. **A**