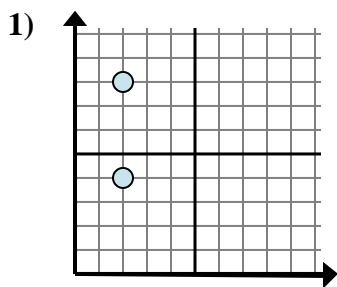


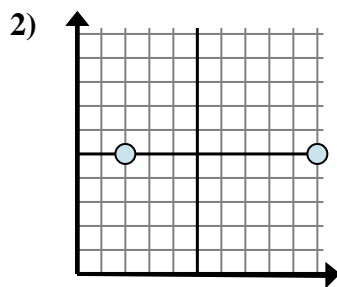


Determine which expression best shows the distance between the two points.

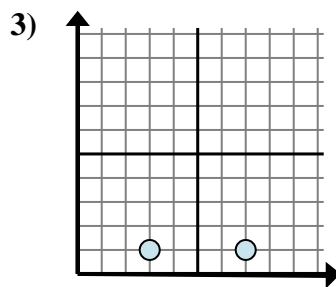
Answers



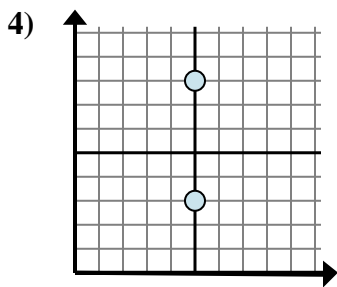
- A. $2 - 4$
- B. $8 - 4$
- C. $4 - 8$
- D. $8 - 2$



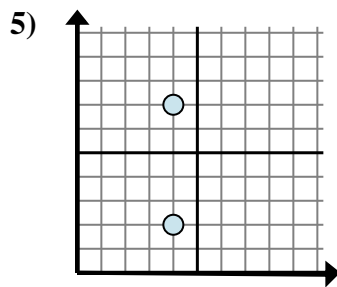
- A. $2 - 5$
- B. $10 - 2$
- C. $5 - 10$
- D. $10 - 5$



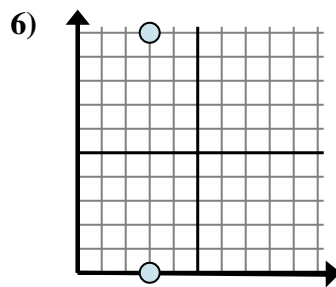
- A. $7 - 1$
- B. $7 - 3$
- C. $3 - 7$
- D. $1 - 1$



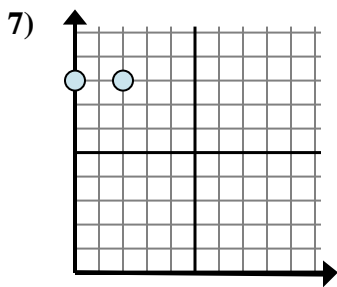
- A. $3 - 8$
- B. $8 - 3$
- C. $5 - 3$
- D. $5 - 5$



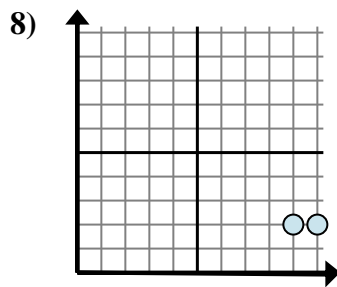
- A. $4 - 4$
- B. $4 - 7$
- C. $4 - 7$
- D. $7 - 2$



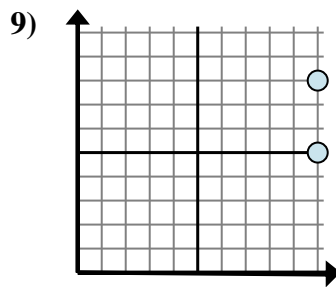
- A. $10 - 0$
- B. $3 - 3$
- C. $3 - 0$
- D. $0 - 10$



- A. $8 - 8$
- B. $8 - 2$
- C. $8 - 2$
- D. $2 - 0$



- A. $2 - 9$
- B. $10 - 9$
- C. $9 - 10$
- D. $2 - 2$

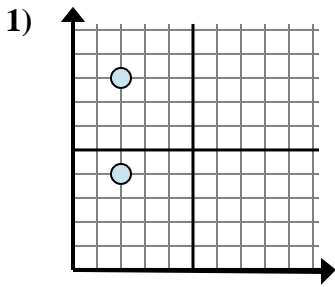


- A. $8 - 5$
- B. $8 - 10$
- C. $10 - 10$
- D. $5 - 10$

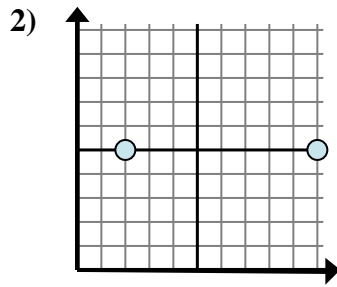
1. _____
2. _____
3. _____
4. _____
5. _____
6. _____
7. _____
8. _____
9. _____



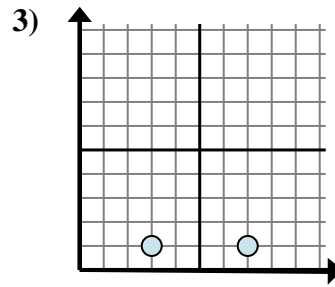
Determine which expression best shows the distance between the two points.



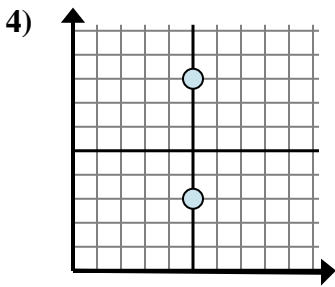
- A. $2 - 4$
- B. $8 - 4$
- C. $4 - 8$
- D. $8 - 2$



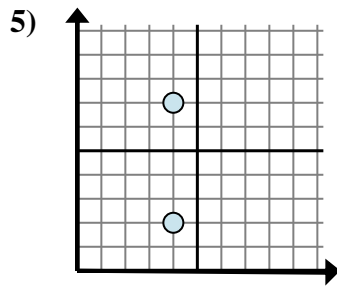
- A. $2 - 5$
- B. $10 - 2$
- C. $5 - 10$
- D. $10 - 5$



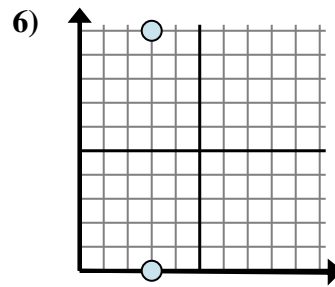
- A. $7 - 1$
- B. $7 - 3$
- C. $3 - 7$
- D. $1 - 1$



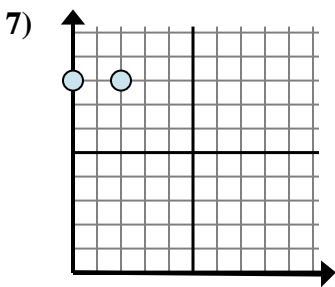
- A. $3 - 8$
- B. $8 - 3$
- C. $5 - 3$
- D. $5 - 5$



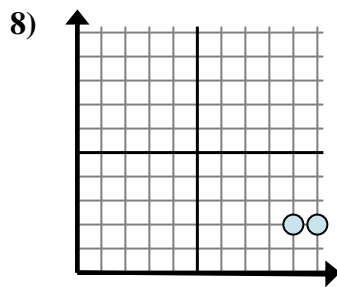
- A. $4 - 4$
- B. $4 - 7$
- C. $4 - 7$
- D. $7 - 2$



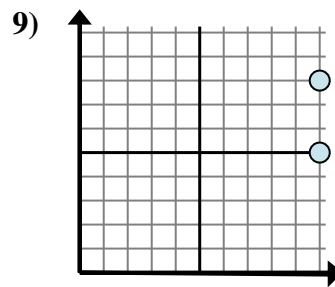
- A. $10 - 0$
- B. $3 - 3$
- C. $3 - 0$
- D. $0 - 10$



- A. $8 - 8$
- B. $8 - 2$
- C. $8 - 2$
- D. $2 - 0$



- A. $2 - 9$
- B. $10 - 9$
- C. $9 - 10$
- D. $2 - 2$



- A. $8 - 5$
- B. $8 - 10$
- C. $10 - 10$
- D. $5 - 10$

Answers

- 1. **B**
- 2. **B**
- 3. **B**
- 4. **B**
- 5. **D**
- 6. **A**
- 7. **D**
- 8. **B**
- 9. **A**