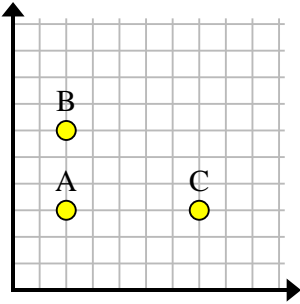


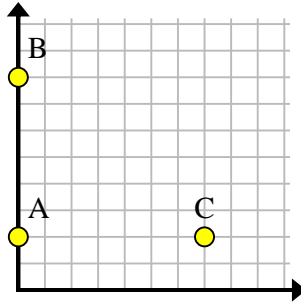


Find the coordinates of point D to make a rectangle.

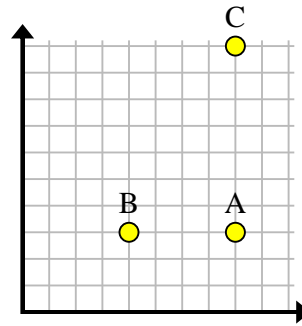
Ex)



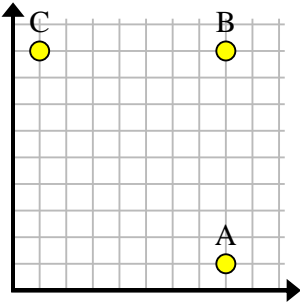
1)



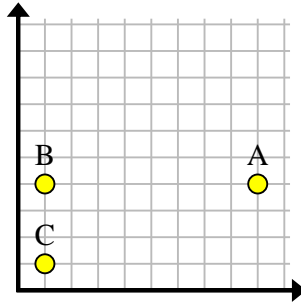
2)



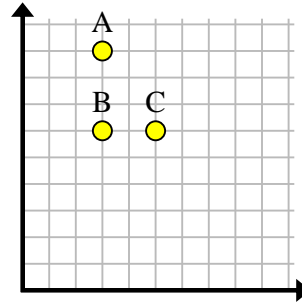
3)



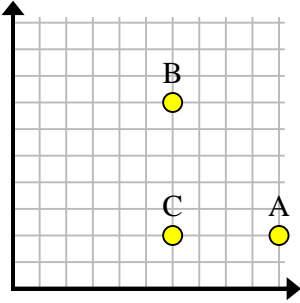
4)



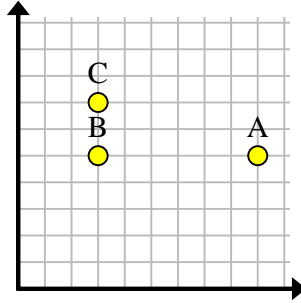
5)



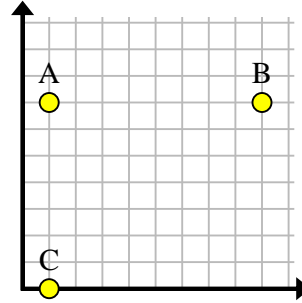
6)



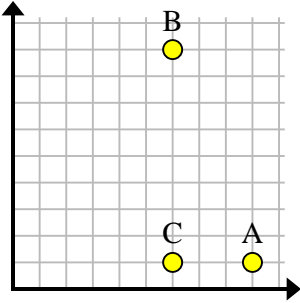
7)



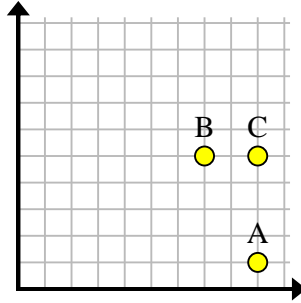
8)



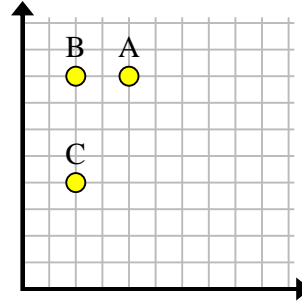
9)



10)



11)



Answers

Ex. (7, 6)

1. \_\_\_\_\_

2. \_\_\_\_\_

3. \_\_\_\_\_

4. \_\_\_\_\_

5. \_\_\_\_\_

6. \_\_\_\_\_

7. \_\_\_\_\_

8. \_\_\_\_\_

9. \_\_\_\_\_

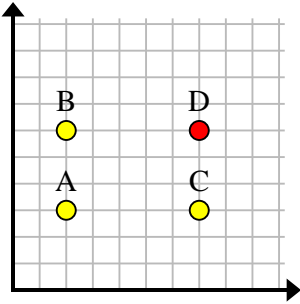
10. \_\_\_\_\_

11. \_\_\_\_\_

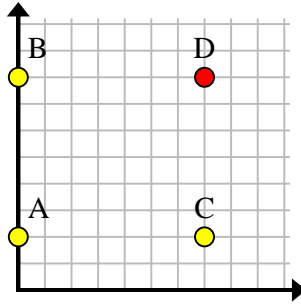


Find the coordinates of point D to make a rectangle.

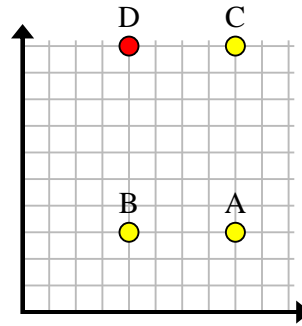
Ex)



1)



2)



**Answers**

Ex. (7, 6)

1. (7, 8)

2. (4, 10)

3. (1, 1)

4. (9, 1)

5. (5, 9)

6. (10, 7)

7. (9, 7)

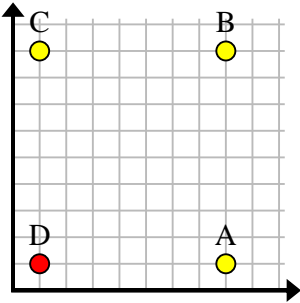
8. (9, 0)

9. (9, 9)

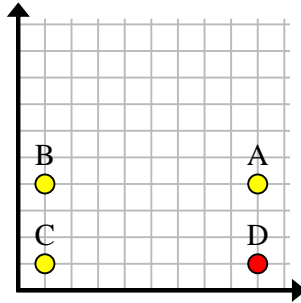
10. (7, 1)

11. (4, 4)

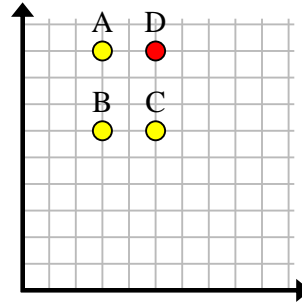
3)



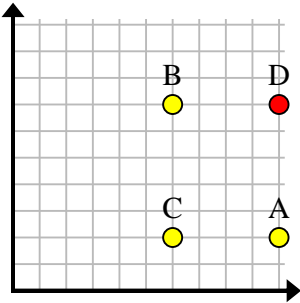
4)



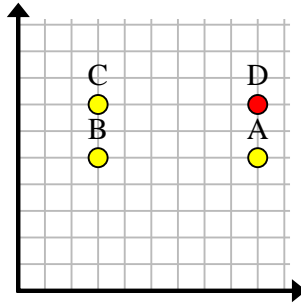
5)



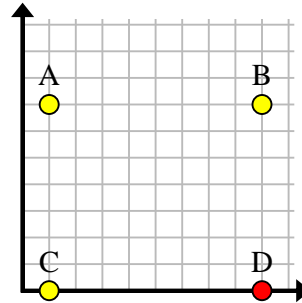
6)



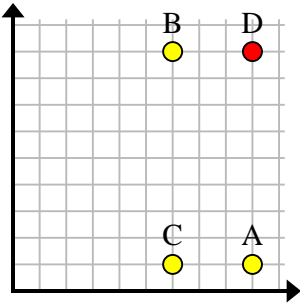
7)



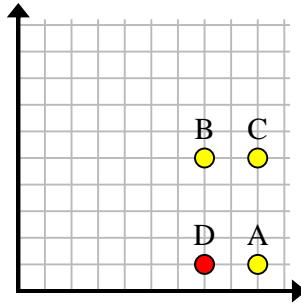
8)



9)



10)



11)

